



पुर्णा International School

Shree Swaminarayan Gurukul, Zundal







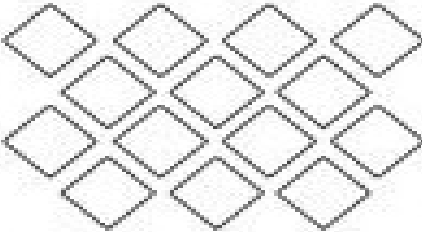











Kindergarten Summative Assignment 2018-19

Sub:- Mathematics






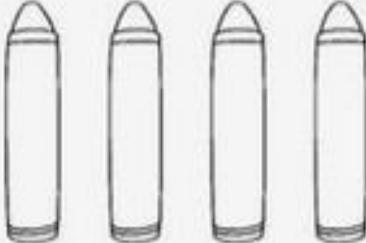

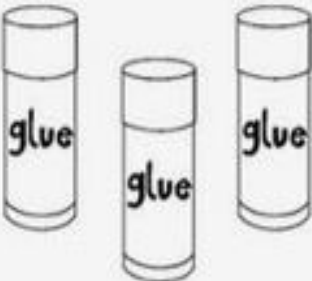
Q-1 Write before and after number.

Before	After
<u>20</u>	<u>15</u>
<u>19</u>	<u>13</u>
<u>1</u>	<u>18</u>

Q-2 How many are there?

	9		13
	11		10
	7		12
	15		11
	14		10
	13		12
	11		13
	13		15
	10		12


Q-3 Tick the correct row.

	<input type="radio"/> 2		<input type="radio"/> 1
	<input type="radio"/> 3		<input type="radio"/> 2
	<input type="radio"/> 4		<input type="radio"/> 3
	<input type="radio"/> 5		<input type="radio"/> 4
	<input type="radio"/> 1		<input type="radio"/> 4
	<input type="radio"/> 2		<input type="radio"/> 5
	<input type="radio"/> 4		<input type="radio"/> 2
	<input type="radio"/> 5		<input type="radio"/> 3

Q-4 Count and circle.

circle 5 calculators	circle 9 sharpeners
circle 8 pencils	circle 7 erasers
circle 6 rulers	circle 10 books

Q-5 Match the following.



-
-
-
















- LONG
- LONGEST
- LONGER




-
-
-









- LONGEST
- LONGER
- LONG

Q-6 Write the numbers in digits.

 One	-----
 Two	-----
 Three	-----
 Four	-----
 Five	-----
  Six	-----
  Seven	-----
  Eight	-----
  Nine	-----
  Ten	-----

Q-7 Count and circle the correct number.

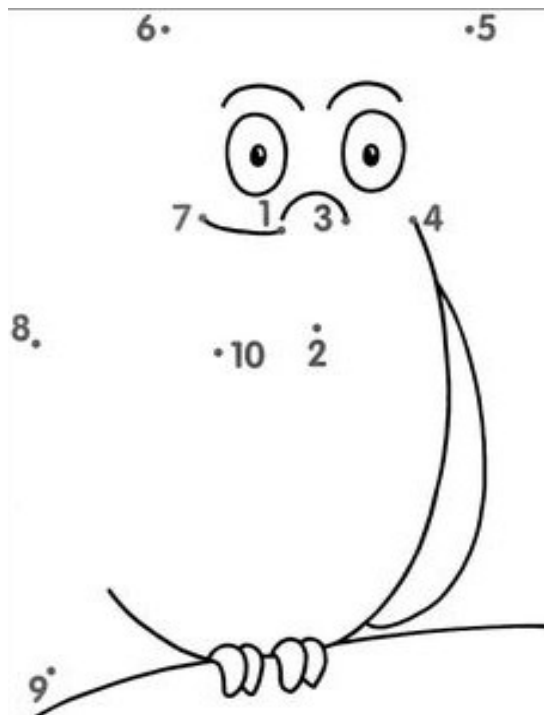
“Count &  the correct number”

 1 2 3 4 5	 1 2 3 4 5
 6 7 8 9 10	 6 7 8 9 10
 1 2 3 4 5	 6 7 8 9 10
 6 7 8 9 10	 1 2 3 4 5

Q-8 What comes after?

2	-----		7	-----	-----
5	-----		10	-----	-----
9	-----		15	-----	-----
12	-----		2	-----	-----
15	-----		8	-----	-----
19	-----		18	-----	-----

Q-9 Join the number with dots.



Q -10 Write each missing number.

Write each missing number.

1				5
6				10
11				15
16				20
21				25

Q-11 Continue the pattern.

Circle the shape that comes next.

