



# Purnima International School

Shree Swaminarayan Gurukul, Zundal

PERIODIC ASSESSMENT – 3 2020 -21

Name

Subject : Math

Class : Sr.KG


Marks: 25

Q . 1 Complete the given pattern.

(5 marks)

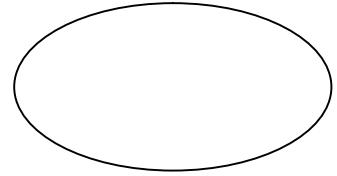


Q. 2 Backward counting 30 to 1

(10 marks)



**Q.3 Write the shapes name and colour it.**

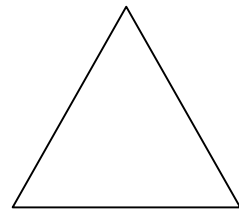


**(10 marks)**



---

---

---



---

---

---