



# पुर्णिमा International School

Shree Swaminarayan Gurukul, Zundal

## PERIODIC ASSIGNMENT -1 2020-21

Grade –SR. KG

Subject- MATHS

Syllabus – Numbers 1 to 50, Number names 1 to 20, Before, after and between numbers

**Q. 1 Write the number 1 – 50**


1	11	21	31	41
2	12	22	32	42
3	13	23	33	43
4	14	24	34	44
5	15	25	35	45
6	16	26	36	46
7	17	27	37	47
8	18	28	38	48
9	19	29	39	49
10	20	30	40	50

**Q. 2 Write the number names**

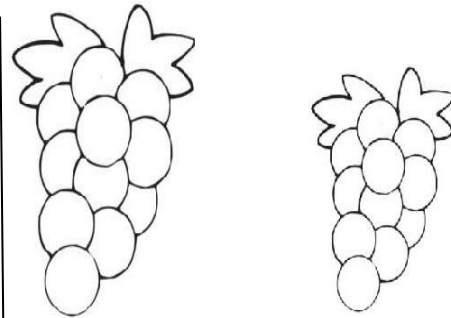
1	One	11	Eleven
2	Two	12	Twelve

3	Three	13	Thirteen
4	Four	14	Fourteen
5	Five	15	Fifteen
6	Six	16	Sixteen
7	Seven	17	Seventeen
8	Eight	18	Eighteen
9	Nine	19	Nineteen
10	Ten	20	Twenty


**Q.3 Circle the big dog.**



**Circle the small fruit.**











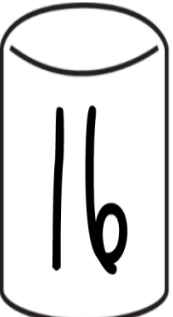
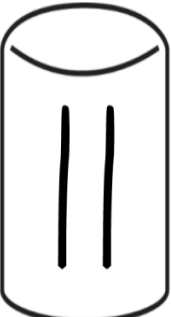














**Circle the heavy one.**



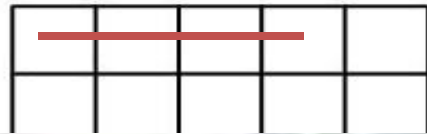
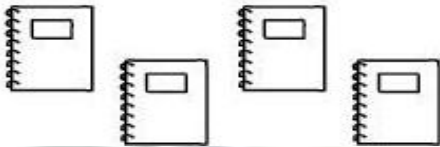
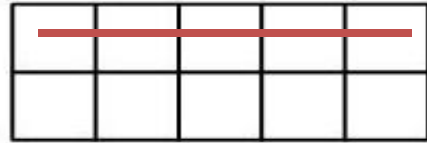
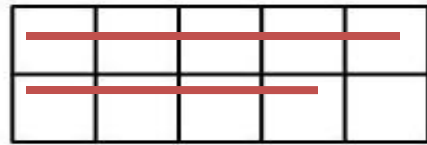
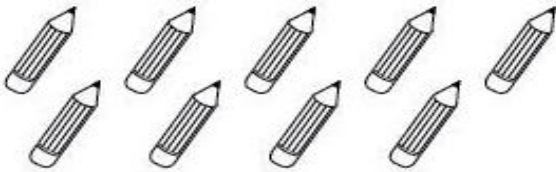
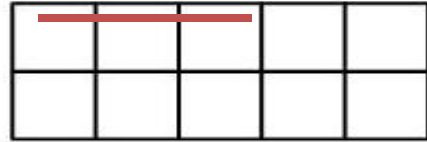
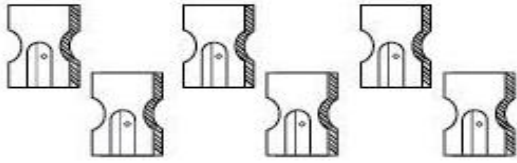
**Q.4 Write the after numbers.**

14	<b>15</b>	4	<b>5</b>	8	<b>9</b>
19	<b>20</b>	26	<b>27</b>	30	<b>31</b>
25	<b>26</b>	7	<b>8</b>	13	<b>14</b>
32	<b>33</b>	39	<b>40</b>	31	<b>32</b>
49	<b>50</b>	44	<b>45</b>	18	<b>19</b>
38	<b>38</b>	11	<b>12</b>	22	<b>23</b>
1	<b>2</b>	16	<b>17</b>	3	<b>4</b>
6	<b>7</b>	15	<b>16</b>	7	<b>8</b>

**Q.5 Write the Between numbers**

 17	 18	 19	 13	 14	 15
 14	 15	 16	 11	 12	 13
 18	 19	 20	 12	 13	 14
 16	 17	 18	 15	 16	 17

**Q.6 Count and colour the same number of box**



**Q.7 Write Before, after and between numbers.**

Before		Between			After	
7	8	1	2	3	6	7
16	17	20	22	22	13	14
11	12	8	9	10	29	30
0	1	14	15	16	34	35
19	20	31	32	33	17	18

