



पुर्णिमा International School

Shree Swaminarayan Gurukul, Zundal

ANNUAL EXAMINATION 2020-21

Student's Name					
Date		Grade	Nursery	Roll No.	
Subject	Maths	Marks	60	Teacher's Sign	


Q.1 Write the Number 1 TO 20.

[10 Marks]

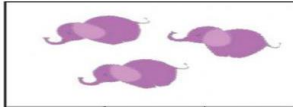
1	<input type="text"/>	11	<input type="text"/>
2	<input type="text"/>	12	<input type="text"/>
3	<input type="text"/>	13	<input type="text"/>
4	<input type="text"/>	14	<input type="text"/>
5	<input type="text"/>	15	<input type="text"/>
6	<input type="text"/>	16	<input type="text"/>
7	<input type="text"/>	17	<input type="text"/>
8	<input type="text"/>	18	<input type="text"/>
9	<input type="text"/>	19	<input type="text"/>
10	<input type="text"/>	20	<input type="text"/>

Q.2 Count and Circle the Correct Numbers


[10 Marks]




8	6	7
---	---	---




5	9	3
---	---	---




12	13	11
----	----	----




20	19	17
----	----	----




16	18	14
----	----	----




4	5	7
---	---	---



10	8	9
----	---	---



14	16	12
----	----	----



17	15	19
----	----	----

Q.3. Write the Before And After Number.

[10 Marks]

<input type="text"/>		<input type="text"/>
----------------------	--	----------------------

<input type="text"/>		<input type="text"/>
----------------------	---	----------------------

<input type="text"/>		<input type="text"/>
----------------------	---	----------------------

<input type="text"/>		<input type="text"/>
----------------------	--	----------------------

<input type="text"/>		<input type="text"/>
----------------------	---	----------------------

<input type="text"/>		<input type="text"/>
----------------------	--	----------------------

<input type="text"/>		<input type="text"/>
----------------------	---	----------------------

<input type="text"/>		<input type="text"/>
----------------------	--	----------------------

<input type="text"/>		<input type="text"/>
----------------------	---	----------------------

<input type="text"/>		<input type="text"/>
----------------------	--	----------------------


<input type="text"/>		<input type="text"/>
----------------------	---	----------------------

<input type="text"/>		<input type="text"/>
----------------------	--	----------------------

Q.4 Write the Missing Number.

[10 Marks]

1			4	
	7			10
			14	
		16		18
				20



Q.5 Count and Write the Number.

[10 Marks]

- 1)  =
- 2)  =
- 3)  =
- 4)  =
- 5)  =
- 6)  =
- 7)  =

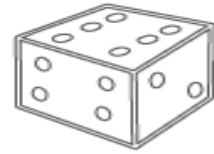
Q.6 Match the Shapes and Colour it.

[10 Marks]



•

•



•

•



•

•



•

•

