



Purnata International School

Shree Swaminarayan Gurukul, Zundal

Weekly Test sheet for Grade li

Name :


sub - Math

Total marks -. 20

Q1. Counting in groups.

{ 6 marks }

a)




1) How many groups are there? _____

2) How many objects are there in each groups?

3) Total number of objects ? _____

b)



1) How many groups are there? _____

2) How many hearts are there in each group ? _____

3) Total number of Hearts ? _____







Q2 Compare the numbers with less than or greater than sign .

(8marks)

65 ○ 18	57 ○ 90	43 ○ 29	99 ○ 97
12 ○ 24	11 ○ 11	20 ○ 30	31 ○ 28

Q3. Write yes if each shape can roll , slide and stack (make tower).

(6 marks)

Shape	Roll	Slide	Stack
 rectangular prism			
 sphere			
 triangular pyramid			
 cone			
 cube			
 cylinder			

