



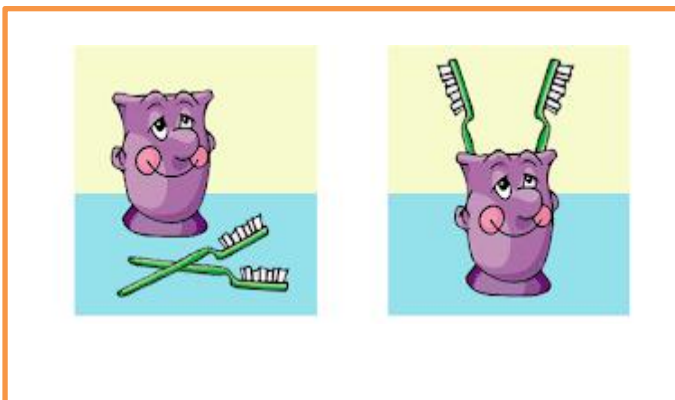
# पुर्णा International School

Shree Swaminarayan Gurukul, Zundal

Sub- Maths

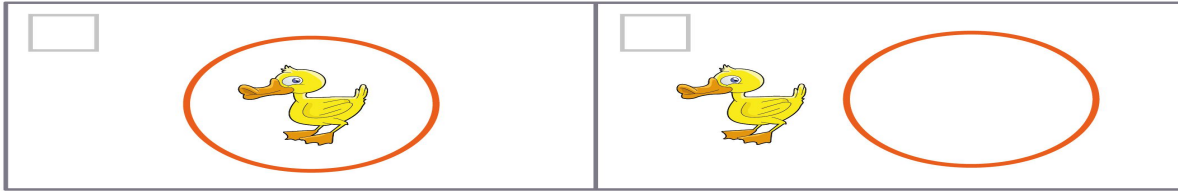
Grade -I

1. Tick (✓) which objects are inside and cross (x) which objects are outside.



## 2- Position : inside and outside

Which picture shows the duck inside the circle ?



Which picture shows the crab outside the square ?



Which picture shows the chameleon outside the triangle ?



3.

### Take Your Positions!

Directions: Look at each ball. Write where it is positioned in each picture.

Use the words: **top bottom middle inside outside**

The ball is in the \_\_\_\_\_  
of the dogs.




The ball is \_\_\_\_\_  
of the bowl.



The ball is \_\_\_\_\_  
of the bowl.



The ball is  
\_\_\_\_\_  
of the tree.



The ball is at the \_\_\_\_\_  
of the slide.

