



Purnima International School

Shree Swaminarayan Gurukul, Zundal




















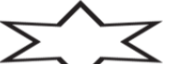

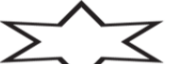


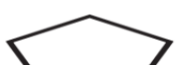
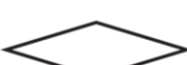
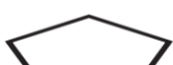
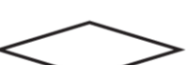
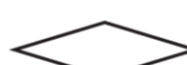
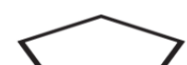






Name			
Grade	Jr.Kg	Subject	Math

Summative Assessment Assignment – II (2019-20)

1. Write numbers from 1 to 50.

1	11	21	31	41

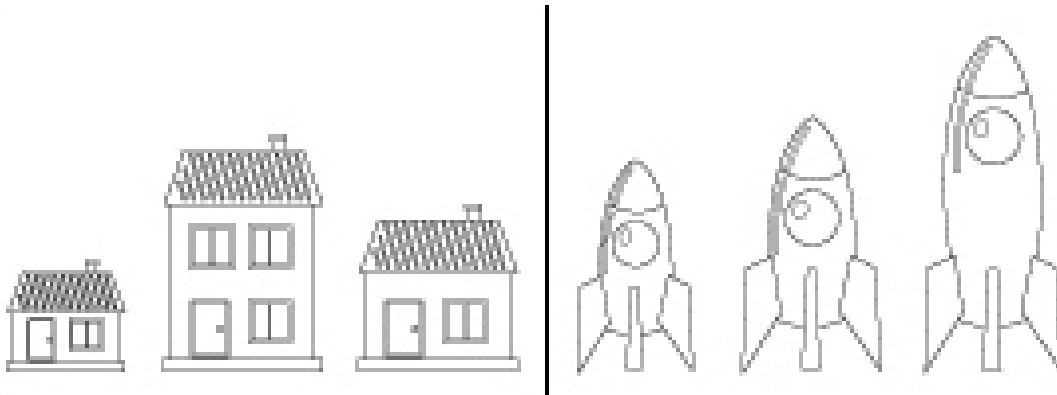
2. Circle the shape that comes next.

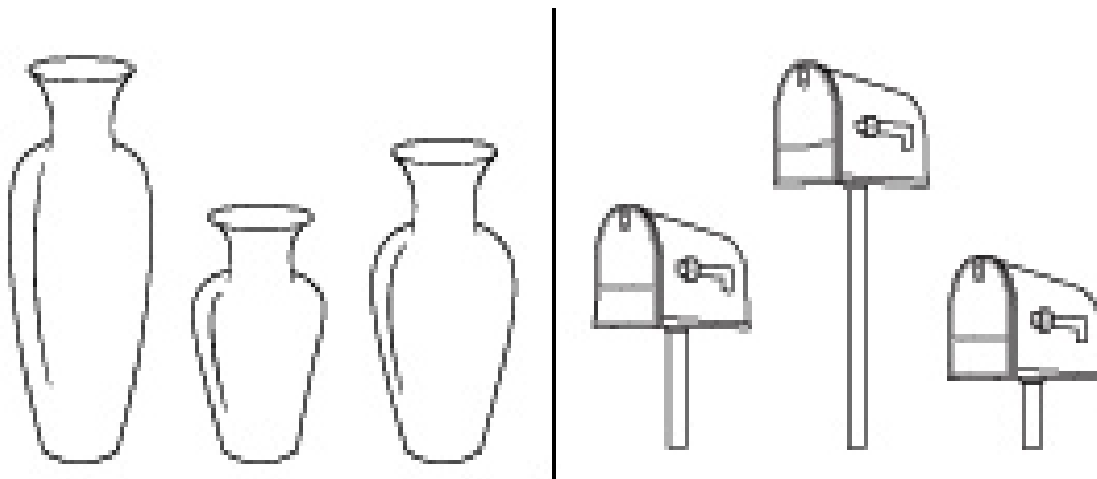
3. Write before, after and between.

Before	Between	After
___ 8	1 ___ 3	6 ___
___ 17	20 ___ 22	13 ___
___ 12	8 ___ 10	29 ___
___ 1	14 ___ 16	34 ___
___ 20	31 ___ 33	17 ___
___ 44	19 ___ 21	42 ___
___ 65	11 ___ 13	39 ___



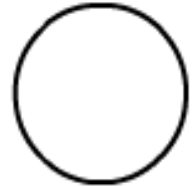

4. Which is tallest




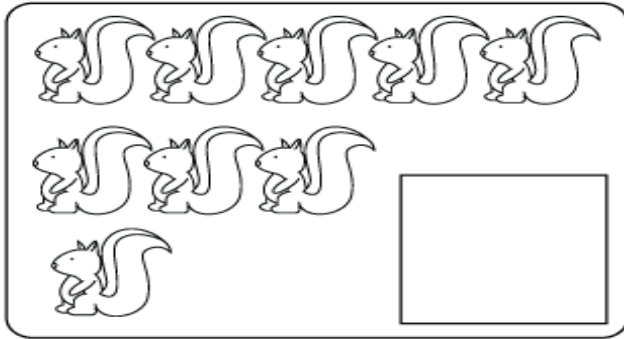

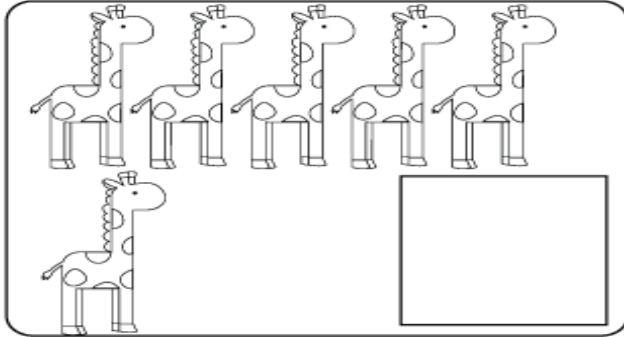


5. Which is smallest




6. Draw a line from each shape on the left to the matching shape on the right side of the page.



7. Count the number of animals in each box and write the total number inside the square box.




8. Join the number with dots.



9. Match the picture with the word and the number.

8



nine

1




four

3




seven

7




one

2



five

10



eight

4




two

9



ten

6



three

5



six

10. Write the missing numbers

The image shows a grid of 50 teardrop-shaped boxes arranged in seven rows. The numbers are as follows:

1		3		5			8
9		11		13			16
17		19		21			24
25		27		29			32
33		35		37			40
41		43		45			48
			49	50			

11. Write the number names of the following

1	One		11	Eleven		
2	Two		12	Twelve		
3	Three		13	Thirteen		
4	Four		14	Fourteen		
5	Five		15	Fifteen		
6	Six		16	Sixteen		
7	Seven		17	Seventeen		
8	Eight		18	Eighteen		
9	Nine		19	Nineteen		
10	Ten		20	Twenty		

12. Write the table of 2

$2 \times 1 = 2$	
$2 \times 2 = 4$	
$2 \times 3 = 6$	
$2 \times 4 = 8$	
$2 \times 5 = 10$	
$2 \times 6 = 12$	
$2 \times 7 = 14$	
$2 \times 8 = 16$	

$2 \times 9 = 18$	
$2 \times 10 = 20$	

13. Write the before and after numbers

