



# Purnima International School

Shree Swaminarayan Gurukul, Zundal

HALF YEARLY (2020 - 21)

Student's Name:		Grade	JR. KG	Roll No.	
Date:	08/09/2020 (Tuesday)	Time	3 hrs.	Subject	MATHS
Teacher's Sign.				Total Marks	60

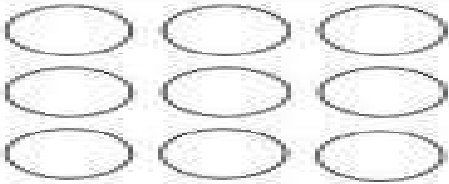

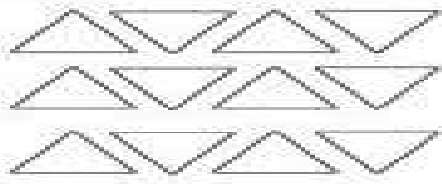

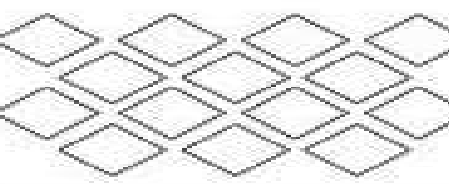

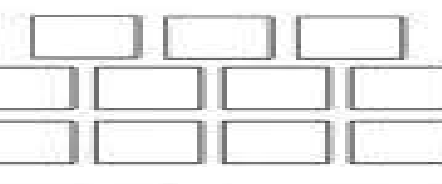

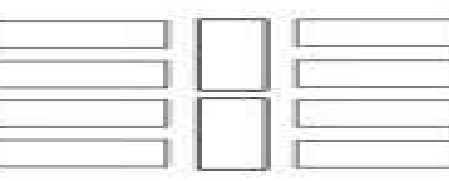



Q.1 Write number counting 1 -30

(10 marks)

1	11	21

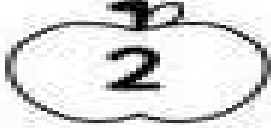





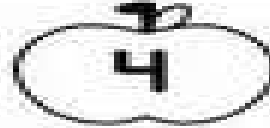









Q 2 . Count and circle the correct number

(6 marks)

Q.3 Write after numbers.

(4 marks)


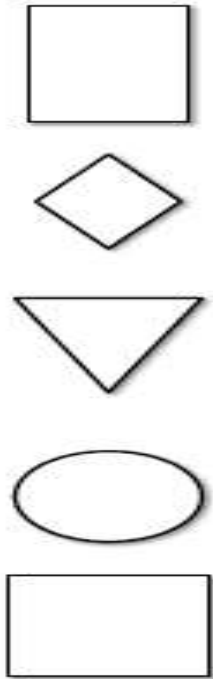
Q.4 Write the missing numbers.

(10 marks)

1	11	21
		22
3		
	15	
		26
8		
		29
10		

**Q 5 . Match the shapes with the given object.**

**( 5 marks)**



**Q 6 Circle the objects as per the given number**

**(5 marks)**

circle 5 calculators	circle 9 sharpeners
circle 8 pencils	circle 7 erasers
circle 6 rulers	circle 10 books

**Q.7 Match the numbers with its number names.**

**(5 marks)**

<b>Eleven</b>	<b>14</b>
<b>Twelve</b>	<b>17</b>
<b>Thir teen</b>	<b>11</b>
<b>Four teen</b>	<b>20</b>
<b>Fif teen</b>	<b>12</b>
<b>Six teen</b>	<b>18</b>
<b>Seven teen</b>	<b>15</b>
<b>Eigh teen</b>	<b>13</b>
<b>Nine teen</b>	<b>16</b>
<b>Twen ty</b>	<b>19</b>

**Q.8 Write the number names.**

**(6 marks)**

1		7	
10		5	
3		4	

Q. 9 Write the between numbers.

(9 marks)

5	<input type="text"/>	7	9	<input type="text"/>	11
12	<input type="text"/>	14	13	<input type="text"/>	15
8	<input type="text"/>	10	2	<input type="text"/>	4
1	<input type="text"/>	3	18	<input type="text"/>	20
15	<input type="text"/>	17	5	<input type="text"/>	7