



# पुर्णमा International School

Shree Swaminarayan Gurukul, Zundal

<b>PERIODIC ASSIGNMENT - 3 2020-21</b>	
<b>Grade -Jr.KG</b>	<b>Subject- Math</b>
<b>Syllabus - FROM TEXTBOOK</b>	

**Q . 1 Write numbers 1 to 40.**

<b>1</b>	<b>11</b>	<b>21</b>	<b>31</b>
<b>2</b>	<b>12</b>	<b>22</b>	<b>32</b>
<b>3</b>	<b>13</b>	<b>23</b>	<b>33</b>
<b>4</b>	<b>14</b>	<b>24</b>	<b>34</b>
<b>5</b>	<b>15</b>	<b>25</b>	<b>35</b>
<b>6</b>	<b>16</b>	<b>26</b>	<b>36</b>
<b>7</b>	<b>17</b>	<b>27</b>	<b>37</b>
<b>8</b>	<b>18</b>	<b>28</b>	<b>38</b>
<b>9</b>	<b>19</b>	<b>29</b>	<b>39</b>
<b>10</b>	<b>20</b>	<b>30</b>	<b>40</b>

Q. 2 Write the before and after numbers.

26

27

28

29

30

31

32

33

34

35

36

37


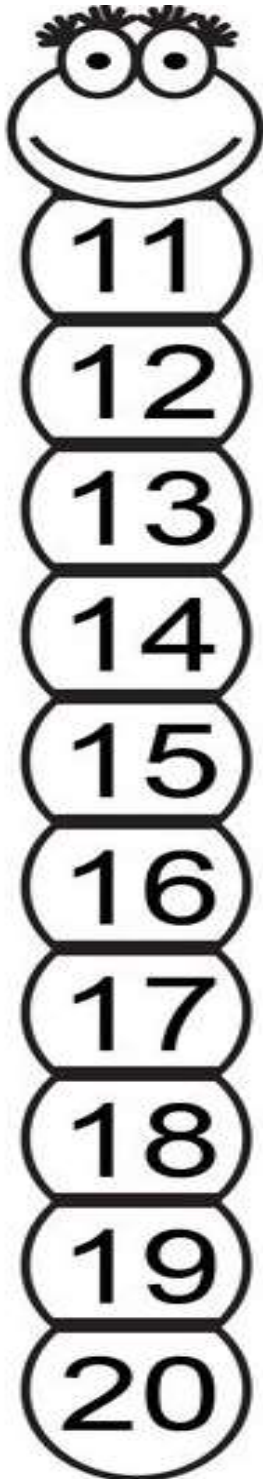
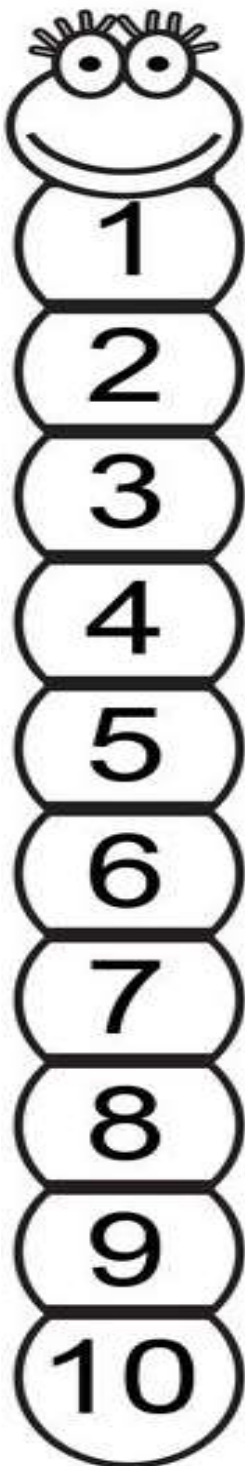
38

39

40

---

Q.3 Write the missing numbers,



Q. 4 Write the before numbers.

13 14

21 22

32 33

4 5

18 19

37 38

26 27

14 15

7 8

23 24

34 35

6 7

9 10

38 39

**Q. 5** Write the after numbers.

14 15

22 23

33 34

5 6

19 20

38 39

27 28

15 16

8 9

24 25

35 36


7 8

10 11

39 40

Q. 6 Circle the correct number of objects.

Circle 13 hearts



Circle 6 stars












Circle 11 notes



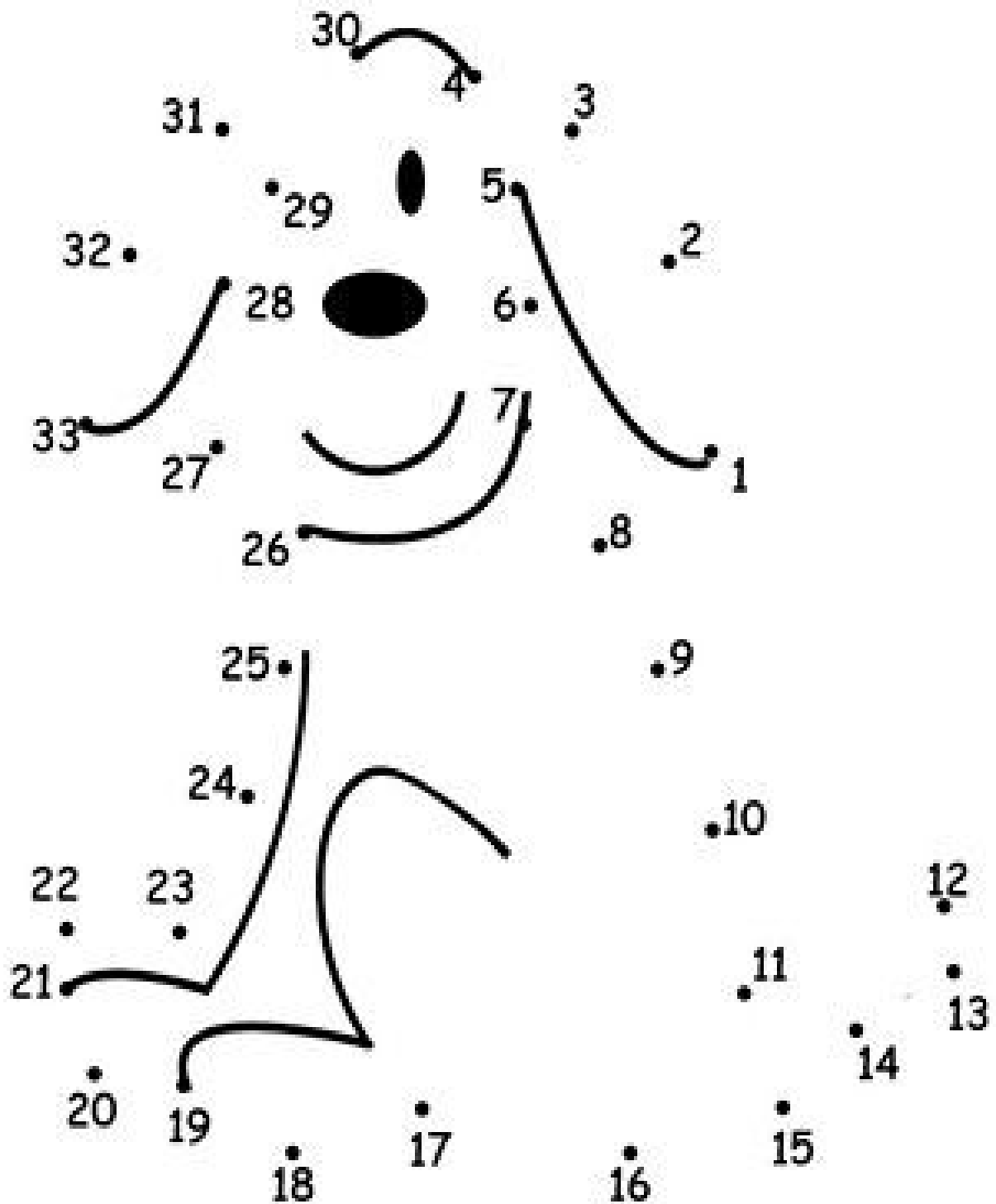
Circle 19 drops



**Q. 7** Count the objects in each box and circle the correct number.






 15      13      12	 16      18      15	 14      15      16
 17      18      19	 20      18      19	 12      11      10
 16      14      15	 12      13      18	 15      16      17

Q. 8 Join the dots and colour the picture.





**Q. 9** Match the shapes with the objects.



**Q. 10** Write the number names from 1 to 20.

1	One	11	Eleven
2	Two	12	Twelve
3	Three	13	Thirteen
4	Four	14	Fourteen
5	Five	15	Fifteen
6	Six	16	Sixteen
7	Seven	17	Seventeen
8	Eight	18	Eighteen
9	Nine	19	Nineteen
10	Ten	20	Twenty