



पुणता International School

Shree Swaminarayan Gurukul, Zundal

PERIODIC ASSESSMENT – 1 2021 -22

PERIODIC ASSESSMENT – 1 2021 -22					
Student's Name					
Date		Grade	Jr.KG	Roll No.	
Subject	Math	Marks	25	Teacher's Sign	

General Instruction –

Read the paper carefully and attempt all the questions.


Q. 1 Count the dots and match with the correct number.

(6 marks)

		9 4 3 7 5 8

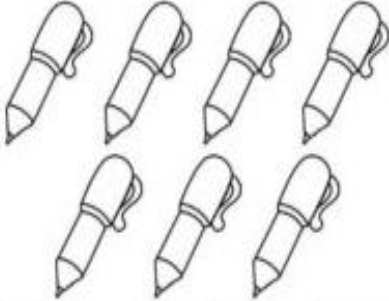





Q. 2 Write the missing numbers 1 to 10.

(8 marks)



Q. 3 Count and circle the correct number.

(6 marks)

 <p data-bbox="246 613 756 747">9 7 5</p>	 <p data-bbox="857 613 1367 747">12 6 4</p>
 <p data-bbox="246 1083 756 1218">5 1 2</p>	 <p data-bbox="857 1083 1367 1218">10 8 3</p>
 <p data-bbox="246 1558 756 1692">12 5 11</p>	 <p data-bbox="857 1558 1367 1692">4 3 5</p>

Q. 4 Join the dots and colour the picture.

(5 marks)

