
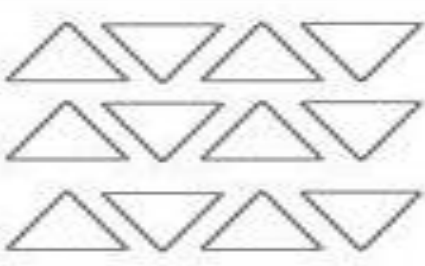




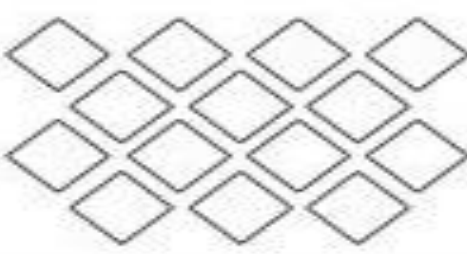
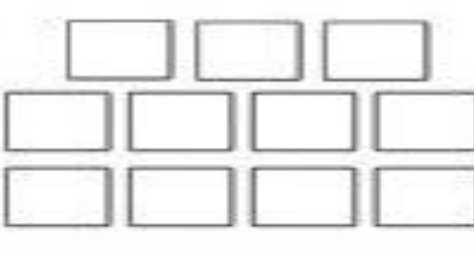




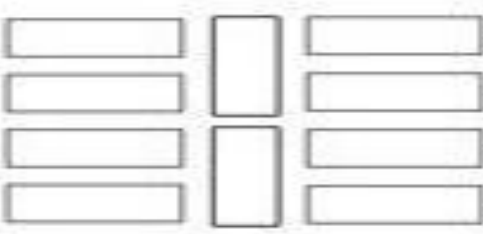























Q 2. Count and circle the correct number

(6 marks)

	<input type="radio"/> 9		<input type="radio"/> 13
	<input type="radio"/> 11		<input type="radio"/> 10
	<input type="radio"/> 7		<input type="radio"/> 12
	<input type="radio"/> 15		<input type="radio"/> 11
	<input type="radio"/> 14		<input type="radio"/> 10
	<input type="radio"/> 13		<input type="radio"/> 12
	<input type="radio"/> 11		<input type="radio"/> 13
	<input type="radio"/> 13		<input type="radio"/> 15
	<input type="radio"/> 10		<input type="radio"/> 12

Q.3 Write after numbers.

(4 marks)

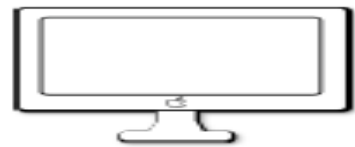
Q.4 Write the missing numbers.

(10 marks)

1	11	21
		22
3		
	15	
		26
8		
		29
10		




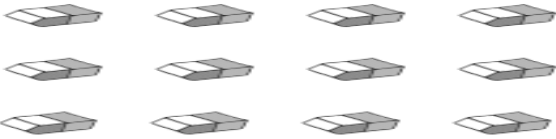


Q 5 . Match the shapes with the given object.

(5 marks)



Q 6 Circle the objects as per the given number

(5 marks)

circle 5 calculators	circle 9 sharpeners
	
circle 8 pencils	circle 7 erasers
	
circle 6 rulers	circle 10 books
	

Q.7 Match the numbers with its number names.

(5 marks)

Eleven	14
Twelve	17
Thir teen	11
Four teen	20
Fif teen	12
Six teen	18
Seven teen	15
Eigh teen	13
Nine teen	16
Twen ty	19

Q. 8 Write the number names.

(6 marks)

1		7	
10		5	
3		4	

Q. 9 Write the between numbers.

(9 marks)

5	<input type="text"/>	7	9	<input type="text"/>	11
12	<input type="text"/>	14	13	<input type="text"/>	15
8	<input type="text"/>	10	2	<input type="text"/>	4
1	<input type="text"/>	3	18	<input type="text"/>	20
15	<input type="text"/>	17	5	<input type="text"/>	7