



पुर्णमा International School

Shree Swaminarayan Gurukul, Zundal

PERIODIC ASSIGNMENT - 3 2022-23	
Grade –Jr.KG	Subject- Math
Syllabus - FROM TEXTBOOK	

Q . 1 Write numbers 1 to 40.

1	11	21	31
2	12	22	32
3	13	23	33
4	14	24	34
5	15	25	35
6	16	26	36
7	17	27	37
8	18	28	38
9	19	29	39
10	20	30	40

Q.2 Write the missing numbers,


1		21	
	13		
		25	
			37
10			

Q. 3


Count the number of objects in each picture.



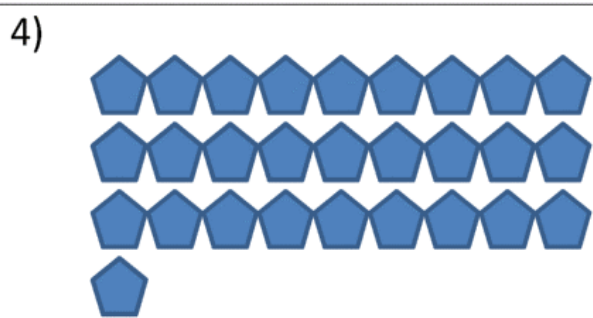
How many? _____




How many? _____




How many? _____




How many? _____



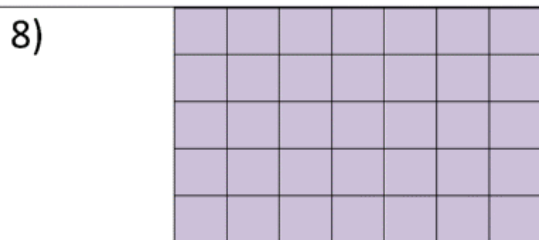
How many? _____



How many? _____



How many? _____



How many? _____

Q. 4 Write the number names from 1 to 20.

1	One	11	Eleven
2	Two	12	Twelve
3	Three	13	Thirteen
4	Four	14	Fourteen
5	Five	15	Fifteen
6	Six	16	Sixteen
7	Seven	17	Seventeen
8	Eight	18	Eighteen
9	Nine	19	Nineteen
10	Ten	20	Twenty

Q. 5 Write the before, between and after numbers.

Before

___ 8

___ 17

___ 12

___ 1

___ 20

___ 24

___ 35

Between

1 ___ 3

20 ___ 22

8 ___ 10

14 ___ 16

31 ___ 33

19 ___ 21

11 ___ 13

After

6 ___

13 ___

29 ___

34 ___

17 ___

21 ___

39 ___

Q. 6 Write the before numbers.

13

14

21

22

32

33

4

5

18

19

37

38

26

27

14

15

7

8

23

24

34

35

6

7

9

10

38

39

Q.7 Write the after numbers.

14 15

22 23

33 34

5 6

19 20

38 39

27 28

15 16

8 9

24 25

35 36

7 8

10 11

39 40

Q. 8

Join the dots and colour the picture.



Q. 9 Match the shapes with the objects.

