



Purnima International School




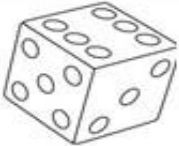
Shree Swaminarayan Gurukul, Zundal

Periodic assessment – I (2021-22)

Name of student					
Class	IInd	Subject	Maths	Roll No	
Date		Marks	25	T.Sign	

Q1. Circle the correct Options

(4MARKS)

	ROLL	SLIDE	STACK
	yes no	yes no	yes no
	yes no	yes no	yes no
	yes no	yes no	yes no
	yes no	yes no	yes no

Q2. Write the missing numbers.

(5MARKS)

a) 345 ____ 347

b) 678 ____ 680

c) 432 ____ 434

d) 233 ____ 235.

e) 556 ____ 558

Q3 . Put the correct signs (>, <, =) in the blanks.

(5MARKS)

a) 435 ____ 473.

b) 161 ____ 116.


c) 122 ___ 197

d) 343 ___ 343.

e) 223 ___ 322

Q4. Count the given objects.

(6 MARKS)




1) How many groups are there? _____

2) How many smiley's are there each groups? _____



3) Total number of smileys? _____



1) How many groups are there? _____

2) How many flowers are there each groups? _____

3) Total number of flowers? _____

Q5. Arrange given numbers in ascending order.

(3MARKS)

A) 29 , 45 , 19 , 33

Ans : _____

B) 65 , 98 , 32 , 75

Ans: _____

C) 43 , 65 , 52 , 32

Ans : _____

Q5. Arrange given numbers in descending order.

(2marks)

a) 34 , 54 , 47 , 68

Ans : _____

b) 45 , 76 , 83 , 61

Ans : _____

