



**Q. 2 Write number names.**

**(5 marks)**

<b>1</b>		<b>23</b>	
<b>12</b>		<b>24</b>	
<b>34</b>		<b>15</b>	
<b>40</b>		<b>26</b>	
<b>5</b>		<b>50</b>	

**Q. 3 Read the number names and fill in the blanks with numbers.**

**( 5 marks)**

eleven		fifteen	
thirty		thirty eight	
seventeen		twenty nine	
twenty two		thirteen	
forty four		fifty	

**Q.4 Write the ordinal numbers. ( Any 5)**

**(5 marks)**

<b>1<sup>st</sup></b>		<b>5<sup>th</sup></b>	
<b>10<sup>th</sup></b>		<b>7<sup>th</sup></b>	

3 <sup>rd</sup>		9 <sup>th</sup>	
-----------------	--	-----------------	--

Q.5 Put  $<$ ,  $>$ ,  $=$ . ( Any 10 )

(5 marks)


- |   |  |
|---|--|
| <p>1 ) 91 <input style="width: 40px; height: 20px;" type="text"/> 27</p> <p>2 ) 83 <input style="width: 40px; height: 20px;" type="text"/> 65</p> <p>3 ) 57 <input style="width: 40px; height: 20px;" type="text"/> 59</p> <p>4 ) 69 <input style="width: 40px; height: 20px;" type="text"/> 72</p> <p>5 ) 22 <input style="width: 40px; height: 20px;" type="text"/> 11</p> <p>6 ) 36 <input style="width: 40px; height: 20px;" type="text"/> 25</p> <p>7 ) 38 <input style="width: 40px; height: 20px;" type="text"/> 20</p> <p>8 ) 36 <input style="width: 40px; height: 20px;" type="text"/> 53</p> | <p>9 ) 49 <input style="width: 40px; height: 20px;" type="text"/> 53</p> <p>10 ) 75 <input style="width: 40px; height: 20px;" type="text"/> 49</p> <p>11 ) 57 <input style="width: 40px; height: 20px;" type="text"/> 70</p> <p>12 ) 47 <input style="width: 40px; height: 20px;" type="text"/> 45</p> <p>13 ) 47 <input style="width: 40px; height: 20px;" type="text"/> 43</p> <p>14 ) 47 <input style="width: 40px; height: 20px;" type="text"/> 31</p> <p>15 ) 39 <input style="width: 40px; height: 20px;" type="text"/> 37</p> <p>16 ) 23 <input style="width: 40px; height: 20px;" type="text"/> 70</p> |
|---|--|

Q.6 Write the between numbers.


(4 marks)

17	<input style="width: 80%; height: 30px;" type="text"/>	19	13	<input style="width: 80%; height: 30px;" type="text"/>	15
14	<input style="width: 80%; height: 30px;" type="text"/>	16	11	<input style="width: 80%; height: 30px;" type="text"/>	13
18	<input style="width: 80%; height: 30px;" type="text"/>	20	12	<input style="width: 80%; height: 30px;" type="text"/>	14
16	<input style="width: 80%; height: 30px;" type="text"/>	18	15	<input style="width: 80%; height: 30px;" type="text"/>	17

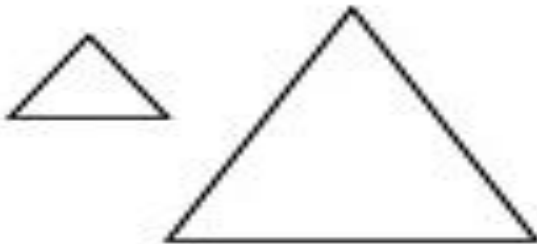
**Q. 7 Circle the tall one.**



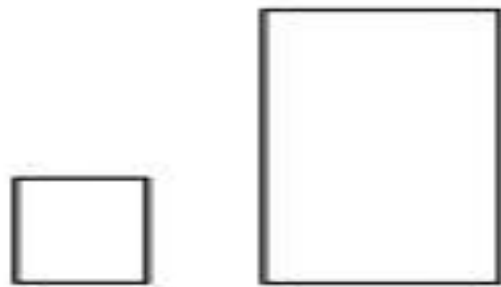
**Circle the short one. ( Any 2)**



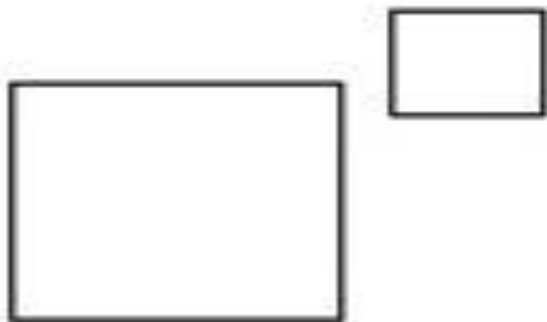
**Q. 8 Colour the big object.**



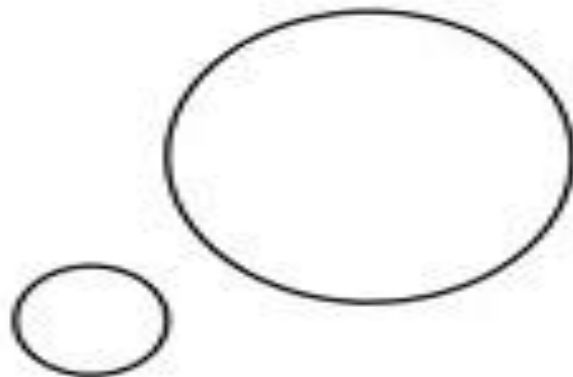
**( Any 2)**



**Q. 9 Circle the small object.**


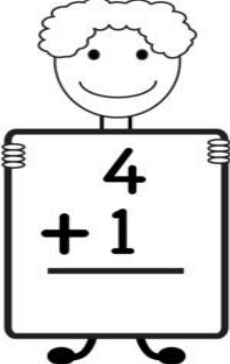






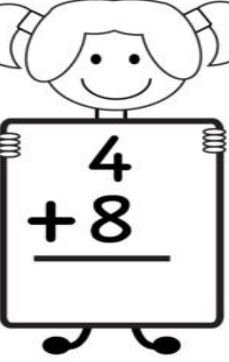



**( Any 2)**















Q. 10 Addition

(5 marks)

 $\begin{array}{r} 4 \\ + 0 \\ \hline \end{array}$	 $\begin{array}{r} 4 \\ + 1 \\ \hline \end{array}$	 $\begin{array}{r} 4 \\ + 2 \\ \hline \end{array}$	 $\begin{array}{r} 4 \\ + 3 \\ \hline \end{array}$	 $\begin{array}{r} 4 \\ + 4 \\ \hline \end{array}$
 $\begin{array}{r} 4 \\ + 5 \\ \hline \end{array}$	 $\begin{array}{r} 4 \\ + 6 \\ \hline \end{array}$	 $\begin{array}{r} 4 \\ + 7 \\ \hline \end{array}$	 $\begin{array}{r} 4 \\ + 8 \\ \hline \end{array}$	 $\begin{array}{r} 4 \\ + 9 \\ \hline \end{array}$

Q. 11 Write before and after numbers ( Any 10)

(10 marks)

<input type="text"/>		<input type="text"/>
<input type="text"/>		<input type="text"/>
<input type="text"/>		<input type="text"/>
<input type="text"/>		<input type="text"/>
<input type="text"/>		<input type="text"/>
<input type="text"/>		<input type="text"/>
<input type="text"/>		<input type="text"/>
<input type="text"/>		<input type="text"/>
<input type="text"/>		<input type="text"/>
<input type="text"/>		<input type="text"/>
<input type="text"/>		<input type="text"/>
<input type="text"/>		<input type="text"/>

Q. 12 Write the missing numbers .

( 5 marks)

1	11	21	30	41
3	13	23	32	43
7	17	27	37	47
10	20	30	40	50