



पुर्णमा International School
Shree Swaminarayan Gurukul, Zundal

Grade -

Sr.KG

Math

Specimen

copy


Year 21-22

INDEX

Sr. No.	Month	Topic	Sign
1	September	Number name 1 -50	
2		Ascending and Descending numbers	
3	October	Pattern	
4		Number name 61 -80	
5	November	Shapes	
6		Backward count 50 -1	
7		Table of 3 and 4	
8		Number name 81 -100	
9	December	Skip count by 2	
10		Skip count by 5	
11	January	Tens and Ones	
12		Subtraction	
13		Time	
14	February	Money	



$$6 - 3 = 3$$



Write the number names (1 – 50)

1		26	
2		27	
3		28	
4		29	
5		30	
6		31	
7		32	
8		33	
9		34	
10		35	
11		36	
12		37	
13		38	
14		39	
15		40	
16		41	
17		42	
18		43	
19		44	
20		45	
21		46	
22		47	
23		48	
24		49	
25		50	

Ascending and Descending Order

Arrange the numbers in ascending order.

22 to 26 : 22, 23, 24, 25, 26.

38 to 43 : _____

20 to 28 : _____

16 to 26 : _____

44 to 50 : _____



Arrange the numbers in descending order.

25 to 21 : 25, 24, 23, 22, 21.

48 to 42 : _____

36 to 31 : _____





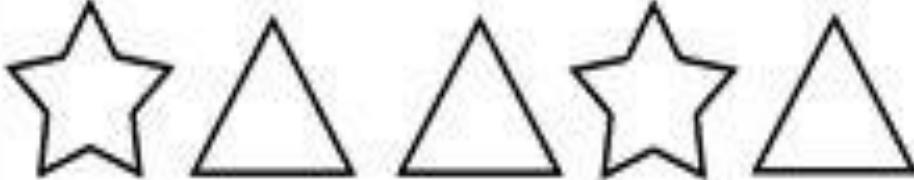
20 to 16 : _____

33 to 28 : _____



Patterns

Complete the pattern.









	
	
	
	
	

Number names

Write the number name from 61 to 80.

61		71	
62		72	
63		73	
64		74	
65		75	
66		76	
67		77	
68		78	
69		79	
60		80	

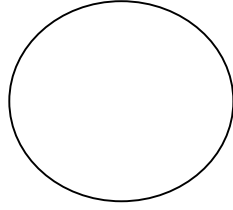
Write the table of 4.

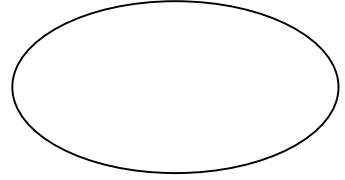
4 x 1 = 4	4 x 1 = 4
	
	
	
	


Shapes


Write the shape name and colour it.

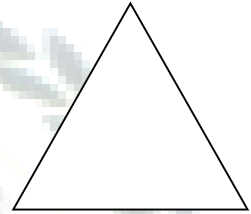


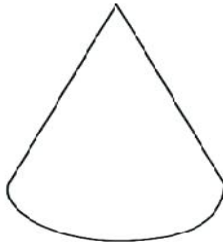



















Write the table of 3 and 4.

$3 \times 1 = 3$	$4 \times 1 = 4$
	

Number Names





Write the number name from 81 to 100.

81		91	
82		92	
83		93	
84		94	
85		95	
86		96	
87		97	
88		98	
89		99	
90		100	

Skip count by 2

2		6		10
12		16		20
22		26		30
32		36		40
42		46		50

Skip count by 5



Tens and Ones

Write in tens and ones

$$21 = \square \text{ tens} + \square \text{ ones}$$

$$49 = \square \text{ tens} + \square \text{ ones}$$

$$72 = \square \text{ tens} + \square \text{ ones}$$

$$86 = \square \text{ tens} + \square \text{ ones}$$

$$50 = \square \text{ tens} + \square \text{ ones}$$

Subtraction

Do the subtraction.

$$\begin{array}{r} 9 \\ - 2 \\ \hline \end{array}$$

$$\begin{array}{r} 7 \\ - 2 \\ \hline \end{array}$$

$$\begin{array}{r} 9 \\ - 3 \\ \hline \end{array}$$

$$\begin{array}{r} 9 \\ - 2 \\ \hline \end{array}$$

$$\begin{array}{r} 6 \\ - 2 \\ \hline \end{array}$$

$$\begin{array}{r} 5 \\ - 2 \\ \hline \end{array}$$

$$\begin{array}{r} 8 \\ - 2 \\ \hline \end{array}$$

$$\begin{array}{r} 7 \\ - 4 \\ \hline \end{array}$$

$$\begin{array}{r} 6 \\ - 1 \\ \hline \end{array}$$

$$\begin{array}{r} 7 \\ - 4 \\ \hline \end{array}$$

$$\begin{array}{r} 6 \\ - 3 \\ \hline \end{array}$$

$$\begin{array}{r} 9 \\ - 4 \\ \hline \end{array}$$

$$\begin{array}{r} 8 \\ - 1 \\ \hline \end{array}$$

$$\begin{array}{r} 9 \\ - 3 \\ \hline \end{array}$$

$$\begin{array}{r} 8 \\ - 2 \\ \hline \end{array}$$

$$\begin{array}{r} 9 \\ - 1 \\ \hline \end{array}$$

$$\begin{array}{r} 6 \\ - 2 \\ \hline \end{array}$$

$$\begin{array}{r} 8 \\ - 2 \\ \hline \end{array}$$

$$\begin{array}{r} 8 \\ - 2 \\ \hline \end{array}$$

$$\begin{array}{r} 5 \\ - 2 \\ \hline \end{array}$$

$$\begin{array}{r} 7 \\ - 2 \\ \hline \end{array}$$

$$\begin{array}{r} 7 \\ - 1 \\ \hline \end{array}$$

$$\begin{array}{r} 7 \\ - 1 \\ \hline \end{array}$$











$$\begin{array}{r} 6 \\ - 4 \\ \hline \end{array}$$

Time

What is the time.



Write the table of 5.

$5 \times 1 = 5$	$5 \times 1 = 5$
	
	
	
	
	

Money

Identify the Indian currency notes.



₹2000 : Two Thousand rupees



₹500 : Five Hundred rupees



₹200 : Two Hundred rupees



₹100 : One Hundred rupees



₹50 : Fifty rupees



₹20 : Twenty rupees



₹10 : Ten rupees



₹5 : Five rupees



₹1 : One rupee

