



# Purnima International School

Shree Swaminarayan Gurukul, Zundal

## PERIODIC ASSESSMENT - 3 2021-22

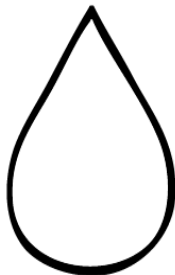
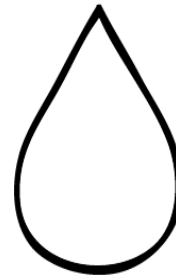
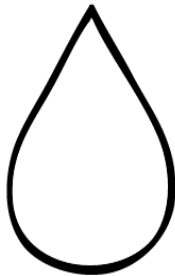



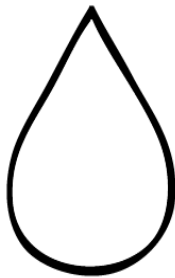

Student's Name					
Date		Grade	Nursery	Roll No.	
Subject	MATH	Marks	25	Teacher's Sign	

### General Instruction –

Read the paper carefully and attempt all the questions.

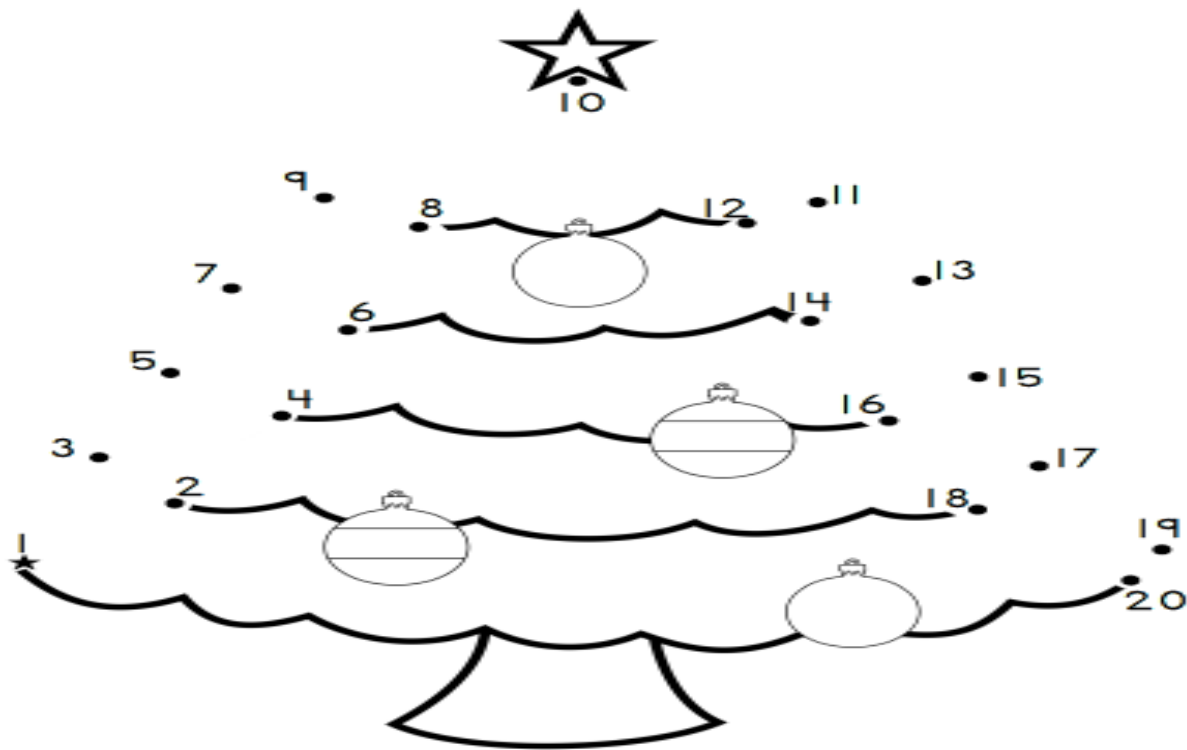
Q. 1 Write numbers from 1 to 20.

8 marks



Q 2 Join the dots and colour the picture.

5 marks



Q.3 Write before and between numbers.

5 marks

Before	Between
<input type="text"/> ← 3	1 <input type="text"/> 3
<input type="text"/> ← 6	6 <input type="text"/> 8
<input type="text"/> ← 2	8 <input type="text"/> 10
<input type="text"/> ← 8	3 <input type="text"/> 5
<input type="text"/> ← 10	7 <input type="text"/> 9

Q. 4 Count the number of objects in each box and write the correct number inside the square box. 7 marks

