



पुर्णा International School

Shree Swaminarayan Gurukul, Zundal

SUMMATIVE ASSIGNMENT -1 2022-23

Grade – Jr.KG

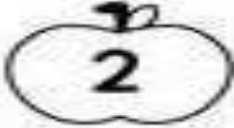

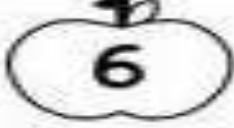



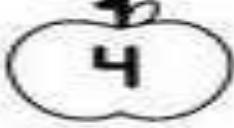









Subject- MATH

Syllabus - FROM TEXTBOOK

1. Write number counting 1 -30

1	11	21
2	12	22
3	13	23
4	14	24
5	15	25
6	16	26
7	17	27
8	18	28
9	19	29
10	20	30

2. Write after numbers.

3. Write before and after numbers.

21	22	23
14	15	16
19	20	21
16	17	18
22	23	24
17	18	19
11	12	13

10	11	12
18	19	20
26	27	28
20	21	22
15	16	17
24	25	26
28	29	30

4. Write the number names.

1	One		
2	Two		
3	Three		
4	Four		
5	Five		
6	Six		
7	Seven		
8	Eight		
9	Nine		
10	Ten		

5. Count and circle the correct number

6. Circle the objects as per the given number

circle 5 calculators	circle 9 sharpeners
circle 8 pencils	circle 7 erasers
circle 6 rulers	circle 10 books

Q-7 Continue the pattern.

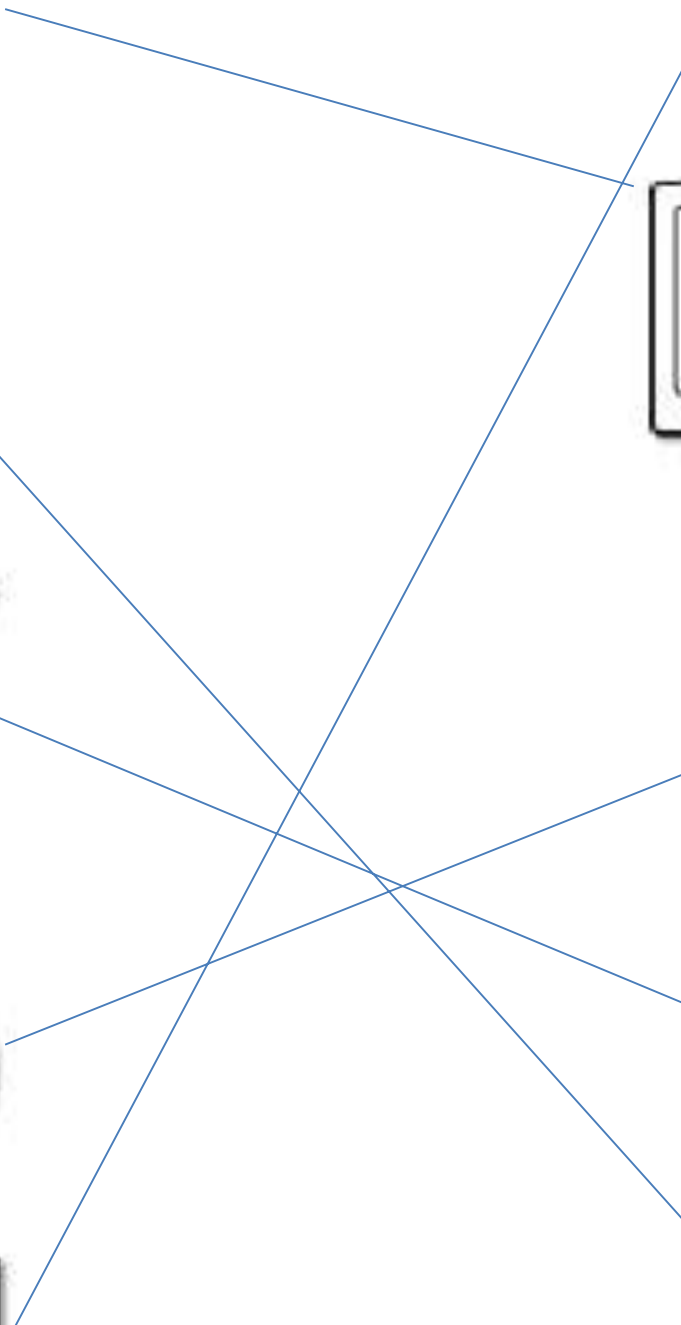
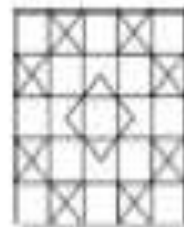
8. Write the missing numbers.

1	11	21
		22
3		
	15	
		26
8		
		29
10		

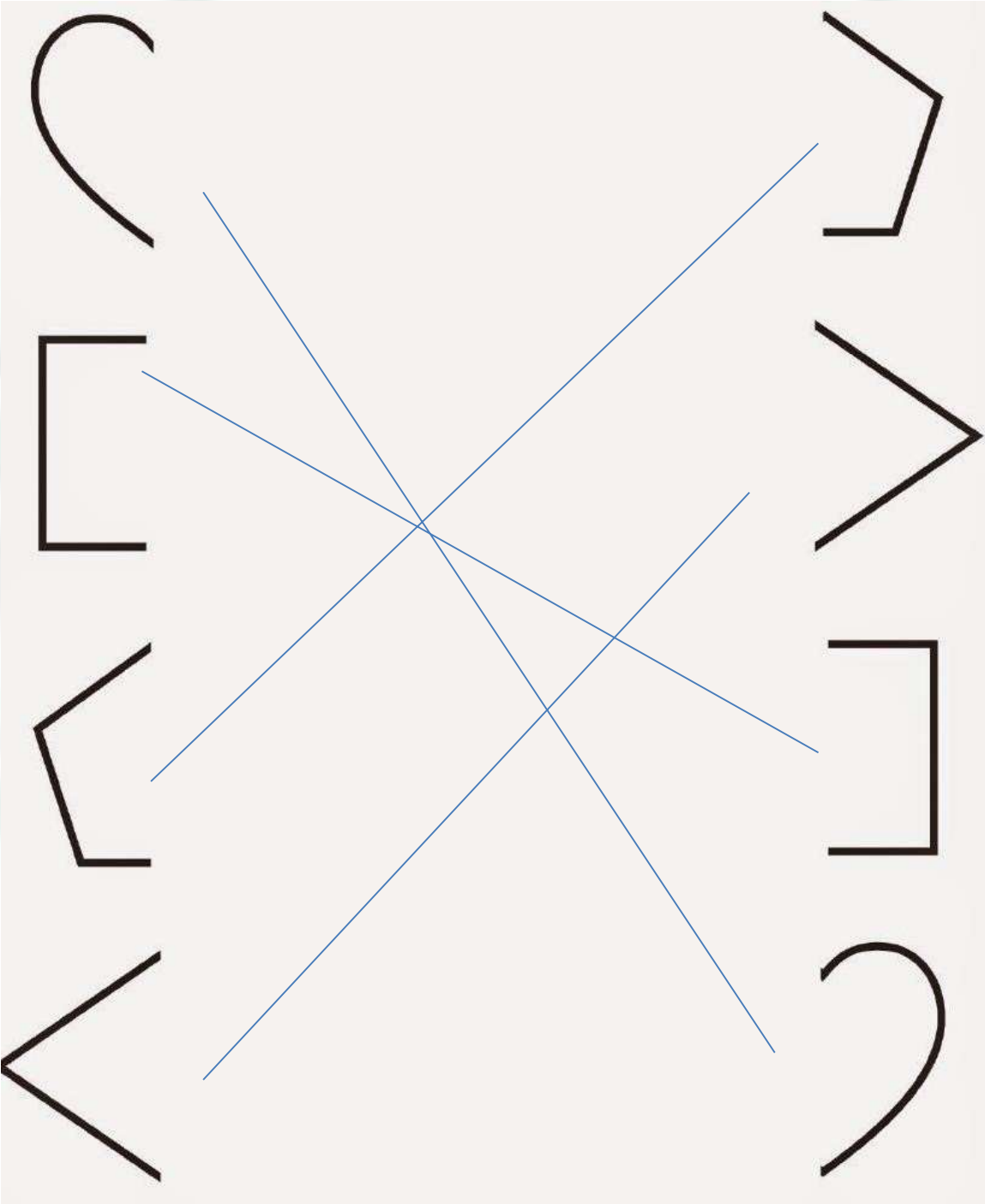
9. Write between numbers.

A grid of numbers in circles. The numbers are arranged in two columns. The first column contains the numbers 5, 12, 8, 1, 5, 3. The second column contains the numbers 6, 13, 9, 2, 16, 4. The third column contains the numbers 7, 14, 10, 3, 17, 5. The fourth column contains the numbers 9, 13, 2, 18, 5, 0. The fifth column contains the numbers 10, 14, 3, 19, 6, 1. The sixth column contains the numbers 11, 15, 4, 20, 7, 2. The numbers 6, 13, 9, 2, 16, 4, 10, 14, 3, 19, 6, 1 are highlighted in orange boxes.

10. Match the shapes with the given object.



11. Draw a line to connect each shape with its other half.



12. Join the dots and colour the picture.

