



Student Name			
Date		Grade	VI
Subject	COMPUTER	Marks	40

SUMMATIVE ASSESSMENT – 1 [2021-22]

GENERAL INSTRUCTION:

1. All the questions are compulsory.
2. All the parts of questions must be attempted at one place.

Q.1) Choose the correct answers: - (10 marks)

1) Which of the following is known as the brain of a computer?

- a. monitor b. CPU c. Keyboard d. mouse

2) Which feature will you insert to insert this (π)?

- a. Shape b. Symbol c. WordArt d. Clip Art

3) Which feature is used to give special effects to the text?

- a. WordArt b. shape c. Clip Art d. symbol

4) Which of the following is a high-speed memory present between the CPU and the main memory?

- a. RAM b. ROM c. secondary memory d. cache memory

5) Which of the following is the most powerful in terms of processing, speed and memory?

- a. minicomputers b. microcomputers c. supercomputers d. none of these

6) Which tab contains the option to print a document?

- a. insert b. file c. page layout d. home

7) Which of the following is not a part of an Excel worksheet?

- a. Name Box b. row headings c. Stage d. Sheet tabs

8) What is A6?

- a. row number b. cell address c. column number d. none of these

9) Which of the following displays the contents of an active cell?

- a. Title bar b. Work area c. Formula Bar d. Name Box

10) Which of the following is used to play audio and video files?

- a) Windows Scan b) Sound recorder c) Windows media player_ d) Screen saver

Q.2) True or False: -

(5 marks)

1. You can create a new library.

2. A jump list provides quick access to recently opened files or Websites.

3. The Shake windows feature makes it quick and easy to View documents side by side.

4. A CD gets automatically ejected from the CD/DVD Drive when the burn is complete.

5. You can crop a picture after inserting it in a document.

Q.3) Match the following: -

(5 marks)

1. Stacking

Symbol

2. 

Video Player

3. Cray- 1

Group of vertical lines and bars

4. 

Super computer

5. Barcode Reader

Manages multiple open windows Computer

Q.4) Expand the following: -

(5 marks)

1. RAM- _____

2. ROM- _____

3. LCD- _____

4. DVD- _____

5. USB- _____

Q.5) Answer the following in short: -

(6 marks)

1. What is the work of ALU in the working of a CPU?

→ _____

2. What are cells?

→ _____

3. What is Line Spacing?

→ _____

4. Why do you apply border to a page?

→ _____

5. What is the use of Name box in Excel?






→ _____

6. Which two types of data you can enter into an excel worksheet?

→ _____




Q.6) Identify the icons and write why they are used: -

(5 marks)

<u>ICONS</u>	<u>NAME</u>	<u>USES</u>
1. 	_____	_____
2. 	_____	_____
3. 	_____	_____
4. 	_____	_____
5. 	_____	_____

Q. 7 Label the parts of Indent:-

(4 Marks)



Dr APJ Abdul Kalam was a great scientist. He was born to poor parents in Rameswaram, Tamil Nadu. Braving hardships and earning scholarships, Dr Kalam studied hard and become a scientist.

Dr Kalam and his team designed India's first rocket SLV-3 that launched a satellite to orbit the Earth. He played a major role in developing missiles such as the Prithvi and the Agni in India. He was awarded the Bharat Ratna in 1997.

Dr Kalam was elected President of India in 2002. He used to encourage and inspire students and teachers across India. He was very popular among people for his simple-heartedness and was fondly called the 'People's President'.

Dr Kalam and his team designed India's first rocket SLV-3 that launched a satellite to orbit the Earth. He played a major role in developing missiles such as the Prithvi and the Agni in India. He was awarded the Bharat Ratna in 1997.