



Purnima International School

Shree Swaminarayan Gurukul, Zundal

Student Name					
Date		Grade	2	Roll No.	
Subject	GK	Marks	60	Teacher's Sign	

SUMMATIVE ASSESSMENT - I [2021-22]

GENERAL INSTRUCTION:

1. All the Questions are Compulsory Questions.

Q.1 Fill in the blanks.

[Marks- 6]

1. _____ was the first Prime Minister of India. (Mahatma Gandhi, Pandit Jawaharlal Nehru)
2. Chacha Nehru was born on _____ 1889. (14th November, 14th December)
3. Chacha Nehru wore a _____ on his jacket. (Rose, Mogra)
4. _____ is the capital of India. (New Delhi, Bombay)
5. _____ is the national bird of India. (Peacock, Dove)
6. India's national flag has _____ colours. (Three, Five)

Q.2 How many players are there in the teams for the sports given below. Choose from the bracket. (6, 12, 5, 11)

[Marks – 4]

1. Kho kho – _____ 2. Football – _____ 3. Volleyball - _____ 4. Basketball – _____

Q.3 Tick the correct answer.

[Marks – 4]

1. Grandpa used _____ to grind chutney. (Mixture, Camera)
2. Grandma used _____ to bake a cake. (Oven, Fridge)
3. Papa used _____ to make tea. (Pan, Griddle)
4. Uncle used _____ to peel potatoes. (Spoon, Peeler)

Q.4 Name the water animals.

[Marks – 4]

[Octopus, Jelly fish, Fish, Starfish]

1. There are no bones in my body. _____
2. In sleep with my eyes open. _____
3. My blood is blue in colour. _____
4. I have five arms. Some of us have as many as forty arms. _____



Q.5 Write 'P' for protective, 'B' for body-building, 'E' for energy-giving food for the following.

[Marks – 4]


- Potato _____ Fish _____ Apple _____ Watermelon _____
- Brinjal _____ Peas _____ Mango _____ Sugar _____

Q.6 Colour the following.

[Marks – 2]



Q.7 Healthy/ unhealthy? Cross out the unhealthy food and colour the healthy food. [Marks – 6]



Q.8 Choose and write the correct option.

[Marks – 6]

(Knife, Scissors, Screw driver, Hammer, Opener, Plough)

1. Which tool will you use to cut a cake? _____
2. Which tool will you use to cut paper? _____
3. Which tool will you use to lose the screws? _____
4. Which tool will you use to fix a nail in the wall? _____
5. Which tool will you use to open a bottle's lid? _____
6. Which tool is used by a farmer in his field? _____

Q.9 Write true or false.

[Marks – 6]

1. Animals need air to live. _____
2. A strong wind is called a breeze. _____

3. We can drink air. _____
4. We can feel air. _____
5. A kite flies because of the wind. _____
6. Air contains smoke, dust and germs. _____

Q.10 Write (G) for good habits and (B) for bad habits.

[Marks – 3]



()



()



()

Q.11 Read the clues and answer the following.


[Marks – 6]

(Chess, Cricket, Badminton, Tennis, Polo, Archery)

1. Players ride on horses to play this game. - _____
2. Players use a racket and a ball to play this game. - _____
3. Players use bows and arrows to shoot a target. - _____
4. This is a board game with black and white squares. - _____
5. Twenty20 is a popular form of this game. - _____
6. Players use a racket and a shuttlecock to play this game. - _____

Q.12 What time is it? Write the time.

[Marks -4]









Q.13 The bold words are incorrect. Circle the correct words.

[Marks – 5]

1. We must **rush** our teeth twice a day. (Brush, Hush)
2. Monkeys are **bringing** from the branch. (Ringing, Swinging)
3. Bring your own **moon** to eat lunch. (Noon, Spoon)
4. My sister collected **bells** at the beach. (Shells, Wells)
5. **Towers** are blooming in the garden. (Showers, Flowers)