



# Yashwantrao International School

Shree Swaminarayan Gurukul, Zundal

**Grade-II**

**Super**

**Computer**

***Sample plan***

***August-***

***September***

**2021-22**

# Contens

**CHAPTER 2 Computer devices**

**CHAPTER 3 How a computer work**



## Chapter-2 Computer Devices

### A. Write the missing letter.

1. MONITOR



2. KEYBOARD



3. MOUSE



4. SPEAKERS



5. MICROPHONE



### B. Tick the correct answers.

1. This is not a part of a computer.

a. Mouse

b. Piano

c. Monitor

2. This is a circular device.

a. Keyboard

b. Mouse

c. CD

3. What does a UPS supply to a computer?

a. Electricity

b. Water

c. Air

C. Name the device Simran should use for each task. Choose words from the box.

monitor

CD

microphone

headphones

1. Listen to songs

headphone



2. Store photographs

CD



3. Watch movies

monitor




4. Record a poem

microphone



D. Read the clues to name the parts of a computer.



1. I look like a TV.

I am a computer.




2. I work like your brain.

I am a CPU

3. My name is the same as that of an animal.



I am a mouse.



4. I have many keys.

I am keyboard.

**E. Answer these questions.**

**Q.1 Name any four devices of a computer.**

Ans. 1 Speakers

1. Headphones
2. Microphone
3. CD

**Q.2 Name the device we use to record sound.**

Ans. Microphone

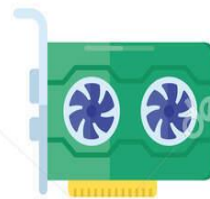

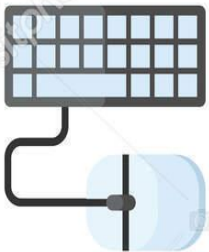


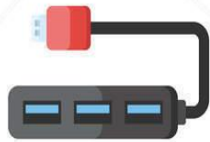

**Q.3 Name any two things that we can store on a CD/DVD.**

Ans. 1 Games

2. Music

## ACTIVITY

- Find and circle different computer parts of devices.



### Chapter-3

#### How a Computer Work

A. Swati is making mango shake. Number the steps in the correct order.



( 3 )



( 1 )



( 2 )

B. Write T for True or F for False.

1. A monitor gives input to a computer.

F

2. A monitor shows output.

T

3. The CPU processes input.

T

4. In I-P-O, 'I' stand for 'information'.

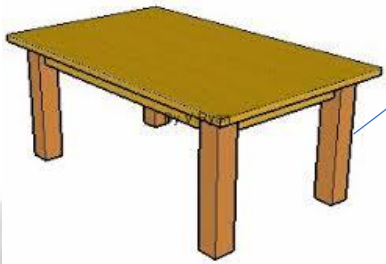
F

C. Match the following inputs to their outputs.


1.




2.



3.



4.





D. Answer these questions.

1. Write the full form of I-P-O.

Ans. Input                  Process                  Output

2. What will be the output of  $20+20$ ?

Ans. 40

Activity

**TECHNICAL THINGS**

Fill in the crossword and find the hidden words.

The crossword puzzle grid consists of 12 numbered starting points for words:

- 1: 10 letters
- 2: 10 letters
- 3: 10 letters
- 4: 8 letters
- 5: 10 letters
- 6: 8 letters
- 7: 10 letters
- 8: 10 letters
- 9: 8 letters
- 10: 10 letters
- 11: 8 letters
- 12: 8 letters

There is a question mark in a small box at the bottom center of the grid.

ISCollective.com