



Purnima International School

Shree Swaminarayan Gurukul, Zundal

Student Name					
Date		Grade	II	Roll No.	
Subject	Maths	Marks	60	Teacher's Sign	

Summative Assessment –I [2021-2022]

GENERAL INSTRUCTION:

1. All the Questions are Compulsory Questions.
2. All the Parts of Questions must be attempted at one Place.

Q1. Write the number names of the following numbers.

[5marks]

a) 345 = _____.

b) 546 = _____.

c) 121 = _____.

d) 235 = _____.

e) 450 = _____.

Q2. Arrange the following numbers in ascending order.

[5marks]

a) 265, 398, 156, 495. _____, _____, _____, _____.

b) .678, 662, 604, 634. _____, _____, _____, _____.

c) 897, 260, 356, 985. _____, _____, _____, _____.

d) 599, 416, 155, 689 _____, _____, _____, _____.

e) 210, 840, 307, 181. _____, _____, _____, _____.

Q3. Write the missing numbers.

[4marks]

a. 355 _____ 357

b. 678 _____ 680

c. 430 _____ 432

d. 249 _____ 251

Q4. Put the sign of less than < or more than > or = .

[4marks]

a) 945 _____ 954

b) 824 _____ 639

c) 797 _____ 577

d) 633 _____ 633

Q5. Add the given .

[4marks]

$$\begin{array}{r} 48 \\ + 13 \\ \hline \end{array}$$

$$\begin{array}{r} 65 \\ + 25 \\ \hline \end{array}$$

$$\begin{array}{r} 37 \\ + 25 \\ \hline \end{array}$$

$$\begin{array}{r} 26 \\ + 34 \\ \hline \end{array}$$

Q6. Subtract the given numbers.

[4marks]

$$\begin{array}{r} 75 \\ - 38 \\ \hline \end{array}$$

$$\begin{array}{r} 42 \\ - 35 \\ \hline \end{array}$$

$$\begin{array}{r} 62 \\ - 34 \\ \hline \end{array}$$

$$\begin{array}{r} 55 \\ - 26 \\ \hline \end{array}$$

Q7. Write the numeral form.

[5marks]

a) Two hundred and ninety nine = _____.

b) Six hundred and seven = _____.

c) Five hundred and fifty = _____.

d) Nine hundred and seventy eight = _____.

e) Four hundred and Twenty five = _____.

Q8. Write before and after number.

[4marks]

a) _____127 _____





b) _____221 _____

c) _____673 _____

d) _____310_____

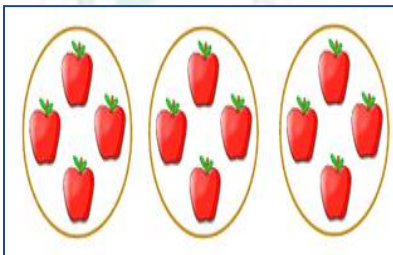
Q9. Identify the shapes and write their names and given features.

[4marks]

	Name _____ Sides _____ Corners _____		Name _____ Sides _____ Corners _____
	Name _____ Sides _____ Corners _____		Name _____ Sides _____ Corners _____

Q10. Counting in tens

[6marks]



- 1) How many groups are there? _____
- 2) How many apples are there in each group? _____
- 3) Total number of apples - _____



- 1) How many groups are there? _____
- 2) How many spoons are there in each group? _____
- 3) Total number of spoons- _____

Q11. Complete the following patterns.

[6marks]

- a) A1, B2, C3 , _____ , _____ , _____ , _____ .
- b) 5 , 15 , 25 , _____ , _____ , _____ , _____ .
- c) 15, 20 , 25 , _____ , _____ , _____ , _____ .
- d) 4 , 8 , 12 , 16 , _____ , _____ , _____ , _____ .
- e) 85 , 75 , 65 , _____ , _____ , _____ , _____ .
- f) 5a , 6b, 7c _____ , _____ , _____ , _____ .

Q12. Answer the following questions.










[4marks]




a) A fisherman caught 130 fishes on the first day and 220 fishes on the second day. How many fishes did he catch on both the days?

b) Richa had 87 guests at her home. She had only 34 bowls to serve the food. How many more bowls does she need to serve the food?

Q13) Mark the ordinal position of the animals .


[3marks]

									
1st First	2nd Second	3rd Third	4th Fourth	5th Fifth	6th Sixth	7th Seventh	8th Eighth	9th Ninth	10th Tenth

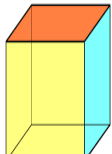
	2nd Second	4th Fourth	8th Eighth
	1st First	5th Fifth	7th Seventh
	9th Ninth	6th Sixth	3rd Third

Q14) Identify the shape and write any example .

[2 marks]

a. -  Name of the shape - _____

Example - _____

b. -  Name of the shape - _____

Example - _____