



पुर्ना International School

Shree Swaminarayan Gurukul, Zundal

PERIODIC ASSESSMENT-I ASSIGNMENT 2022-23

Student Name

Subject

Maths

Grade

I

Roll no.

Syllabus – Ch. 1 Shapes and Space, Ch. 2 Numbers from 1 to 10, Ch. 3 Addition







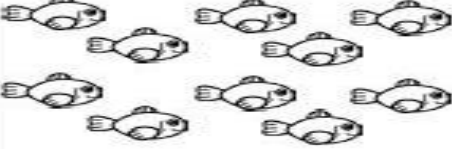

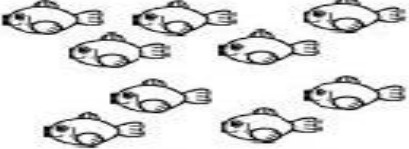
Q1 Write number from 1 to 100 in figure.

1									
									100









Q2. Write the number names of the following.

Number	Name	Number	Name
1		21	
14		3	
2		13	
31		12	
9		19	
11		2	
4		17	
6		5	
10		8	
7		16	

Q3. Count and write the correct number in the box.

 <input type="text"/>	 <input type="text"/>	 <input type="text"/>
 <input type="text"/>	 <input type="text"/>	 <input type="text"/>
 <input type="text"/>	 <input type="text"/>	 <input type="text"/>

Q4. Addition by pictures

Q.5 Write backward counting.

100									

Q6. Addition of one digit numbers.

$$\begin{array}{r} 2 \\ +2 \\ \hline \end{array}$$

$$\begin{array}{r} 3 \\ +5 \\ \hline \end{array}$$

$$\begin{array}{r} 4 \\ +4 \\ \hline \end{array}$$

$$\begin{array}{r} 5 \\ +2 \\ \hline \end{array}$$

$$\begin{array}{r} 6 \\ +3 \\ \hline \end{array}$$

$$\begin{array}{r} 7 \\ +3 \\ \hline \end{array}$$

$$\begin{array}{r} 8 \\ +2 \\ \hline \end{array}$$

$$\begin{array}{r} 9 \\ +7 \\ \hline \end{array}$$

$$\begin{array}{r} 10 \\ +4 \\ \hline \end{array}$$

$$\begin{array}{r} 6 \\ +2 \\ \hline \end{array}$$

$$\begin{array}{r} 1 \\ +3 \\ \hline \end{array}$$

$$\begin{array}{r} 7 \\ +3 \\ \hline \end{array}$$

Q7. Write the missing numbers.

46			49		
72		74			77
	52			55	
		26			29
25			28		

Q8. Write before and after numbers.

___ 99 ___	___ 72 ___	___ 94 ___
___ 54 ___	___ 59 ___	___ 76 ___
___ 84 ___	___ 57 ___	___ 69 ___
___ 83 ___	___ 95 ___	___ 55 ___
___ 63 ___	___ 68 ___	___ 80 ___
___ 82 ___	___ 71 ___	___ 53 ___
___ 96 ___	___ 70 ___	___ 97 ___

Q9. Draw the shapes.

1. Triangle

2. Rectangle

3. Oval

4. Heart