



पुर्णिमा International School
Shree Swaminarayan Gurukul, Zundal

Grade - Sr.KG

Math


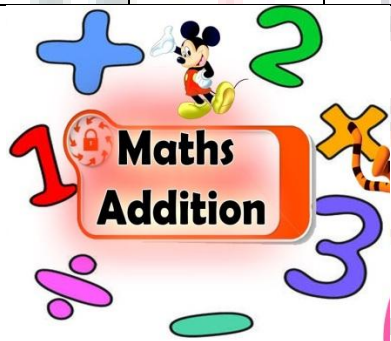
Specimen

copy


Year 21-22

INDEX

Sr. No.	Month	Topic	Sign
1	August	Number name 41 -60	
2		Ordinal numbers	
3		Number count 1 – 100	
4		Addition	
5		Greater than Less than Equal to	



greater
than



less
than



equal

Write the number names from 41 to 60.

41 – Forty – one	51 – Fifty – one
42 – Forty – two	52 – Fifty – two
43 – Forty – three	53 – Fifty – three
44 – Forty – four	54 – Fifty – four
45 – Forty – five	55 – Fifty – five
46 – Forty – six	56 – Fifty – six
47 – Forty – seven	57 – Fifty – seven
48 – Forty – eight	58 – Fifty – eight
49 – Forty – nine	59 – Fifty – nine
50 – Fifty	60 – Sixty

Video Link

https://www.youtube.com/watch?v=X89qzEr08_0

Ordinal Numbers

1st

first

2nd

second

3rd

third

4th

fourth

5th

fifth

6th

sixth

7th

seventh

8th

eighth

9th

ninth

10th

tenth

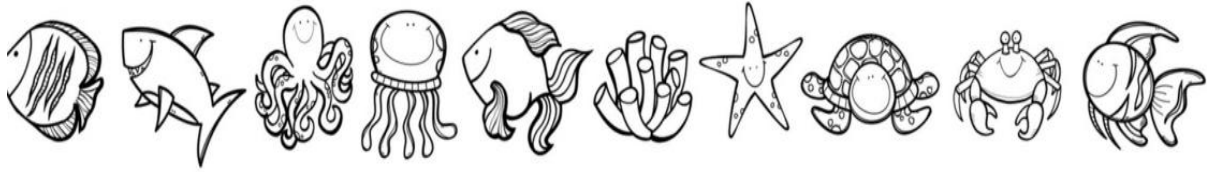
Write the ordinal number names.

1st	First	6th	Sixth
2nd	Second	7th	Seventh
3rd	Third	8th	Eighth
4th	Fourth	9th	Ninth
5th	Fifth	10th	Tenth

Video Link

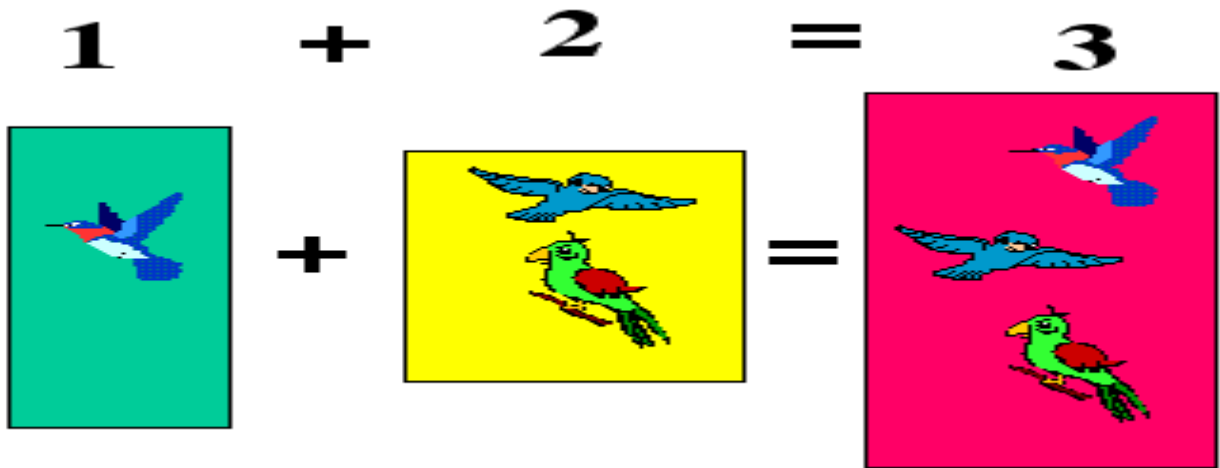
<https://www.youtube.com/watch?v=BaO1E21SpkI>

Activity : Look at the picture and write the correct ordinal number in the box





	7th		
			
	1st		
			4th
			

Addition



Count and write the total number of objects in a given box.



 $+$  $=$





 $+$  $=$







Video Link.



<https://www.youtube.com/watch?v=mjlsSYLLOSE>



Addition



$$\begin{array}{r} 7 \\ + 1 \\ \hline \end{array}$$





$$\begin{array}{r} 5 \\ + 3 \\ \hline \end{array}$$





$$\begin{array}{r} 4 \\ + 4 \\ \hline \end{array}$$



$$\begin{array}{r} 2 \\ + 6 \\ \hline \end{array}$$



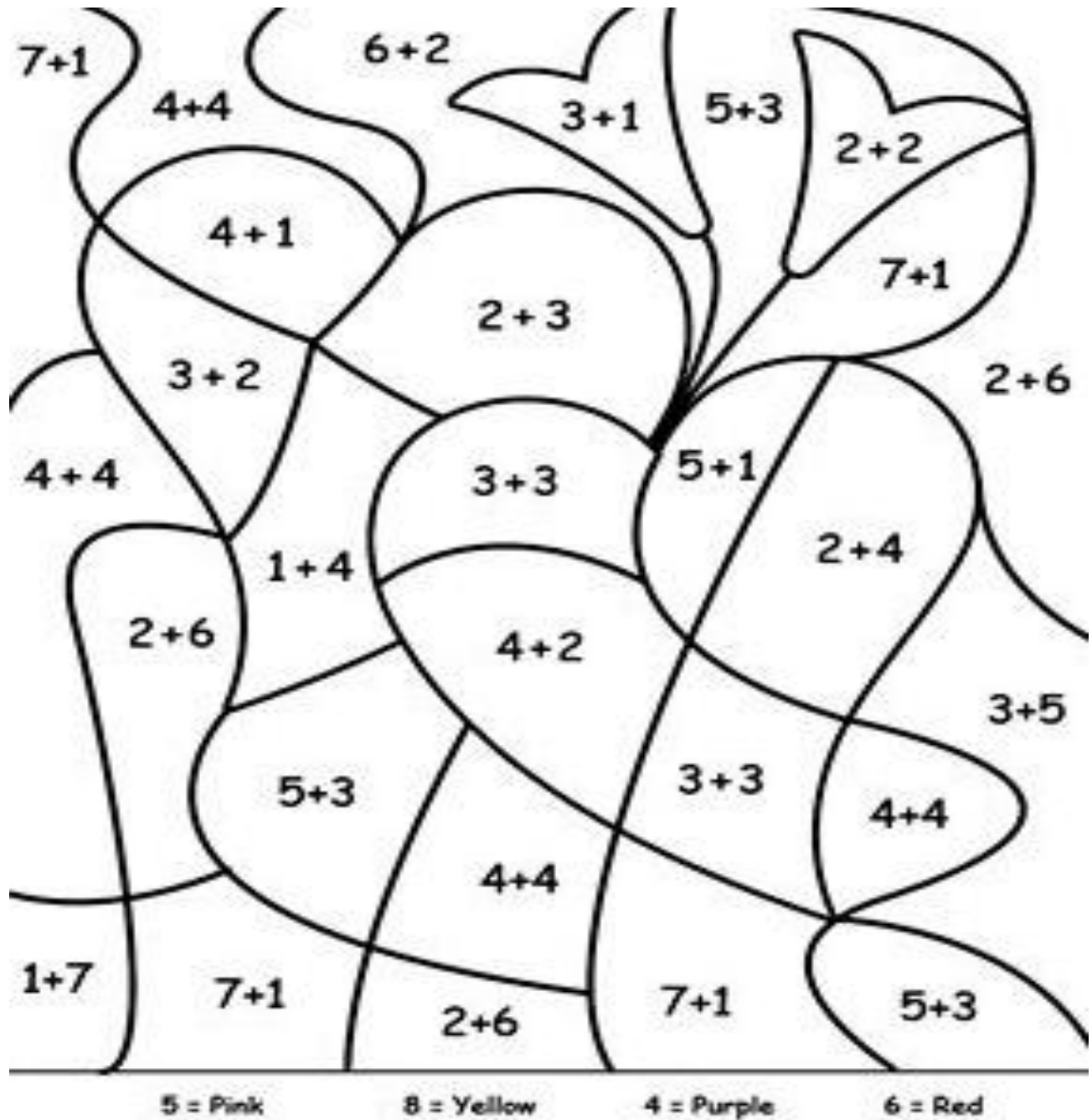
$$\begin{array}{r} 2 \\ + 7 \\ \hline \end{array}$$



$$\begin{array}{r} 5 \\ + 4 \\ \hline \end{array}$$




$$\begin{array}{r} 6 \\ + 3 \\ \hline \end{array}$$



$$\begin{array}{r} 4 \\ + 2 \\ \hline \end{array}$$




Activity: Colour the picture as per the instruction given.



Greater than, Less than. Equal to.



greater
than



less
than



equal

Fill in each Write $<$, $>$, or $=$ to compare the numbers.



$$8 < 10$$

$$7 > 3$$

$$9 > 8$$

$$4 < 7$$

$$2 = 2$$



$$15 < 16$$

$$16 > 14$$

$$11 = 11$$

$$19 > 17$$

$$12 < 13$$

Activity: Fork painting.

