



**पुर्णमा International School**  
Shree Swaminarayan Gurukul, Zundal

***Grade -***

***Jr.KG***

***Math***

***Specimen***

***copy***

***Year 22-***

***23***







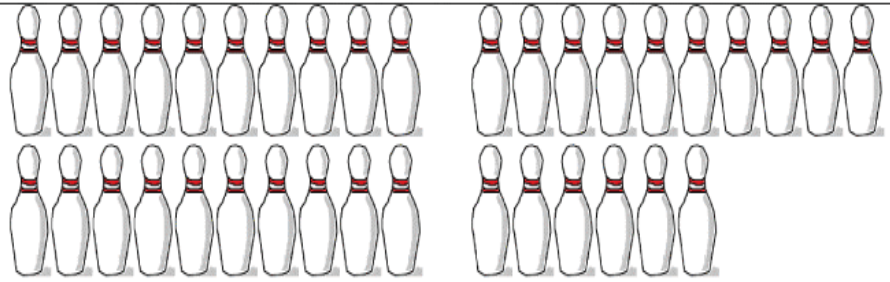





# **INDEX**

<b>Sr. No.</b>	<b>Month</b>	<b>Topic</b>	<b>Sign</b>
1	October	Numbers 31 - 40	
2		Missing numbers	
3		Before and after numbers	
4	November	Numbers 41 - 50	
5	December	Missing numbers	
6	January	Number names 1 to 20	
7	February	Numbers 1 – 50	
8		Before and after numbers	
9		Between numbers	

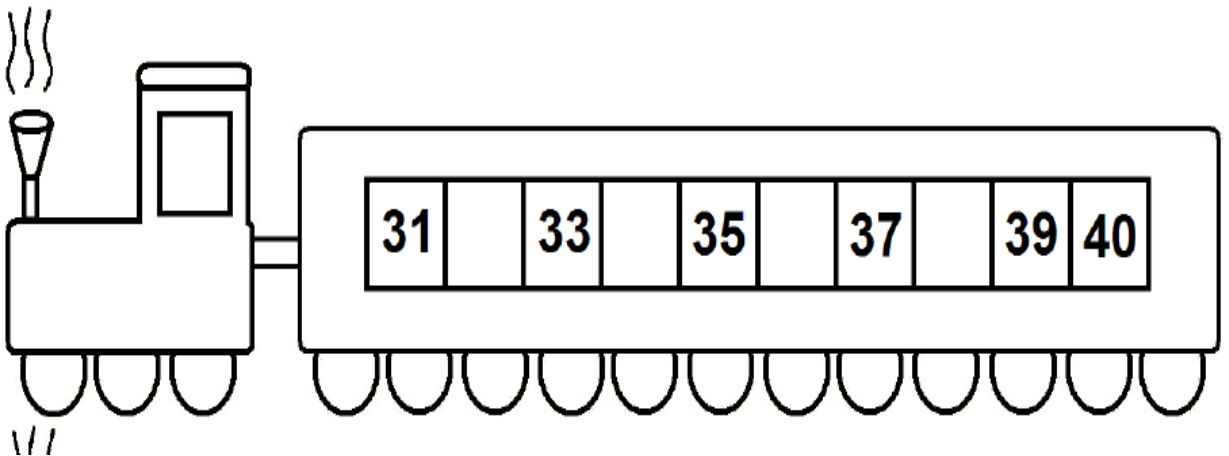
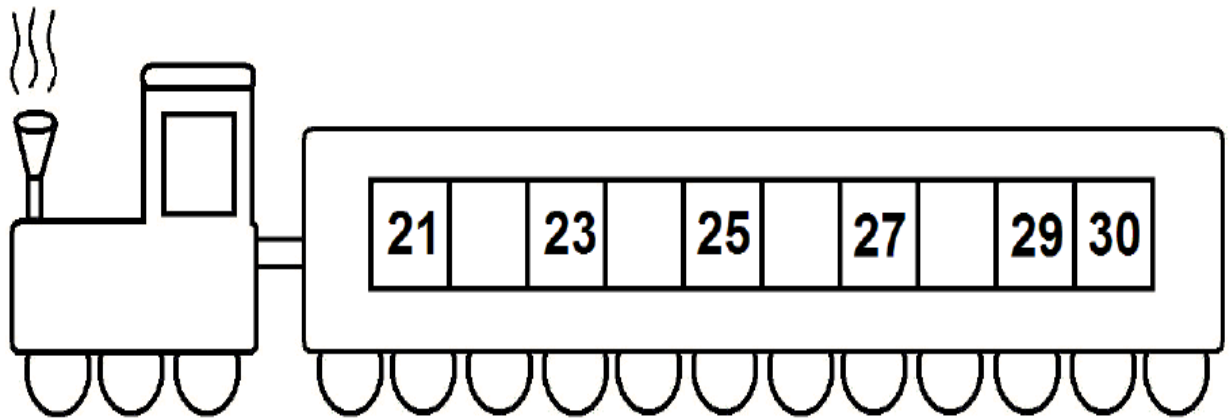
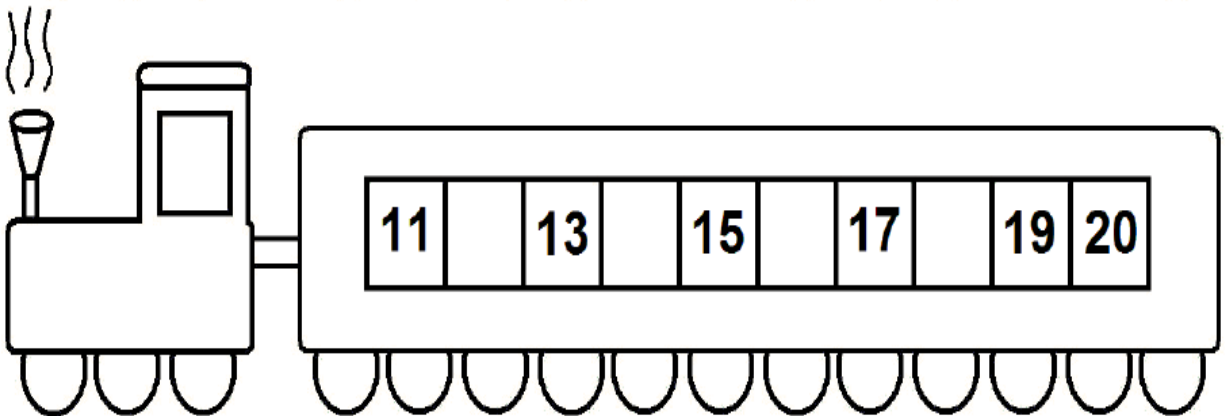
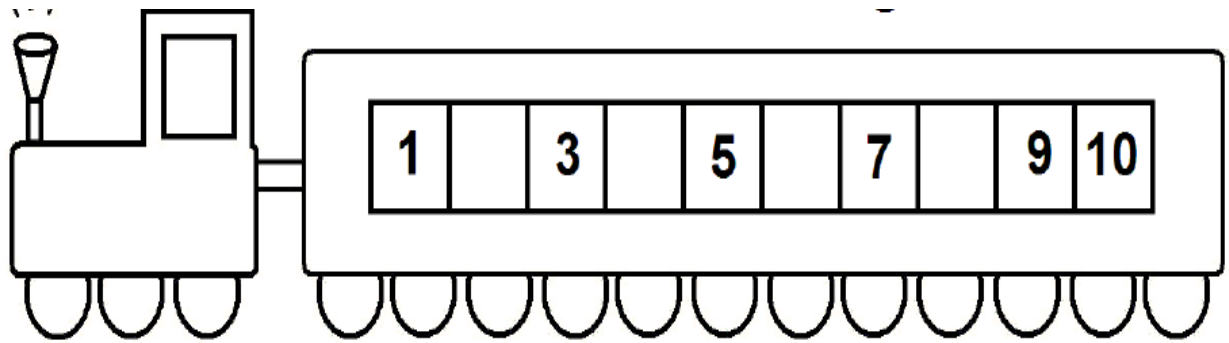
**Write Numbers 31 to 40.**

<b>31</b>				
<b>32</b>				
<b>33</b>				
<b>34</b>				
<b>35</b>				
<b>36</b>				
<b>37</b>				
<b>38</b>				
<b>39</b>				
<b>40</b>				

# Count the objects and write the correct number.

1)		How many? 
2)		How many? 
3)		How many? 
4)		How many? 
5)		How many? 
6)		How many? 

Write the missing number.




Write the before and after number.



## Write Numbers 41 to 50.

41				
42				
43				
44				
45				
46				
47				
48				
49				
50				


Count the objects and circle the correct number.




11 7




13 14



8 15



16 13




9 5



12 10



8 6



15 17



Write the missing numbers.

1	11	21	31	41
3	13	23	33	43
5	15	25	35	45
7	17	27	37	47
9		29		49
10	20	30	40	50

Count the object and match with the number name.


Two



Five




Three



One



Four



Fill in the missing letters.



t\_\_o



\_\_even



fou\_\_



\_\_ne



s\_\_x



t\_\_ree



fi\_\_e

**Write the number names 1 to 10.**

1	One		
2	Two		
3	Three		
4	Four		
5	Five		
6	Six		
7	Seven		
8	Eight		
9	Nine		
10	Ten		

**Write the number names 11 to 20.**

11	Eleven		
12	Twelve		
13	Thirteen		
14	Fourteen		
15	Fifteen		
16	Sixteen		
17	Seventeen		
18	Eighteen		
19	Nineteen		
20	Twenty		



Write the before and after numbers.

Before		After
	27	
	30	
	33	
	36	
	39	

---

**Write the between numbers.**

13	—	15
----	---	----

21	—	23
----	---	----

32	—	34
----	---	----

4	—	6
---	---	---

18	—	20
----	---	----

37	—	39
----	---	----

26	—	28
----	---	----

14	—	16
----	---	----

7	—	9
---	---	---

23	—	25
----	---	----

34	—	36
----	---	----

6	—	8
---	---	---

9	—	11
---	---	----

38	—	40
----	---	----