



## PERIODIC ASSESSMEN- I QUESTION BANK 2023-24

STUDENT NAME				
SUBJECT		GRADE	ROLL NO.	


### [SECTION – A READING]

Q1. Read the comprehension and fill in the blanks.

#### The Apple Tree

Here is a beautiful Apple Tree. This tree is very tall. It is full of red apples. There are 10 apples on the tree. The leaves of the tree are green.

1. It is a beautiful \_\_\_\_ tree.
2. This \_\_\_\_\_ is very tall.
3. The color of the apples is \_\_\_\_\_.
4. There are \_\_\_\_\_ apples on the tree.
5. The leaves of the tree are \_\_\_\_\_.
6. Write opposite of Tall X \_\_\_\_\_.



Q2. Read the comprehension and fill in the blanks.

#### Rainbow

A rainbow is made 7 colors. Rainbows can exist at night. Rainbows can be full circles. The first color in a rainbow is violet. The last color in a rainbow is Red.

1. Rainbow has \_\_\_\_\_ Colors.
2. Rainbows can exist at \_\_\_\_\_.
3. They can be full \_\_\_\_\_.
4. The first color in a rainbow is \_\_\_\_\_.
5. \_\_\_\_\_ is the last color in a rainbow.
6. Opposite of night X \_\_\_\_\_.



[SECTION – B WRITING]

Q3. Essay Writing. :- “ My Father”

---

---

---

---

---

Q4. Essay Writing. :- “ My School”

---

---

---

---

---

[SECTION – C GRAMMER]

Q5. Write C for countable noun and U for uncountable noun.

- a) Carrot \_\_, Rice \_\_, Salt \_\_, Oil \_\_
- b) Water \_\_, Sugar \_\_, Apples \_\_, Milk \_\_
- c) Wheat \_\_, Wood \_\_, Butter \_\_, Dog \_\_
- d) Juice \_\_, Coffee \_\_, Cup \_\_, Tea \_\_
- e) Cloth \_\_, Ink \_\_, Paper \_\_, Book \_\_
- f) Chair \_\_, Water \_\_, Ink \_\_, Milk \_\_
- g) Cheese \_\_, Student \_\_, Soil \_\_, Sand \_\_
- h) Petrol \_\_, Love \_\_, Blood \_\_, Bottle \_\_
- i) Scooter \_\_, Hine \_\_, Butter Milk \_\_, Shampoo \_\_
- j) Pen \_\_, Car \_\_, Kite \_\_, Ghee \_\_

Q6. Underline the proper noun and circle the common noun.

- a) Fatima, father, France, fox
- b) Emma, eagle, electrician, Easter
- c) basket, bun, Bharat, bee
- d) Delhi, dentist, Daljeet, drum
- e) ant, Anand, apple, America
- f) Japan, Jacob, Jupiter, jam
- g) hat, honey, jackal, Harish
- h) Goa, game, Govind, goat

**[SECTION – D LITERATURE]**

Q7. Write rhyming words for the given words.

- |           |           |
|-----------|-----------|
| a) Will - | f) Tree - |
| b) Good-  | g) Sing-  |
| c) Full-  | h) But-   |
| d) My-    | i) Hop-   |
| e) Like-  | j) Moon-  |

Q8. Write Opposite words for the given words

- |             |             |
|-------------|-------------|
| a) Strong X | e) Little X |
| b) Down X   | f) Like X   |
| c) Happy X  | g) Come X   |
| d) Long X   | h) Top X    |

Q9. Match the words with its meaning.

a) Rush
b) Climb
c) Adventure
d) Late
e) Glasses
f) Whenever
g) Magic wand
h) Strong
i) Wish
j) Happy
k) Trunk
l) Monster

To go up wards
To run fast
Not on time
Exciting activity
Anytime
Spectacles
Powerful
Magic Stick
In a joyful mood
Want
A large scary creature
Long nose of an elephant

Q10. Answer the following Questions.

1) What is the name of your school?

A.1. \_\_\_\_\_

2) What does the child in the poem think about his drawing?

A.2. \_\_\_\_\_

3) What do you wear to school?

A.3. \_\_\_\_\_

4) Where was Haldi going?

A.4. \_\_\_\_\_

5) How did she reach school?

A.5. \_\_\_\_\_

6) How do you go to school?

A.6. \_\_\_\_\_

7) What can the Myna do?

A.7. \_\_\_\_\_

8) What does the fish do in a sea?

A.8. \_\_\_\_\_

9) How many arms does an octopus have?

A.9. \_\_\_\_\_

Q11. Complete the lines of the poem.

- 1) I \_\_\_\_\_ if my puppy.
- 2) Will \_\_\_\_\_ like \_\_\_\_\_ or gran.
- 3) Or \_\_\_\_\_ be full of \_\_\_\_\_
- 4) I wonder if my \_\_\_\_\_
- 5) \_\_\_\_\_ be as \_\_\_\_\_ as theirs
- 6) If I were a \_\_\_\_\_
- 7) I would be \_\_\_\_\_
- 8) For my \_\_\_\_\_

Q12. Dictation Word.

- |            |              |
|------------|--------------|
| A) Look    | H) Birds     |
| B) Teacher | I) Morning   |
| C) Wonder  | J) Butterfly |
| D) Drawing | K) Octopus   |
| E) Full    | L) Thankful  |
| F) Smiley  | M) Raise     |
| G) Giraffe | N)Wings      |





## PERIODIC ASSESSMENT -I QUESTION BANK 2023-24

STUDENT NAME				
SUBJECT	EVS	GRADE	II	ROLL NO.

### Q.1 Choose the correct option.

- The brain is inside our-  
(a) Lungs (b) **Head** (c) stomach
- A chair can not move because it is a \_\_\_\_\_ thing.  
(a) Water (b) **Non-living** (c) Air
- The plant grow up into-  
(a) **Trees** (b) Animal (c) Baby
- Which one is an internal organ?  
(a) Hair (b) **Stomach** (c) Skin
- Which one is not an internal organ?  
(a) **Eyes** (b) Heart (c) Brain
- \_\_\_\_\_ is the upper most part of our body.  
(a) Hand (b) **Head** (c) Leg
- Which of this looks like a bag-  
(a) Lungs (b) **Stomach** (c) Brain
- All plants and \_\_\_\_\_ are living thing.  
(a) **Animals** (b) Wood (c) Water
- We get \_\_\_\_\_ from the silkworm .  
(a) **Silk** (b) Cotton (c) Wool
- Making thread from cotton is called \_\_\_\_\_.  
(a) Weaving (b) **Spinning** (c) Threading
- We need fresh \_\_\_\_\_ to breathe  
(a) **Air** (b) Water (c) Eyes
- When do we wear a raincoat?  
(a) Summer (b) **Rainy** (c) Winter
- We wear \_\_\_\_\_ for school.  
(a) **Uniform** (b) raincoat (c) saree
- A new born is called a  
(a) Child (b) Adult (c) **Baby**

15. Our \_\_\_\_\_ help us to see  
 (a) Nose (b) **Eyes** (c) Tongue

**Q.2 Fill in the blanks.**

1. Our body is a **living** Machine.
2. Our **skin** helps us to feel hot and cold.
3. Little plants grow into **big** plants.
4. Ali is **tall** and strong.
5. All living things **grow**.
6. We wear **cotton** clothes in summer.
7. Cotton clothes keep us **cool**.
8. We get **silk** from silkworm.
9. A **tailor** stitches different types of clothes.
10. **Baby** animals grow into big animals.
11. Ali is **7** years old.
12. We have **five** sense organs.
13. We think with the help of our **brain**.

**Q.3 Write Missing Letter**

1. B I C Y C L E
2. I N T E R N A L
3. O R G A N S
4. G R O W
5. P L A N T S
6. R A I N C O A T
7. W O O L L E N
8. T H U M B
9. T O N G U E
10. A D U L T

**Q.4 Match the following**

- |                      |   |   |                |
|----------------------|---|---|----------------|
| 1. Tongue            | ← | → | Legs           |
| 2. Walk              | ← | → | Test           |
| 3. Egg               | ← | → | Gown of girl   |
| 4. In a wedding      | ← | → | Hen            |
| 5. On a hill station | ← | → | Tree           |
| 6. Little plant      | ← | → | Woollen Jacket |
| 7. Silkworm          | ← | → | Cloudy         |
|                      | ← | → |                |









# पुर्ना International School

Shree Swaminarayan Gurukul, Zundal

PERIODIC ASSESSMENT - I QUESTION BANK 2022-23

STUDENT NAME			
SUBJECT	MATHS	GRADE	II
ROLL NO.			

**Q1. Write the number names.**

1. 100	
2. 117	
3. 300	
4. 272	
5. 180	
6. 180	
7. 368	
8. 199	
9. 256	
10. 232	

**Q2. Write down the numbers.**

- One hundred forty two = \_\_\_\_\_
- Four hundred sixty eight = \_\_\_\_\_
- Four hundred = \_\_\_\_\_
- Two hundred twenty one = \_\_\_\_\_
- One hundred seventy five = \_\_\_\_\_
- Three hundred ninety four = \_\_\_\_\_
- Four hundred thirty = \_\_\_\_\_
- One hundred fifty five = \_\_\_\_\_
- Three hundred forty four = \_\_\_\_\_
- One hundred eight = \_\_\_\_\_

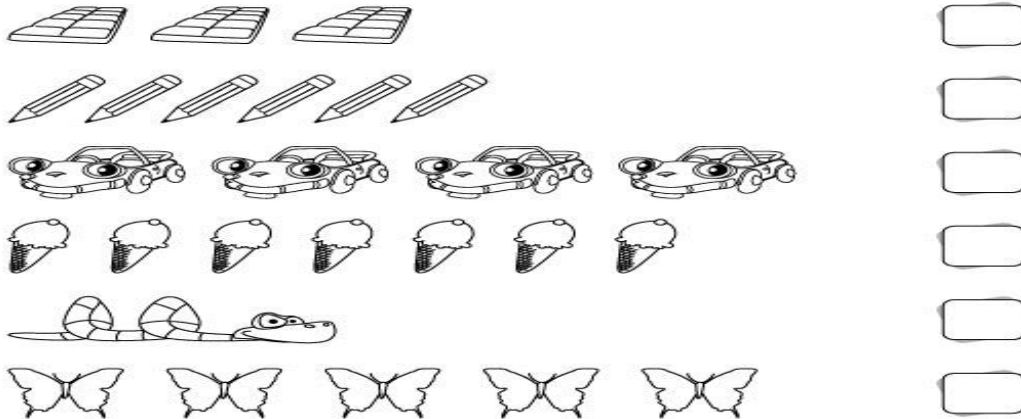
**Q3. Separate the given things which will roll and which will slide.**

Watch , ball, water melon, book , duster , bat , Earth , Orange , Gift box	
ROLL	SLIDE

**Q4. Write  $<$  ,  $>$  , or  $=$  in the blanks.**

- |                  |                   |                   |
|------------------|-------------------|-------------------|
| 1. 262 _____ 242 | 6. 178 _____ 100  | 11. 97 _____ 42   |
| 2. 344 _____ 390 | 7. 120 _____ 110  | 12. 68 _____ 78   |
| 3. 170 _____ 201 | 8. 230 _____ 130  | 13. 101 _____ 122 |
| 4. 100 _____ 100 | 9. 424 _____ 470  | 14. 200 _____ 199 |
| 5. 372 _____ 324 | 10. 222 _____ 222 | 15. 120 _____ 120 |

**Q5. Fill in the blanks with the correct numbers of objects.**



**Q6. Find out the missing numbers?**

- |                  |                   |
|------------------|-------------------|
| 1. 244 _____ 246 | 9. 49 _____ 51    |
| 2. 100 _____ 102 | 10. 120 _____ 122 |
| 3. 322 _____ 324 | 11. 351 _____ 353 |
| 4. 199 _____ 201 | 12. 197 _____ 199 |
| 5. 95 _____ 97   | 13. 56 _____ 58   |
| 6. 121 _____ 123 | 14. 299 _____ 301 |
| 7. 262 _____ 264 | 15. 442 _____ 444 |
| 8. 78 _____ 80   |                   |

**Q7. Write ordinal numbers . As shown .**

- |                            |                              |
|----------------------------|------------------------------|
| 1. 8 <sup>th</sup> = _____ | 6. 7 <sup>th</sup> = _____   |
| 2. 6 <sup>th</sup> = _____ | 7. 2 <sup>nd</sup> = _____   |
| 3. 1 <sup>st</sup> = _____ | 8. 5 <sup>th</sup> = _____   |
| 4. 9 <sup>th</sup> = _____ | 9. 3 <sup>rd</sup> = _____   |
| 5. 4 <sup>th</sup> = _____ | 10. 10 <sup>th</sup> = _____ |

**Q8. Arrange the following numbers in ascending order.**

1. 421, 427, 420, 423, 428  
A. 420, 421, 423, 427, 428
2. 152, 150, 154, 151, 156  
A. \_\_\_\_\_
3. 95, 90, 91, 99, 100  
A. \_\_\_\_\_
4. 72, 69, 75, 71, 70  
A. \_\_\_\_\_
5. 238, 235, 239, 240, 232  
A. \_\_\_\_\_
6. 45, 39, 41, 37, 40

A. \_\_\_\_\_

7. 162, 167, 160, 169, 161

A. \_\_\_\_\_

8. 311, 308, 315, 310, 319

A. \_\_\_\_\_

**Q9. Arrange the following numbers in descending order .**

1. 44, 36, 48, 32, 49

A. 49, 48, 44, 36, 32

2. 72, 80, 79, 82, 70

A. \_\_\_\_\_

3. 98, 100, 91, 95, 101

A. \_\_\_\_\_

4. 225, 219, 228, 230, 211

A. \_\_\_\_\_

5. 89, 85, 87, 90, 82

A. \_\_\_\_\_

6. 22, 32, 11, 25, 35

A. \_\_\_\_\_

7. 105, 100, 110, 106, 101




A. \_\_\_\_\_

8. 69, 62, 70, 65, 72

A. \_\_\_\_\_

**Q10. Find the total number of objects and fill in the blanks .**

1.

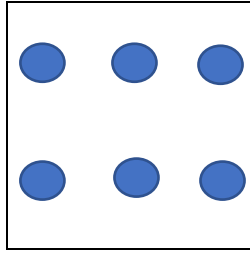
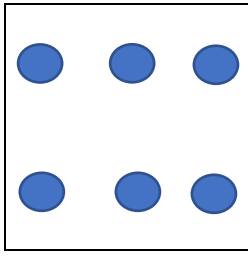


a. How many groups are there ? \_\_\_\_\_ .

b. How many stars are there in each groups? \_\_\_\_\_ .





c. Total number of stars ? \_\_\_\_\_ .

2.



- a. How many groups are there? \_\_\_\_\_.
- b. How many circles are there in each groups? \_\_\_\_\_.
- c. Total number of circles  $2 \times 6 =$  \_\_\_\_\_.

3.



- a. How many groups are there? \_\_\_\_\_.
- b. How many hearts are there in each groups? \_\_\_\_\_.
- c. Total number of heart shapes? \_\_\_\_\_.

# पुनऱा International School

Shree Swaminarayan Gurukul, Zundal

## PERIODIC ASSESSMENT-I ASSIGNMENT(2023-24)

STUDENTS NAME

SUBJECT

HINDI

GRADE

II

ROLL NO.

Syllabus : From text book ch 1, 2, 3 अपठित गद्यांश, विलोम शब्द

प - १ दिए गए अपठित गद्यांश को पढ़कर रिक्त स्थान भरिए ।

गोकुल नाम का एक गाँव था । उस गाव में एक शरारती बंदर रहता था।

वह लोगों को परेशान करता था । लोगों के कपड़ें,

बरतन, सब्जी और फल उठा कर ले जाता था ।



१ गोकुल नाम का एक -----था।

२. गाव में एक शरारती----- रहता था।

३. वह ----- को परेशान करता था।

४. लोगों के कपड़ें, बरतन, सब्जी और ----- उठा ले जाता था।

५. ----- नाम का एक गाव था।

प्र - २ समान लयवाले शब्द पर निशान लगाए ।

१. सोई - रोई / बूझा २. म्याऊँ - पर / डराऊँ

३. डरी - भरी / घड़ी ४. सूझा - डराऊँ / बूझा

५. भर - पर / रोई ६. खड़ी - घड़ी / भरी

प्र - ३ विलोम शब्द लिखिए ।

१ शुभ - ----- २ भला - -----

३ सरल - ----- ४ दिन - -----

५ आदर - ----- ६ धरती - -----  
७ धर्म - ----- ८ पसंद - -----

प्र -४ शब्द रचना किजिए।

१ लो +म +ड़ी - ----- ४ को +ह +रा - -----  
२ मौ +स+म - ----- ५ सि +म +ट +ना- -----  
३ जा +मु +न - ----- ६ बि +ल +ख +ना - -----

प्र -६ शब्दार्थ लिखिए ।

१ रेत- ----- २ गर्दन- -----  
३ कोहरा - ----- ४ लपकना - -----  
५ सुबह - ----- ६ वक्त - -----  
७ काँपना - ----- ८ हर्जाना - -----  
९ हड़बड़ी - ----- १० एकाएक - -----

प्र -७ पालतू पशुओं के नाम लिखिए।

१ ----- २ -----  
३ ----- ४ -----  
५ ----- ६ -----

प्र -८ खाली जगह भरिए ।

१. ऊँट का रंग \_\_\_\_\_ होता है । ( भूरा / काला )
२. ऊँट को \_\_\_\_\_ का जहाज कहा जाता है । (पानी, रेगिस्तान )
३. \_\_\_\_\_ के बच्चे ने डाल पकड़ ली । ( शेर / गाय )
४. लड़की को \_\_\_\_\_ से डर लगा । ( बिल्ली / चुहिया )
५. भालू साहब \_\_\_\_\_ के मौसम में घूमने निकले । ( गर्मी / सर्दी )
६. ऊँट लंबे समय तक \_\_\_\_\_ के बिना रह सकता है। ( खाना / पानी )

प्र -९ सही उत्तर पर सही का निशान लगाओ ।

१. इनमें से कौन बोझा ढोने में काम आता है ?

अ - गाय                      ब - बकरी                      क - ऊँट

२. म्याऊँ , म्याऊँ !! कविता के कवि का नाम क्या है ।

अ - प्रयाग शुक्ल                      ब- योगेश जोशी                      क - धर्मपाल शास्त्री

३. जरा ठीक तो हो लूँ । किसने कहा ?

अ - माली ने                      ब - शेर के बच्चे ने                      क - भालू ने

४. बिल्ली की आवाज़ किसने निकाली है ?

अ - लड़के ने                      ब - लड़की ने                      क - चूहे ने

५. मैं अभी आता हूँ । किसने कहा ?

अ - माली ने                      ब - शेर के बच्चे ने                      क - भालू ने

प्र -१० सही या गलत का निशान लगाइए ।

१ ऊँट हिलता डुलता चलता है। -

२ शेर का बच्चा आम के पेड़ के नीचे सो रहा था । -

३ लड़की ने म्याऊँ की आवाज़ निकाली । -

४ भालू ने शेर के बच्चे को चार बार उछाला । -

५ लड़की बिलखकर रो रही थी । -

प्र - ११ प्रश्नों के उत्तर लिखिए ।

प्रश्न - १ ऊँट की गर्दन कैसी होती है ?

उत्तर - १ ----- ।



प्रश्न - २ भालू ने किसके बच्चे को उछाल दिया ?

उत्तर - २ -----

प्रश्न - ३ शेर का बच्चा कहाँ सोया हुआ था ?

उत्तर ३ -----

प्रश्न - ४ चुहिया कहाँ काट गई थी ?

उत्तर - ४ -----

प्रश्न - ५ चारों ओर क्या छाया हुआ था ?

उत्तर ५ -----

प्रश्न - ६ भालू ने शेर के बच्चे को कितनी बार उछाला ?

उत्तर - ६ -----

सु. क्ला

सु. क्ला



