



पुर्णमा International School

Shree Swaminarayan Gurukul, Zundal

SUMMATIVE ASSESSMENT – I QUESTION BANK 2022-23					
STUDENT NAME					
SUBJECT	MATHS	GRADE	II	ROLL NO.	

Q1. Identify as tens and ones and write in expanded form.


1. 75	7 tens + 5 ones
2. 68	
3. 40	4 tens + 0 ones
4. 31	
5. 54	
6. 23	
7. 19	
8. 88	
9. 41	
10. 36	


Q 2. Addition and Subtraction of weights.


1. Kg	g	2. Kg	g	3. Kg	g
4	323	3	258	6	732
+1	426	+4	131	+1	124
_____		_____		_____	
_____		_____		_____	


4. kg	g	5. Kg	g	6. kg	g
9	459	7	294	8	621
- 2	136	- 3	042	- 5	410
_____		_____		_____	
_____		_____		_____	


Q 3. Draw shapes and complete the patterns.


1.  _____

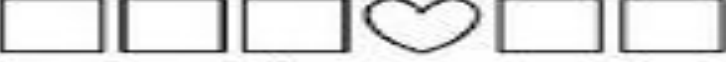
2.  _____


3.  _____

4.  _____

5.  _____

6.  _____

7.  _____

8.  _____

Q 4. Write down the fill in the blanks .

1. 1 Litre = _____ ml .
2. 1 Kg = _____ g.
3. A circle and an Oval has _____ corners.
4. A square has _____ corners and all the four sides are _____ .
5. Triangle has _____ sides and _____ corners.
6. Rectangle has _____ corners and its _____ sides.
7. A cone has _____ faces and edges.
8. A cube has _____ edges.
9. A cube has _____ corners and _____ faces.
10. A cuboid has _____ faces and _____ edges.
11. A sphere has _____ curved face and _____ edges.
12. A cylinder has _____ plane surfaces .It has _____ faces and _____ edges.

Q5. Write the before number of the following numbers.

- | | |
|--------------|---------------|
| 1. _____ 122 | 7. _____ 240 |
| 2. _____ 160 | 8. _____ 160 |
| 3. _____ 552 | 9. _____ 395 |
| 4. _____ 240 | 10. _____ 788 |
| 5. _____ 199 | 11. _____ 809 |
| 6. _____ 305 | 12. _____ 444 |

Q6. Write the after number of the following numbers.

- | | |
|--------------|---------------|
| 1. 140 _____ | 7. 341 _____ |
| 2. 228 _____ | 8. 190 _____ |
| 3. 551 _____ | 9. 200 _____ |
| 4. 660 _____ | 10. 452 _____ |
| 5. 378 _____ | 11. 137 _____ |
| 6. 244 _____ | 12. 572 _____ |

Q7. Write the missing numbers.

- _____, 76, _____, 78 _____, _____, _____
- 100, 101, _____, _____, _____, _____
- _____, 42, _____, _____, 45, _____
- 132, _____, 134, _____, 136, _____, _____
- 42, 43, _____, 45, _____, _____, _____
- 236, _____, 238, _____, 240, _____, _____
- 404, _____, 406, _____, 408, _____, _____
- _____, 58, _____, 60, _____, 62, _____
- _____, 130, _____, 132, _____, _____, _____
- _____, 163, _____, 165, 166, _____, _____
- 340, _____, 342, _____, 344, _____, _____
- _____, 452, _____, 454, _____, _____, _____

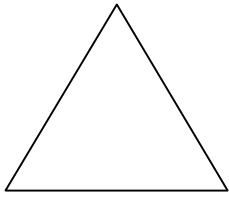
Q8. Addition with carry .


- | | | |
|--|--|--|
| 1. $\begin{array}{r} 5 \quad 8 \\ + 2 \quad 8 \\ \hline \\ \hline \end{array}$ | 2. $\begin{array}{r} 6 \quad 4 \\ + 2 \quad 6 \\ \hline \\ \hline \end{array}$ | 3. $\begin{array}{r} 7 \quad 3 \\ + 0 \quad 7 \\ \hline \\ \hline \end{array}$ |
| 4. $\begin{array}{r} 3 \quad 9 \\ + 4 \quad 5 \\ \hline \\ \hline \end{array}$ | 5. $\begin{array}{r} 4 \quad 9 \\ + 4 \quad 6 \\ \hline \\ \hline \end{array}$ | 6. $\begin{array}{r} 2 \quad 6 \\ + 5 \quad 6 \\ \hline \\ \hline \end{array}$ |

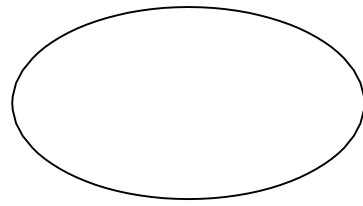
Q9. Subtraction with borrowing.

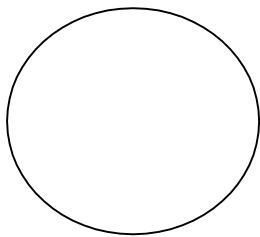
- | | | |
|--|--|--|
| 1. $\begin{array}{r} 3 \quad 4 \\ - 1 \quad 6 \\ \hline \\ \hline \end{array}$ | 2. $\begin{array}{r} 5 \quad 6 \\ - 2 \quad 7 \\ \hline \\ \hline \end{array}$ | 3. $\begin{array}{r} 7 \quad 3 \\ - 1 \quad 9 \\ \hline \\ \hline \end{array}$ |
| 4. $\begin{array}{r} 6 \quad 2 \\ - 3 \quad 5 \\ \hline \\ \hline \end{array}$ | 5. $\begin{array}{r} 9 \quad 0 \\ - 3 \quad 8 \\ \hline \\ \hline \end{array}$ | 6. $\begin{array}{r} 2 \quad 0 \\ - 1 \quad 5 \\ \hline \\ \hline \end{array}$ |

Q10. Identify the shapes and write their names.

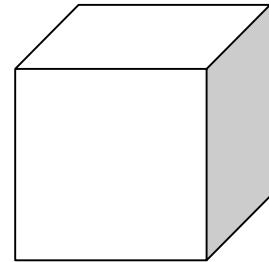





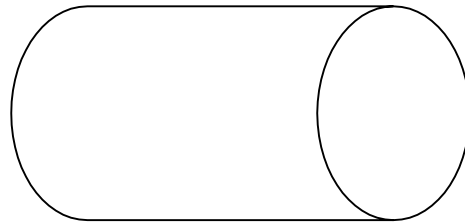












Q 11. Addition and subtraction of capacity.

L	ml	L	ml	L	ml
6	42	7	64	3	15
+ 3	46	+ 2	35	+ 2	42
<hr/>	<hr/>	<hr/>	<hr/>	<hr/>	<hr/>
<hr/>	<hr/>	<hr/>	<hr/>	<hr/>	<hr/>

L ml	L ml	L ml
9 4 6	6 2 1	8 5 7
- 5 3 2	- 4 1 1	- 6 3 5
_____	_____	_____

Q12. Word problem.

1. English book contains 236 pages. EVS books contains 352 pages. Find the total number of pages in two books ?

A -----

2. Rohan picked 36 flowers and Rita picked 45 flowers. How many total flowers. They are picked.

A -----

3. Priya has 25 Pencils and she gave 10 pencils to his friends. How many more pencils does priya have?

A -----

4. In your class today only 18 of the 37 student were at school. How many were absent?

A -----

5. In your school there are 45 female teachers and 35 male teachers. Find the total number of teachers in your school.

A -----

