



PERIODIC ASSESSMENT – 3 2020-21

Student's Name					
Date		Grade	II	Roll No.	
Subject	Science	Marks	25	Teacher's Sign	

General Instruction –

Read the paper carefully and attempt all the questions.

Q1. Write the expanded form. [5 marks]

a) 234 _____

b) 576 _____

c) 708 _____

d) 850 _____

e) 456 _____

Q2. Identify as hundreds , tens and ones. [4 marks]

a) 125 = _____

b) 656 = _____

c) 534 = _____

d) 372 = _____

Q3. Circle the odd no. [2marks]

a) 246 , 345 , 568 , 840

b) 354 , 422 , 356 , 359

Q4. Circle the even number . [2marks]

a) 553 , 550 , 959 , 255

a) 121 , 134 , 183 , 169



Q5. Fill in the blanks.

[4marks]


- a. 1 year = _____ days.
- b. 1 day = _____ hours
- c. 1 week = _____ days
- d. 1 hour = _____ minutes

Q6 . Count the value of given object.


[2marks]

If  = 10 And  = 1

➤ than find the value of

a) 

Ans - _____

b) 

Ans - _____

Q8. Answer the following questions.

[2Marks]

Q1. How many months have 30 days?


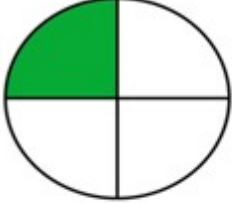
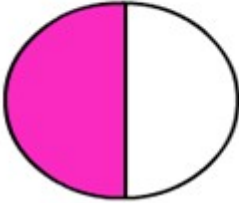

Ans : _____

Q2 . How many days in February month , when its leap year ?

Ans: _____

Q9. Identify the fraction and write in the box.

[4marks]

 <input data-bbox="504 477 635 624" type="text"/>	 <input data-bbox="1075 477 1206 624" type="text"/>
 <input data-bbox="504 824 635 972" type="text"/>	 <input data-bbox="1075 824 1206 972" type="text"/>

यु.एन.ए.