



# Purnima International School

Shree Swaminarayan Gurukul, Zundal

## PERIODIC ASSESSMENT – 3 2020-21

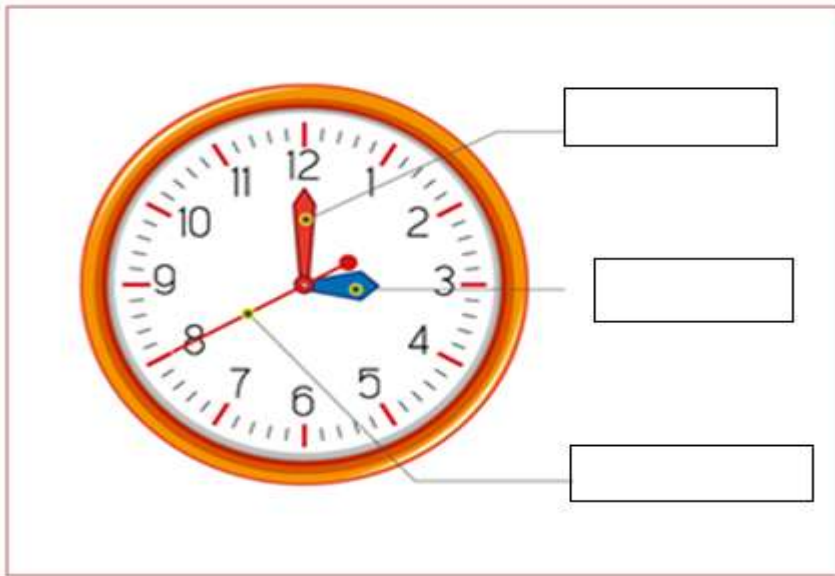
Student's Name					
Date		Grade	I	Roll No.	
Subject	Math	Marks	25	Teacher's Sign	

General Instruction –

Read the paper carefully and attempt all the questions.

**Q1 . Identify second's minute's and hour's hand.**

[3marks]



**Q2 Add the following numbers.**

[5 Marks]

$\begin{array}{r} 35 \\ + 14 \\ \hline \end{array}$	$\begin{array}{r} 42 \\ + 44 \\ \hline \end{array}$	$\begin{array}{r} 76 \\ + 23 \\ \hline \end{array}$	$\begin{array}{r} 50 \\ + 33 \\ \hline \end{array}$	$\begin{array}{r} 24 \\ + 65 \\ \hline \end{array}$

**Q3 Write the correct time.**

[5 Marks]


**Q4. Match the following with drawing line.**

**[5marks]**

- |                       |            |
|-----------------------|------------|
| a) Days in a week     | 365 days   |
| b) Month in a year    | 07 days    |
| c) Days in a year     | 60 minutes |
| d) Hours in a day     | 12 months  |
| e) Minutes in a hours | 24 hours   |

**Q5 Fill in the blanks and complete the name of the month.**


**[4marks]**

- a) S \_ \_ p t \_ \_ m b \_ \_ r
- b) M \_ \_ \_ c h
- c) S u \_ \_ d \_ \_ y
- d) F \_ \_ i d \_ \_ y

**Q6 Identify as given and colour them .**

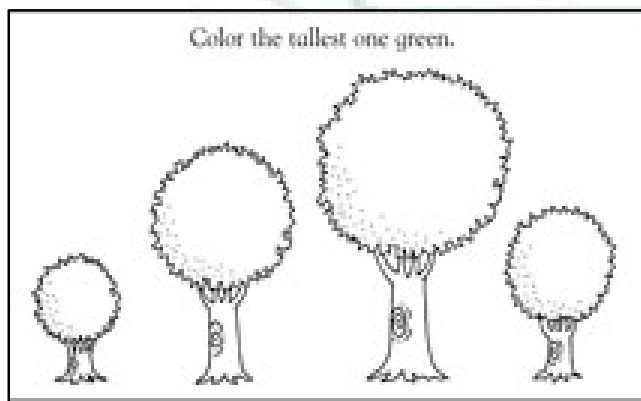
**[3marks]**

a) Colour the shortest animal .



b) Colour the tallest tree in green

c) Colour the picture that is thinnest.\



Color the picture that is the thinnest.

