



# Purna International School

Shree Swaminarayan Gurukul, Zundal

## Worksheet –Maths

Name :

Ch -3 How much can you carry ?

Grade : II

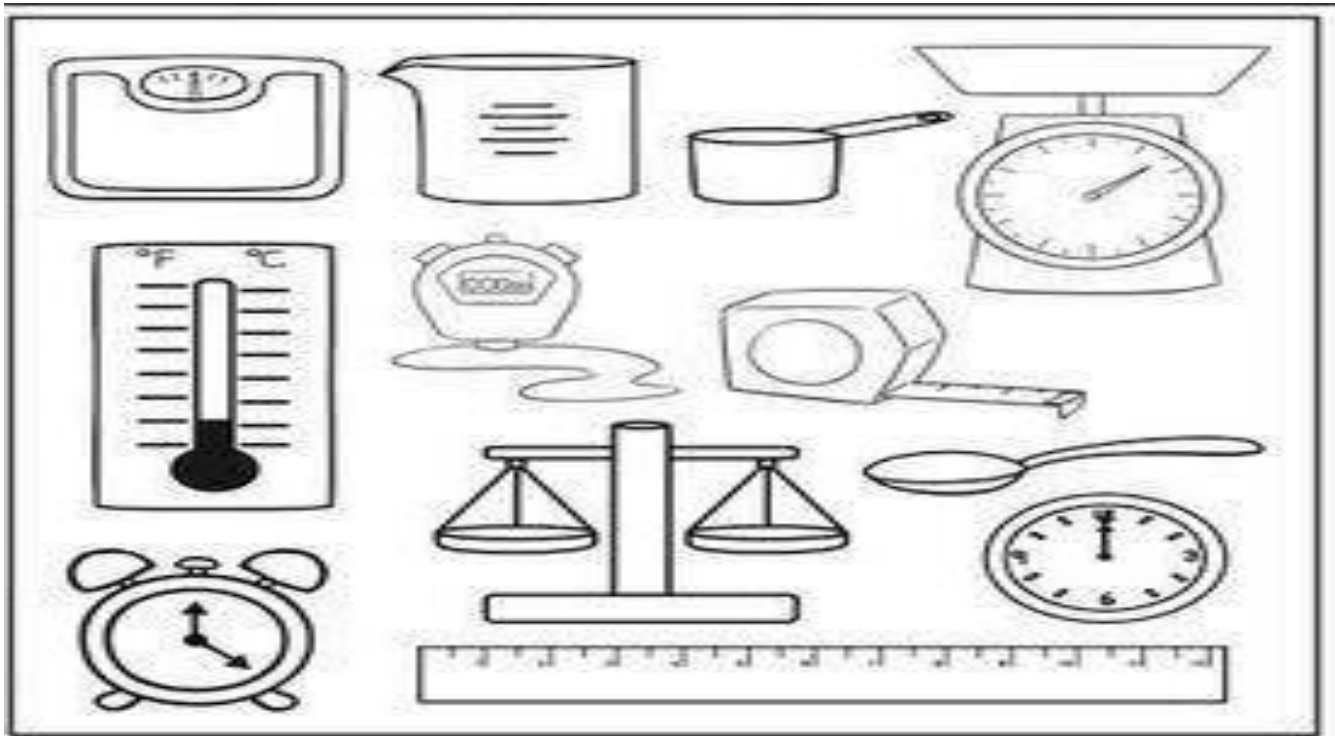
### Q1 Addition of weights.

$\begin{array}{r} \text{Kg} \quad \text{g} \\ 5 \quad 300 \\ + 4 \quad 200 \\ \hline \end{array}$ <input type="text"/>	$\begin{array}{r} \text{Kg} \quad \text{g} \\ 13 \quad 700 \\ + 12 \quad 200 \\ \hline \end{array}$ <input type="text"/>	$\begin{array}{r} \text{Kg} \quad \text{g} \\ 16 \quad 840 \\ + 11 \quad 700 \\ \hline \end{array}$ <input type="text"/>
$\begin{array}{r} \text{Kg} \quad \text{g} \\ 22 \quad 500 \\ + 15 \quad 400 \\ \hline \end{array}$ <input type="text"/>	$\begin{array}{r} \text{Kg} \quad \text{g} \\ 10 \quad 400 \\ + 14 \quad 500 \\ \hline \end{array}$ <input type="text"/>	$\begin{array}{r} \text{Kg} \quad \text{g} \\ 15 \quad 310 \\ + 41 \quad 300 \\ \hline \end{array}$ <input type="text"/>

### Q2. Subtraction of weights.

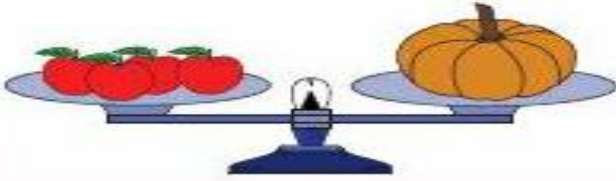
$\begin{array}{r} \text{Kg} \quad \text{g} \\ 45 \quad 560 \\ - 23 \quad 340 \\ \hline \end{array}$ <input type="text"/>	$\begin{array}{r} \text{Kg} \quad \text{g} \\ 67 \quad 100 \\ - 32 \quad 100 \\ \hline \end{array}$ <input type="text"/>	$\begin{array}{r} \text{Kg} \quad \text{g} \\ 43 \quad 450 \\ - 23 \quad 300 \\ \hline \end{array}$ <input type="text"/>	$\begin{array}{r} \text{Kg} \quad \text{g} \\ 34 \quad 500 \\ - 23 \quad 200 \\ \hline \end{array}$ <input type="text"/>
--	--	--	--

Q3. Colour the object that use to weigh solids .



Q4 Tick the heavier objects and cross the lighter object.


1)

2)

3)

4)

