



PUNJ International School

Shree Swaminarayan Gurukul, Zundal

PERIODIC ASSIGNMENT – 3 [2020-21]

Grade – 2

Sub- Maths

Name -

Q1 Write the expanded form.

a) 5 0 0 500 + 00 + 0 (0 is not compulsory to write)

b) 314 300 + 10 + 4

c) 2 5 1 _____

d) 95 6 _____

e) 7 8 2 _____

f) 86 0 _____

g) 405 _____

Q2 Count the value as given.

If -  = 10 Rs and  = 1 Rs

a)  

Ans 10 + 10 + 10 + 1 + 1 + 1 + 1 = 34

b)  

Ans - _____

c)  

Ans - _____

d) 

Ans - _____

e) 

Ans - _____

Q3. Circle the even and underline the odd number.

Circle the EVEN numbers in each set below.

1. 239 885 162 947 846

2. 447 417 582 585 272

3. 412 902 49 79 492

4. 377 331 88 499 974

5. 25 17 777 164 224

6. 84 172 913 523 9

7. 25 692 16 10 180

8. 470 295 805 982 714

9. 456 614 275 393 91

10. 157 401 977 294 649

Circle the ODD numbers in each set below.

1. 431 453 211 974 925

2. 667 572 106 738 582

3. 360 859 464 916 920

4. 704 195 890 96 610

5. 525 221 230 46 549

6. 129 167 979 859 330

7. 250 879 551 46 323

8. 715 218 994 731 955

9. 952 393 316 569 349

10. 962 423 24 502 920

Q4 Fill in the blanks.

a. 1 day = 24 hours

b. 1 week = 7 days

c. In leap year February have 29 days

d. 1 minutes = 60 seconds

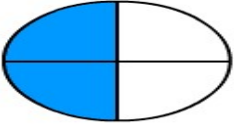
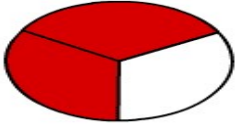
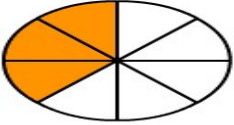
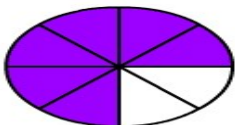
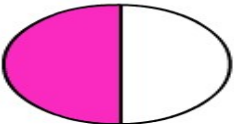

e. 1 year = 365 days

f. 1 hour = 60 minutes

g. There are 4 months have 30 days

h. There are 7 months have 31 days

Q5 Which fraction that coloured part shows. (no. of coloured part / no. of fraction)

 <div style="display: inline-block; border: 1px solid black; padding: 5px; margin-left: 20px;"> $\frac{2}{4}$ </div>	 <div style="display: inline-block; border: 1px solid black; padding: 5px; margin-left: 20px;"> $\frac{\quad}{\quad}$ </div>
 <div style="display: inline-block; border: 1px solid black; padding: 5px; margin-left: 20px;"> $\frac{\quad}{\quad}$ </div>	 <div style="display: inline-block; border: 1px solid black; padding: 5px; margin-left: 20px;"> $\frac{\quad}{\quad}$ </div>
 <div style="display: inline-block; border: 1px solid black; padding: 5px; margin-left: 20px;"> $\frac{\quad}{\quad}$ </div>	 <div style="display: inline-block; border: 1px solid black; padding: 5px; margin-left: 20px;"> $\frac{\quad}{\quad}$ </div>

Q6 Find the missing number of the following.

$\square + 20 = 50$	$40 - \square = 20$
$34 + \square = 46$	$\square - 15 = 13$
$\square + 13 = 35$	$19 - \square = 10$

Q7 Solve the word problems.

- a) A company manufactures 462 cars on Monday and 521 cars on Tuesday. Find the total number of cars manufactured on those two days.

b) I found 153 frogs in the pond. Some of them hopped away and now there are 122 left .
how many hopped away?

Ex8. For the actions below circle a.m. and p.m.

<p>Eating breakfast</p>  <p>7:00 a.m. p.m.</p>	<p>Teaching in school</p>  <p>9:00 a.m. p.m.</p>	<p>Swimming</p>  <p>3:00 a.m. p.m.</p>
<p>Gazing stars</p>  <p>9:00 a.m. p.m.</p>	<p>Playing piano</p>  <p>1:00 a.m. p.m.</p>	<p>Shopping</p>  <p>2:00 a.m. p.m.</p>
<p>Greet 'Good Morning'</p>  <p>8:00 a.m. p.m.</p>	<p>Greet 'Good Afternoon'</p>  <p>2:00 a.m. p.m.</p>	<p>Sleeping</p>  <p>12:00 a.m. p.m.</p>