



# पुर्णा International School

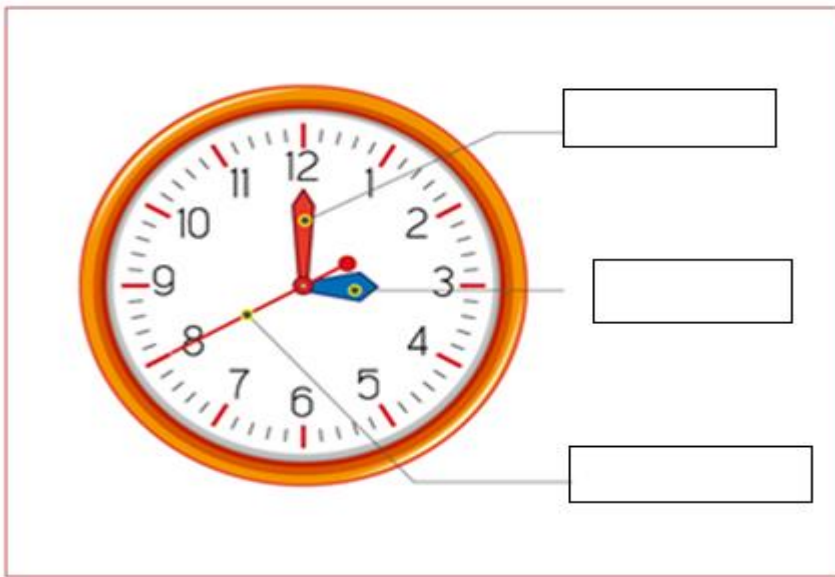
Shree Swaminarayan Gurukul, Zundal

## Periodic – Assessment - III 2021-22

Name :-	Grade :- I
Date :-	SUB :- Maths
Tr.sign:-	Marks :- 25

Q1 . Identify second's minute's and hour's hand.

[3Marks]



Q2 Add the following numbers.

[5Marks]

$\begin{array}{r} 35 \\ + 14 \\ \hline \end{array}$	$\begin{array}{r} 42 \\ + 44 \\ \hline \end{array}$	$\begin{array}{r} 76 \\ + 23 \\ \hline \end{array}$	$\begin{array}{r} 50 \\ + 33 \\ \hline \end{array}$	$\begin{array}{r} 24 \\ + 65 \\ \hline \end{array}$

Q3 Write the correct time.

[5Marks]


**Q 4 Match the following with drawing line.**

[5Marks]

- |                       |            |
|-----------------------|------------|
| a) Days in a week     | 365 days   |
| b) Month in a year    | 07 days    |
| c) Days in a year     | 60 minutes |
| d) Hours in a day     | 12 months  |
| e) Minutes in an hour | 24 hours   |

**Q5 Fill in the blanks and complete the name of the month.**


[4Marks]

- a) S \_ \_ p t \_ \_ m b \_ \_ r
- b) M \_ \_ \_ c h
- c) S u \_ \_ d \_ \_ y
- d) F \_ \_ i d \_ \_ y


**Q6 Identify as given and colour them .**

[3Marks]

- a) Colour the shortest pumpkin .



- b) Colour the tallest tree in green



- c) Colour the picture that is thinnest.

