



पुनित International School

Shree Swaminarayan Gurukul, Zundal

PERIODIC ASSIGNMENT – 3 [2020-21]

Grade – 1

Sub- Maths

Name -

Ex 1. Match the following with drawing line.

- a) Days in a week → 12 month
b) Month in a year → 07 days
c) Days in a year → 60 minutes
d) Hours in a day → 365 days
e) Minutes in a hours → 24 hours







Ex 2. Fill in the blanks and complete the name of the month.

- a) F e b _ _ u _ _ r y
b) S _ _ p t _ _ m b _ _ r
c) M _ _ _ c h
d) O c _ _ _ b e _ _
e) J u _ _ y
f) _ _ u g _ _ s t


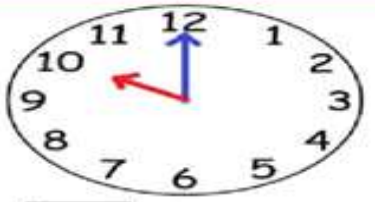
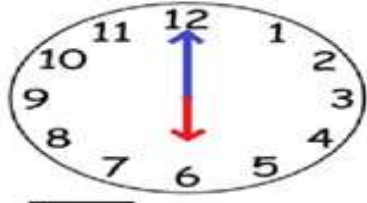
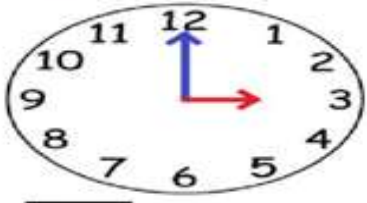

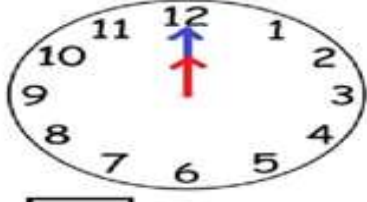
Ex 3. Write the name of the day that comes before and after.

- a) _____ Monday _____
b) _____ Thursday _____
c) _____ Saturday _____
d) _____ Sunday _____
e) _____ Wednesday _____
f) _____ Friday _____




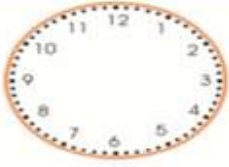
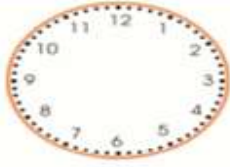




Ex 4 Compare the objects as given the instruction and circle the correct object.

 <p>which starfish is shorter</p>	 <p>which ball is bigger</p>
 <p>which shovel is longer</p>	 <p>which castle is smaller</p>
 <p>which crab is wider</p>	 <p>which seagull is lighter</p>

Ex 5 Identify the time

 <p><input type="text" value="5"/> o'clock</p>	 <p><input type="text" value="10"/> o'clock</p>
 <p><input type="text"/> o'clock</p>	 <p><input type="text"/> o'clock</p>
 <p><input type="text"/> o'clock</p>	 <p><input type="text"/> o'clock</p>

Ex 6 Draw the hands on the clock.

<p>1 a.</p>  <p>7:00</p>	<p>1 b.</p>  <p>6:00</p>	<p>1 c.</p>  <p>4:00</p>
<p>2 a.</p>  <p>9:00</p>	<p>2 b.</p>  <p>8:00</p>	<p>2 c.</p>  <p>3:00</p>
<p>3 a.</p>  <p>1:00</p>	<p>3 b.</p>  <p>12:00</p>	<p>3 c.</p>  <p>5:00</p>

Ex 7 . Add the following numbers.

$$\begin{array}{r} 35 \\ + 57 \\ \hline 92 \end{array}$$

$$\begin{array}{r} 31 \\ + 99 \\ \hline 130 \end{array}$$

$$\begin{array}{r} 34 \\ + 35 \\ \hline 69 \end{array}$$

$$\begin{array}{r} 89 \\ + 35 \\ \hline 124 \end{array}$$

$$\begin{array}{r} 20 \\ + 44 \\ \hline 64 \end{array}$$

$$\begin{array}{r} 65 \\ + 36 \\ \hline 101 \end{array}$$

$$\begin{array}{r} 25 \\ + 74 \\ \hline 99 \end{array}$$

$$\begin{array}{r} 20 \\ + 51 \\ \hline 71 \end{array}$$

$$\begin{array}{r} 73 \\ + 89 \\ \hline 162 \end{array}$$

$$\begin{array}{r} 62 \\ + 17 \\ \hline 79 \end{array}$$

$$\begin{array}{r} 69 \\ + 81 \\ \hline 150 \end{array}$$

$$\begin{array}{r} 49 \\ + 59 \\ \hline 108 \end{array}$$

$$\begin{array}{r} 39 \\ + 59 \\ \hline 98 \end{array}$$

$$\begin{array}{r} 81 \\ + 70 \\ \hline 151 \end{array}$$

$$\begin{array}{r} 14 \\ + 75 \\ \hline 89 \end{array}$$

$$\begin{array}{r} 16 \\ + 17 \\ \hline 33 \end{array}$$

$$\begin{array}{r} 39 \\ + 49 \\ \hline 88 \end{array}$$

$$\begin{array}{r} 54 \\ + 77 \\ \hline 131 \end{array}$$

$$\begin{array}{r} 91 \\ + 95 \\ \hline 186 \end{array}$$

$$\begin{array}{r} 32 \\ + 93 \\ \hline 125 \end{array}$$

Ex 8. Subtract the following numbers.

$$\begin{array}{r} 1) \quad 53 \\ - 21 \\ \hline 32 \end{array}$$

$$\begin{array}{r} 2) \quad 47 \\ - 27 \\ \hline 20 \end{array}$$

$$\begin{array}{r} 3) \quad 67 \\ - 42 \\ \hline 25 \end{array}$$

$$\begin{array}{r} 4) \quad 88 \\ - 7 \\ \hline 81 \end{array}$$

$$\begin{array}{r} 5) \quad 87 \\ - 35 \\ \hline 52 \end{array}$$

$$\begin{array}{r} 6) \quad 96 \\ - 75 \\ \hline 21 \end{array}$$

$$\begin{array}{r} 7) \quad 95 \\ - 23 \\ \hline 72 \end{array}$$

$$\begin{array}{r} 8) \quad 49 \\ - 39 \\ \hline 10 \end{array}$$

$$\begin{array}{r} 9) \quad 66 \\ - 12 \\ \hline 54 \end{array}$$

$$\begin{array}{r} 10) \quad 57 \\ - 36 \\ \hline 21 \end{array}$$

$$\begin{array}{r} 11) \quad 58 \\ - 53 \\ \hline 05 \end{array}$$

$$\begin{array}{r} 12) \quad 74 \\ - 21 \\ \hline 53 \end{array}$$

$$\begin{array}{r} 13) \quad 58 \\ - 34 \\ \hline 24 \end{array}$$

$$\begin{array}{r} 14) \quad 79 \\ - 16 \\ \hline 63 \end{array}$$

$$\begin{array}{r} 15) \quad 82 \\ - 71 \\ \hline 11 \end{array}$$

$$\begin{array}{r} 16) \quad 97 \\ - 24 \\ \hline 73 \end{array}$$

$$\begin{array}{r} 17) \quad 97 \\ - 6 \\ \hline 91 \end{array}$$

$$\begin{array}{r} 18) \quad 85 \\ - 42 \\ \hline 43 \end{array}$$

$$\begin{array}{r} 19) \quad 76 \\ - 26 \\ \hline 50 \end{array}$$

$$\begin{array}{r} 20) \quad 86 \\ - 32 \\ \hline 54 \end{array}$$

Ex 9 Identify clock's hands.

