



Purnata International School

Shree Swaminarayan Gurukul, Zundal

Assignment for Annual Examination- 2021-22

Grade – I













Subject- Math

Syllabus – Ch 6 ,7,8 ,9, 11 , 12 , 13

Ex-1 Arrange these numbers in ascending order .

23, 10, 13, 28 10 , 13 , 23 , 28	42, 69, 90, 29 29 , 42 , 69 , 90
55, 80, 15, 13 13 , 15 , 55 , 80	34, 55, 70, 83 34 , 55 , 70 , 83
67, 50, 40, 13 _____	90, 99, 88, 37 _____
3, 74, 16, 60 _____	10, 95, 34, 56 _____
19, 98, 20, 15 _____	99, 74, 11, 64 _____

Ex-2 Arrange these numbers indescending order .

 23 4 98 56	 98 56 23 4
 90 27 6 45	 90 45 27 6
 29 45 73 4	
 97 89 62 53	
 28 99 19 76	
 93 7 14 33	
 71 13 28 10	

Ex3 Two digit Addition with carry:

$$\begin{array}{r} 1 \\ 1) \quad 36 \\ + 25 \\ \hline 61 \end{array}$$

$$\begin{array}{r} 1 \\ 6) \quad 27 \\ + 38 \\ \hline 65 \end{array}$$

$$\begin{array}{r} 1 \\ 11) \quad 66 \\ + 24 \\ \hline 90 \end{array}$$

$$\begin{array}{r} 1 \\ 16) \quad 37 \\ + 28 \\ \hline 65 \end{array}$$

$$\begin{array}{r} 1 \\ 2) \quad 47 \\ + 23 \\ \hline 70 \end{array}$$

$$\begin{array}{r} 1 \\ 7) \quad 52 \\ + 29 \\ \hline 81 \end{array}$$

$$\begin{array}{r} 1 \\ 12) \quad 58 \\ + 26 \\ \hline 84 \end{array}$$

$$\begin{array}{r} 1 \\ 17) \quad 36 \\ + 46 \\ \hline 82 \end{array}$$

$$\begin{array}{r} 1 \\ 3) \quad 68 \\ + 4 \\ \hline 72 \end{array}$$

$$\begin{array}{r} 1 \\ 8) \quad 58 \\ + 7 \\ \hline 65 \end{array}$$

$$\begin{array}{r} 1 \\ 13) \quad 43 \\ + 19 \\ \hline 62 \end{array}$$

$$\begin{array}{r} 1 \\ 18) \quad 28 \\ + 59 \\ \hline 87 \end{array}$$

$$\begin{array}{r} 1 \\ 4) \quad 34 \\ + 17 \\ \hline 51 \end{array}$$

$$\begin{array}{r} 1 \\ 9) \quad 36 \\ + 25 \\ \hline 61 \end{array}$$

$$\begin{array}{r} 1 \\ 14) \quad 27 \\ + 8 \\ \hline 35 \end{array}$$

$$\begin{array}{r} 1 \\ 19) \quad 32 \\ + 48 \\ \hline 80 \end{array}$$

$$\begin{array}{r} 1 \\ 5) \quad 18 \\ + 35 \\ \hline 53 \end{array}$$

$$\begin{array}{r} 1 \\ 10) \quad 19 \\ + 37 \\ \hline 56 \end{array}$$

$$\begin{array}{r} 1 \\ 15) \quad 49 \\ + 23 \\ \hline 72 \end{array}$$

$$\begin{array}{r} 1 \\ 20) \quad 66 \\ + 27 \\ \hline 93 \end{array}$$

Ex 4 Subtraction:

a) $3 - 2 = \underline{\quad 1 \quad}$

g) $20 - 5 = \underline{\hspace{2cm}}$

b) $4 - 2 = \underline{\quad 2 \quad}$

h) $13 - 3 = \underline{\hspace{2cm}}$

c) $11 - 4 = \underline{\hspace{2cm}}$

i) $26 - 5 = \underline{\hspace{2cm}}$

d) $9 - 5 = \underline{\hspace{2cm}}$

j) $30 - 10 = \underline{\hspace{2cm}}$

e) $11 - 5 = \underline{\hspace{2cm}}$

k) $25 - 10 = \underline{\hspace{2cm}}$

f) $8 - 6 = \underline{\hspace{2cm}}$

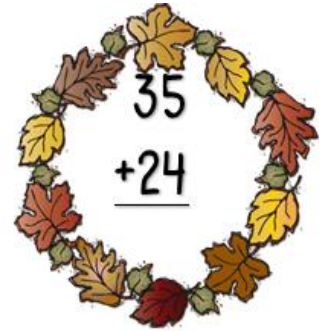
l) $15 - 10 = \underline{\hspace{2cm}}$

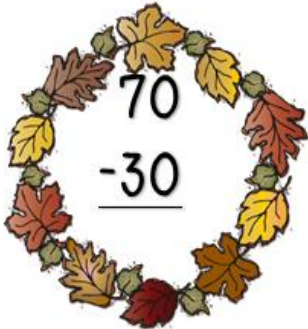
Ex5Solve the following by addition and subtraction .


$$\begin{array}{r} 35 \\ +24 \\ \hline \end{array}$$


$$\begin{array}{r} 62 \\ -20 \\ \hline \end{array}$$


$$\begin{array}{r} 54 \\ +33 \\ \hline \end{array}$$


$$\begin{array}{r} 35 \\ +24 \\ \hline \end{array}$$

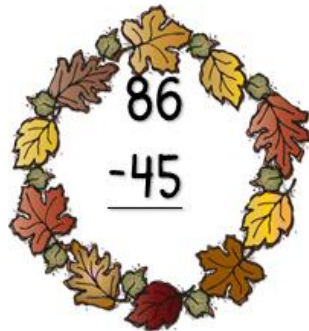

$$\begin{array}{r} 70 \\ -30 \\ \hline \end{array}$$

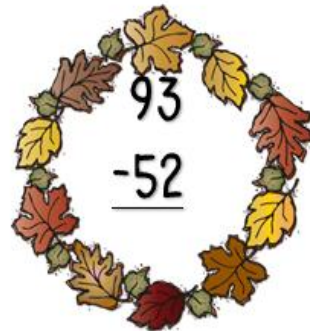

$$\begin{array}{r} 26 \\ -14 \\ \hline \end{array}$$



$$\begin{array}{r} 63 \\ +23 \\ \hline \end{array}$$


$$\begin{array}{r} 15 \\ +14 \\ \hline \end{array}$$


$$\begin{array}{r} 87 \\ +11 \\ \hline \end{array}$$


$$\begin{array}{r} 86 \\ -45 \\ \hline \end{array}$$


$$\begin{array}{r} 93 \\ -52 \\ \hline \end{array}$$


$$\begin{array}{r} 41 \\ +32 \\ \hline \end{array}$$


EX .6 Draw tally marks for counting of given objects.

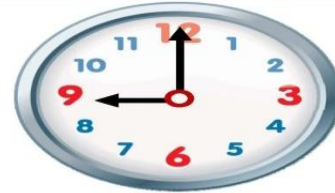
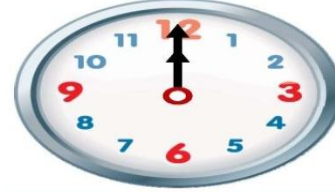
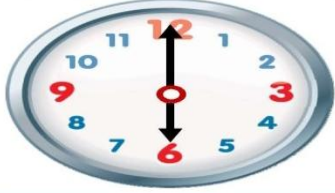
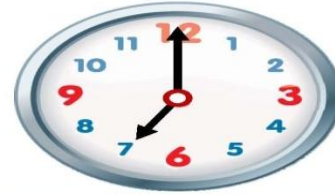
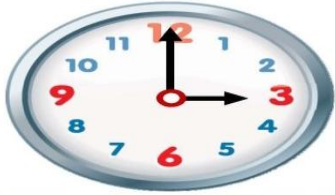
Ex 7 Multiply the following numbers.

$\begin{array}{r} 7 \\ \times 4 \\ \hline 28 \end{array}$	$\begin{array}{r} 4 \\ \times 2 \\ \hline 8 \end{array}$	$\begin{array}{r} 4 \\ \times 2 \\ \hline \end{array}$	$\begin{array}{r} 8 \\ \times 7 \\ \hline \end{array}$	$\begin{array}{r} 6 \\ \times 4 \\ \hline \end{array}$
$\begin{array}{r} 6 \\ \times 5 \\ \hline 30 \end{array}$	$\begin{array}{r} 9 \\ \times 2 \\ \hline 18 \end{array}$	$\begin{array}{r} 5 \\ \times 3 \\ \hline \end{array}$	$\begin{array}{r} 4 \\ \times 0 \\ \hline \end{array}$	$\begin{array}{r} 3 \\ \times 9 \\ \hline \end{array}$
$\begin{array}{r} 5 \\ \times 4 \\ \hline \end{array}$	$\begin{array}{r} 5 \\ \times 3 \\ \hline \end{array}$	$\begin{array}{r} 3 \\ \times 3 \\ \hline \end{array}$	$\begin{array}{r} 2 \\ \times 3 \\ \hline \end{array}$	$\begin{array}{r} 4 \\ \times 2 \\ \hline \end{array}$
$\begin{array}{r} 6 \\ \times 5 \\ \hline \end{array}$	$\begin{array}{r} 4 \\ \times 9 \\ \hline \end{array}$	$\begin{array}{r} 5 \\ \times 5 \\ \hline \end{array}$	$\begin{array}{r} 7 \\ \times 3 \\ \hline \end{array}$	$\begin{array}{r} 4 \\ \times 4 \\ \hline \end{array}$
$\begin{array}{r} 2 \\ \times 4 \\ \hline \end{array}$	$\begin{array}{r} 4 \\ \times 4 \\ \hline \end{array}$	$\begin{array}{r} 3 \\ \times 3 \\ \hline \end{array}$	$\begin{array}{r} 2 \\ \times 4 \\ \hline \end{array}$	$\begin{array}{r} 3 \\ \times 8 \\ \hline \end{array}$

Ex8. Add up the value of each set of the dice .

 = 11	 = 8
 = <input type="text"/>	 = <input type="text"/>
 = <input type="text"/>	 = <input type="text"/>
 = <input type="text"/>	 = <input type="text"/>
 = <input type="text"/>	 = <input type="text"/>

Ex 9 Write the time.



Ex 10. Learn Ordinal numbers .

- | | | |
|-----------------------------|------------------------------|-----------------------------|
| a) First - 1 st | e) Fifth - 5 th | i) Ninth - 9 th |
| b) Second - 2 nd | f) Sixth - 6 th | j) Tenth - 10 th |
| c) Third - 3 rd | g) Seventh - 7 th | |
| d) Fourth - 4 th | h) Eighth - 8 th | |

Ex 11 Learn Roman Number

- | | | |
|--------------|----------------|-------------|
| a. First-I | e. Fifth-V | |
| b. Second-II | f. Sixth-VI | i. Ninth-IX |
| c. Third-III | g. Seventh-VII | j. Tenth-X |
| d. Fourth-IV | h. Eighth-VIII | |

Ex 12 Make any combination of given coins and note for given values .



5 Rs




7 Rs



8 Rs



9 Rs



15 Rs



Ex13. Which day comes next?

