



पुर्णा International School

Shree Swaminarayan Gurukul, Zundal

PERIODIC ASSESSMENT – 1 2022 -23

Student's Name		Date			
Subject	Math	Grade	Sr.KG	Roll No.	

Q 1. Write missing numbers.

1 3 5 7 9 10

11 13 15 17 20

21 23 25 27 29 30

31 32 35 37 40

41 43 45 47 49 50

Q 2. Write the number names

1		11	
2		12	
3		13	
4		14	
5		15	
6		16	
7		17	
8		18	
9		19	
10		20	

Q 3. Write the after numbers.






14		4		8	
19		26		30	

25		7		13	
32		39		31	
49		44		18	
38		11		22	
1		16		3	
6		15		7	


Q 4. Write the between numbers.

17		19	13		15
14		16	11		13
18		20	12		14
16		18	15		17
10		11	19		21


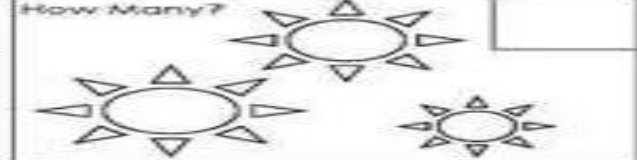
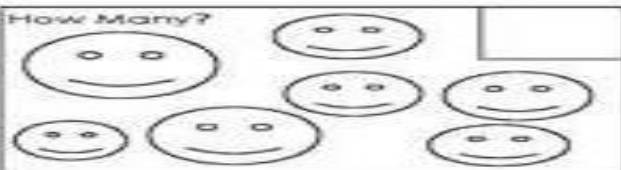


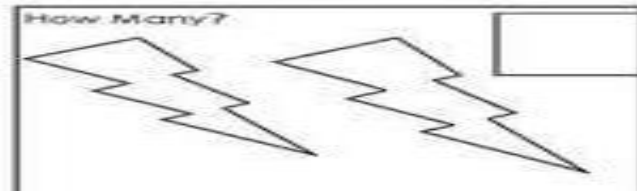
Q 5. Count and colour the same number of box.

	<table border="1"><tr><td></td><td></td><td></td><td></td><td></td></tr></table>					
	<table border="1"><tr><td></td><td></td><td></td><td></td><td></td></tr></table>					
	<table border="1"><tr><td></td><td></td><td></td><td></td><td></td></tr></table>					
	<table border="1"><tr><td></td><td></td><td></td><td></td><td></td></tr></table>					
	<table border="1"><tr><td></td><td></td><td></td><td></td><td></td></tr></table>					









Q 6. Circle the heavy one.




Q 7. Count the object and write the correct number in the box.

How Many? 	How Many? 
How Many? 	How Many? 
How Many? 	How Many? 

Q 8. Circle the big object in each box.

Q 9. Count the object and write its correct number with its name.

	7	seven
