



## SUMMATIVE ASSIGNMENT - II (2023-24)

STUDENT NAME			
SUBJECT	MATH	GRADE	I

### Q1. Fill in the blanks.

- Unit of liquid is LITRE
- 1 week = 7days
- Unit of Weight is GRAM
- Milk measured in litre
- 1 Minute = 60 seconds
- 1 rupee = 100 paisa
- 1year = 365 days
- The time between 12 midnight and 12 noon is called am.


### Q2. Write the number ( learn number names 1 to 100 )

- 20 \_\_\_\_\_
- 88 \_\_\_\_\_
- 75 \_\_\_\_\_
- 64 \_\_\_\_\_
- 90 \_\_\_\_\_
- 55 \_\_\_\_\_
- 100 \_\_\_\_\_


### Q 3. Identify the correct time




2 : 00



:




:







:



:



:



**Q 4. Subtract the following**

$\begin{array}{r} 7 \\ - 2 \\ \hline \end{array}$	$\begin{array}{r} 36 \\ - 30 \\ \hline \end{array}$	$\begin{array}{r} 28 \\ - 22 \\ \hline \end{array}$	$\begin{array}{r} 82 \\ - 61 \\ \hline \end{array}$	$\begin{array}{r} 49 \\ - 12 \\ \hline \end{array}$
$\begin{array}{r} 78 \\ - 53 \\ \hline \end{array}$	$\begin{array}{r} 43 \\ - 22 \\ \hline \end{array}$	$\begin{array}{r} 15 \\ - 10 \\ \hline \end{array}$	$\begin{array}{r} 46 \\ - 11 \\ \hline \end{array}$	$\begin{array}{r} 55 \\ - 55 \\ \hline \end{array}$

**Q 5. Write down the tally marks for given numbers**

<b>1</b>		<b>6</b>	
<b>2</b>		<b>7</b>	
<b>3</b>		<b>8</b>	
<b>4</b>		<b>9</b>	
<b>5</b>		<b>10</b>	

**Q 6. Count and write the correct value**

a. Rs 2+ Rs 5 + Rs5= \_\_\_\_\_

b. Rs10 + Rs 10 + Rs 2= \_\_\_\_\_

c. Rs 5+ Rs 2+ Rs 10= \_\_\_\_\_

d. Rs10 + Rs 10 + Rs 10= \_\_\_\_\_

e. Rs 2+ Rs 5 + Rs 20= \_\_\_\_\_

**Q 7. Write the following next day**

a. Tuesday --- Wednesday –Thursday \_\_\_\_\_

b. Saturday --- Sunday ---- monday\_\_\_\_\_

c. Monday --- Tuesday --- Wednesday -- \_\_\_\_\_

d. Thursday --- Friday --- Saturday --- \_\_\_\_\_

**Q 8. Answer the following question**

1 . Which month come after April ?

Ans . May

2 . How many months in a year ?

Ans . 12 months

3 . How many centimeters in 1 meter ?

Ans. 100 cm

4 . Write some units to measure weight ?

Ans . Cubit , hand span , pace

**Q9 . Write down the following which part of the day**



NIGHT



DAY

**Q10. Identify the given currency**



**Q11. Circle the smallest image**



