
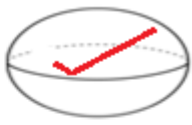

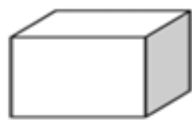




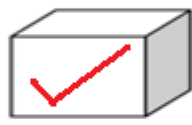

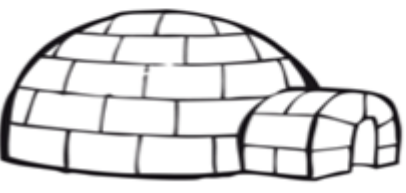








Ex1. Choose the correct option.

	ROLL		SLIDE		STACK	
	yes	<input checked="" type="radio"/> no	<input checked="" type="radio"/> yes	no	<input checked="" type="radio"/> yes	no
	<input checked="" type="radio"/> yes	no	<input checked="" type="radio"/> yes	no	<input checked="" type="radio"/> yes	no
	<input checked="" type="radio"/> yes	no	yes	<input checked="" type="radio"/> no	yes	<input checked="" type="radio"/> no
	yes	<input checked="" type="radio"/> no	<input checked="" type="radio"/> yes	no	<input checked="" type="radio"/> yes	no

Ex.2 Colour the picture as given instruction.

 <p>Does it ROLL?</p>	Color the shapes that can ROLL.    
 <p>Does it SLIDE?</p>	Color the shapes that can SLIDE.    
 <p>Does it STACK?</p>	Color the shapes that can STACK.    

Ex 3. Write the missing numbers.

a) 645 **646** 647

b) 378 **379** 380

c) 425 **426** 427

d) 333 **334** 335.

e) 556 **557** 558

f) 229 **230** 231

g) 109 **110** 111

h) 210 **211** 212.

i) 776 **777** 778

j) 99 **100** 101.

Ex4 . Put the correct signs (>, <, =) in the blanks.

a) 435 < 573.

b) 111 > 101.

c) 322 < 327

d) 443 = 443.

e) 223 < 322

d) 512 < 521

e) 152 > 145


f) 667 > 636.

g) 787 < 878

h) 909 < 990


Q4. Count the given objects?

a)



- 1) How many groups are there? 2
- 2) How many objects are there each groups? 6
- 3) Total number of objects ? 2 x 6 = 12

b)



- 1) how many groups are there ? 4
- 2) How many flowers are there each groups? 6
- 3) Total number of flowers? 4 x 6 = 24

Q5. Arrange given numbers in ascending order.

a) 29 , 45 , 19 , 33

Ans : 19 , 29 , 33 , 45

b) 65 , 98 , 32 , 75

Ans: 32 , 65 , 75 , 98

c) 43 , 65 , 52 , 32

Ans : _____

d) 67, 45, 87 , 26.

Ans : _____

e) 36 , 83 , 28 , 98 .

Ans: _____

Q5. Arrange given numbers in descending order.

a) 34 , 54 , 47 , 68

Ans : 68 , 54 , 47 , 34

b) 45 , 76 , 83 , 61

Ans : 83 , 76 , 61 , 45 ,

c) 47 , 56 , 30 , 69.

Ans : _____

d) 96 , 57, 87, 105.

Ans : _____

f) 24 , 44 , 59 , 99.

Ans : _____