
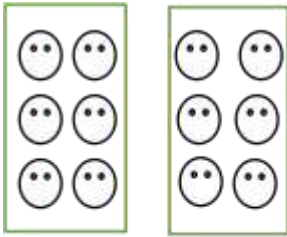



Q4. Count the given objects.

(6 MARKS)



- 1) How many groups are there? _____
- 2) How many smiley's are there each groups? _____
- 3) Total number of smileys? _____



- 1) How many groups are there? _____
- 2) How many flowers are there each groups? _____
- 3) Total number of flowers? _____

Q5. Arrange given numbers in ascending order.

(3MARKS)

A) 29 , 45 , 19 , 33

Ans : _____

B) 65 , 98 , 32 , 75

Ans: _____

C) 43 , 65 , 52 , 32

Ans : _____

Q5. Arrange given numbers in descending order.

(2marks)

a) 34 , 54 , 47 , 68

Ans : _____

b) 45 , 76 , 83 , 61

Ans : _____