



पुर्णिमा International School

Shree Swaminarayan Gurukul, Zundal

Class-I
Math-Magic

Ch-4

Year-2020-21





Chapter-4

Subtraction

Summary

1. Subtraction by picture
2. Single digit subtraction
3. Subtraction (Horizontal)
4. Fill in the blanks
5. Word problem
6. Activity

Subtraction by picture

	$\begin{array}{r} 5 \\ -2 \\ \hline \end{array}$
	$\begin{array}{r} 7 \\ -3 \\ \hline \end{array}$
	$\begin{array}{r} 3 \\ -1 \\ \hline \end{array}$
	$\begin{array}{r} 4 \\ -3 \\ \hline \end{array}$

Single digit subtraction

$$\begin{array}{r} 9 \\ -2 \\ \hline \end{array}$$

$$\begin{array}{r} 8 \\ -4 \\ \hline \end{array}$$

$$\begin{array}{r} 9 \\ -0 \\ \hline \end{array}$$

$$\begin{array}{r} 4 \\ -1 \\ \hline \end{array}$$

$$\begin{array}{r} 1 \\ -0 \\ \hline \end{array}$$

$$\begin{array}{r} 8 \\ -5 \\ \hline \end{array}$$

$$\begin{array}{r} 7 \\ -3 \\ \hline \end{array}$$

$$\begin{array}{r} 9 \\ -8 \\ \hline \end{array}$$

$$\begin{array}{r} 8 \\ -4 \\ \hline \end{array}$$

$$\begin{array}{r} 9 \\ -5 \\ \hline \end{array}$$

$$\begin{array}{r} 7 \\ -0 \\ \hline \end{array}$$

$$\begin{array}{r} 9 \\ -3 \\ \hline \end{array}$$

$$\begin{array}{r} 9 \\ -9 \\ \hline \end{array}$$

$$\begin{array}{r} 5 \\ -4 \\ \hline \end{array}$$

$$\begin{array}{r} 9 \\ -7 \\ \hline \end{array}$$

$$\begin{array}{r} 2 \\ -1 \\ \hline \end{array}$$

Subtraction (Horizontal)

$9 - 0 =$

$8 - 8 =$

$7 - 1 =$

$6 - 6 =$

$5 - 3 =$

$6 - 1 =$

$9 - 7 =$

$9 - 6 =$

$6 - 3 =$

$4 - 3 =$

$9 - 8 =$

$2 - 0 =$

Fill in the blanks

_____	+	2	=	9
8	-	0	=	_____
5	+	_____	=	7
3	-	2	=	_____
4	+	_____	=	9
7	+	0	=	_____
6	-	_____	=	4
_____	+	3	=	7
2	+	3	=	_____

Word problem

1. Sonia has 8 dolls. She gave 3 dolls to Neha. How many dolls are left with Sonia?

Ans. 8 Dolls

-- 3 Dolls

5 Left 5 Dolls left

2. Rohan has 7 pencils. He used 5 pencils. How many pencils are left with Rohan?

Ans. 7 Pencils

-- 5 Pencils

2 Left 2 Pencils left

3. Marry has 9 marbles. She lost 6 of them. How many marbles does she have now?

Ans. 9 Marbles

-- 6 Marbles

3 Left 3 Marbles left

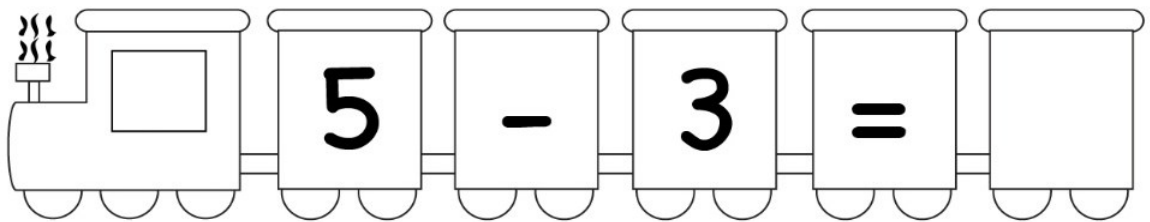
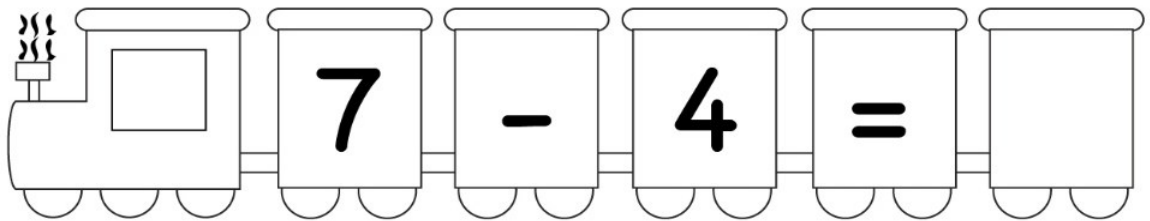
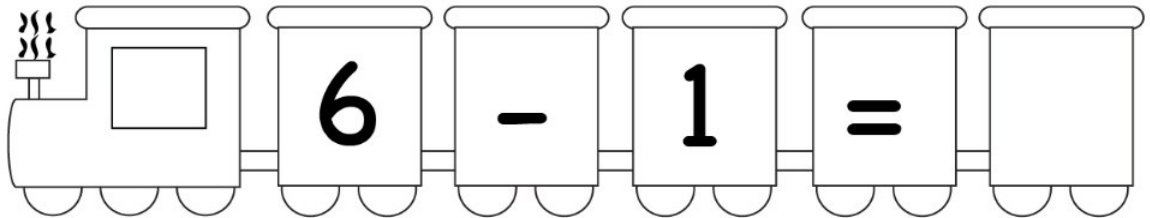
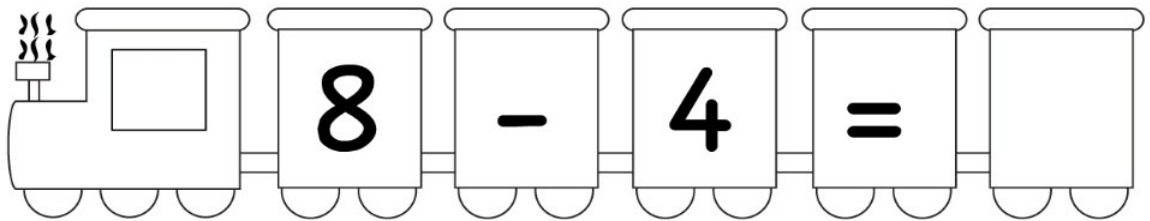
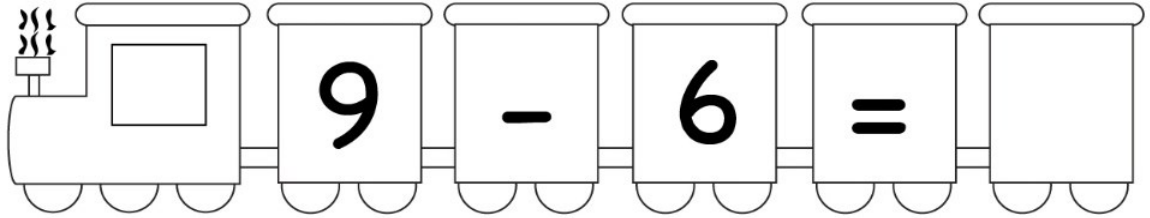
4. James's mom buy 4 apples. James and his sister ate 3 of them. How many apples are left?

Ans. 4 Apples

-- 3 Apples

1 Left 1 Apples left

Activity





पुर्णिमा International School

Shree Swaminarayan Gurukul, Zundal

Class-I
Math-Magic
Ch-5
Year-2020-21

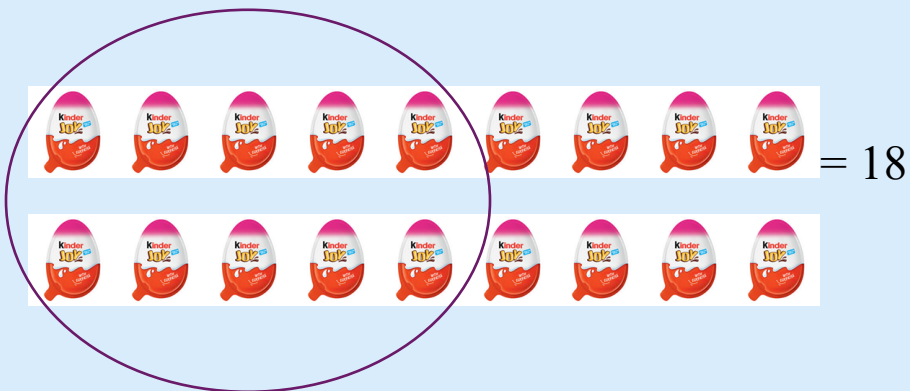
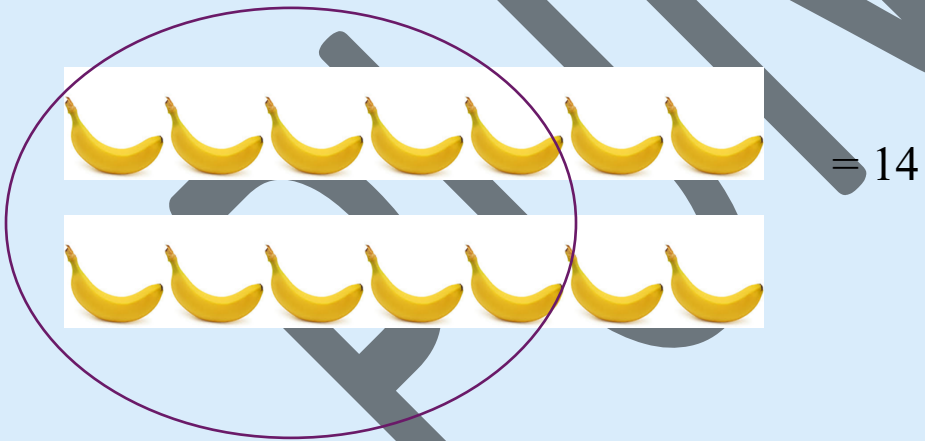
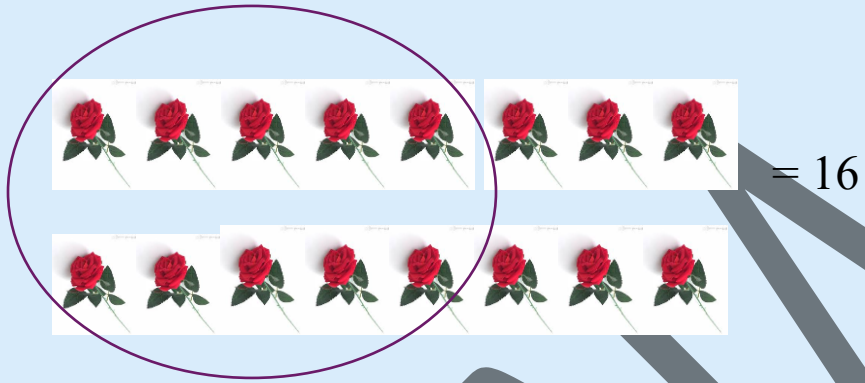
Chapter-5

Numbers from 10 to 20

Summary

1. Make the group of tens
2. Identify tens and ones
3. Write Number in expanded form
4. Circle the biggest number
5. Circle the smallest number
6. Compare the number with symbols $<$, $>$ and $=$
7. Activity

Make the group of tens




Identify tens and ones

35	=	3 Tens	+	5 Ones
27	=	2 Tens	+	7 Ones
52	=	5 Tens	+	2 Ones
20	=	2 Tens	+	0 Ones
49	=	4 Tens	+	9 Ones
11	=	1 Tens	+	1 Ones
24	=	2 Tens	+	4 Ones
17	=	1 Tens	+	7 Ones

Write Number in expanded form

	Tens	Ones						
I	2	3	=	20	+	3	=	23
	Tens	Ones						
II	3	6	=	30	+	6	=	36
	Tens	Ones						
III	4	4	=	40	+	4	=	44
	Tens	Ones						
IV	5	0	=	50	+	0	=	50
	Tens	Ones						
V	3	9	=	30	+	9	=	39
	Tens	Ones						
VI	1	8	=	10	+	8	=	18
	Tens	Ones						
VII	2	2	=	20	+	2	=	22
	Tens	Ones						
VIII	4	7	=	40	+	7	=	47

Circle the Biggest Number



15, 12,
35, 48

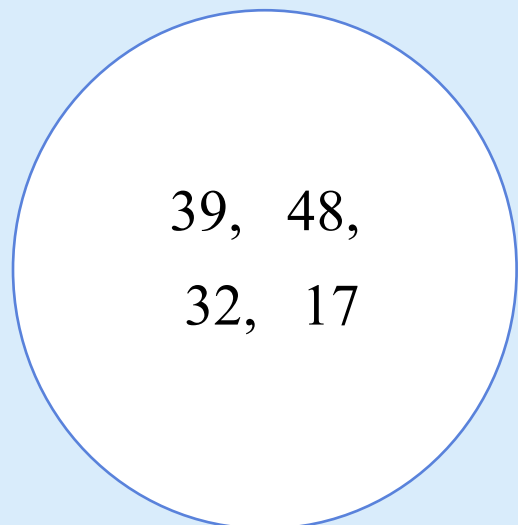
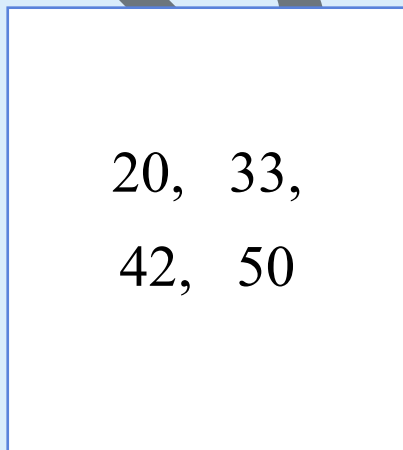
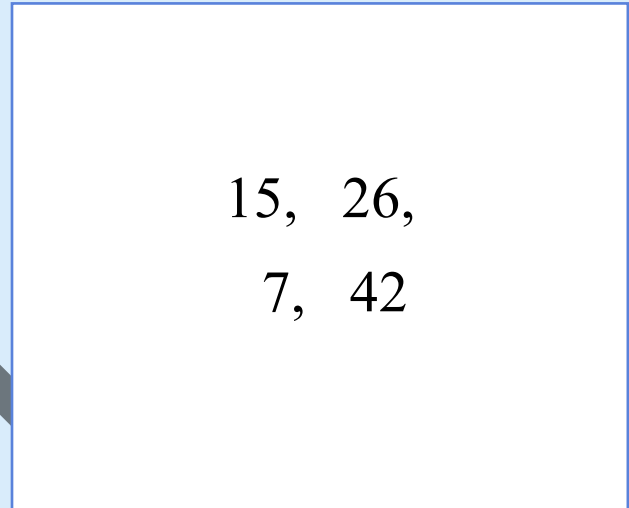
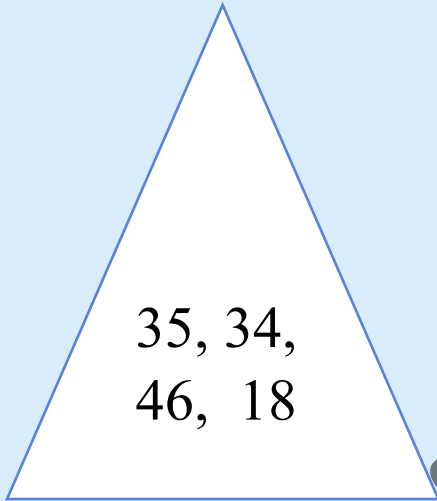
42, 44,
28, 36

22, 17,
41, 25

8, 7

4, 2

Circle the Smallest Number



Compare the number with symbols $<$, $>$ and $=$

76	$>$	54	76	$>$	73
61	$=$	61	40	$<$	42
58	$<$	85	12	$<$	21
80	$>$	77	25	$<$	34

Activity

- Circle the bigger number in each row

7	19	26	15
33	16	10	37
18	22	13	14
27	32	49	11