



PERIODIC ASSESSMENT -1 2020-21

Grade -1

Subject- MATHS

Syllabus – CH-1,2,3 FROM TEXTBOOK

Ex 1. Choose the correct option and fill in the blanks.

1.



The egg is in the nest.
(in, on, under)

2.



The girl is under the tree.
(in, on, under)

3.




A jug is on the table.
(in, on, under)

4.



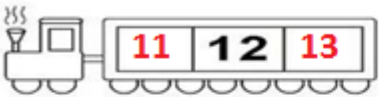
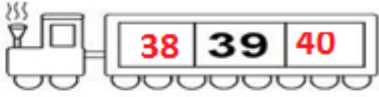
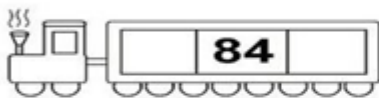


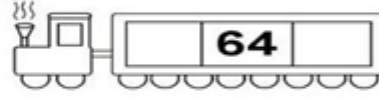
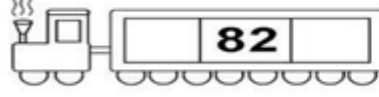
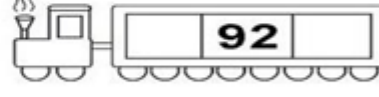
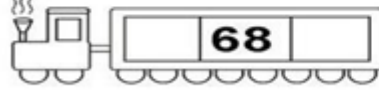

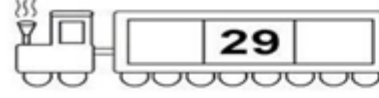



A bear is in the jungle.
(in, on, under)






Ex. 2 Add the numbers and colour the picture.



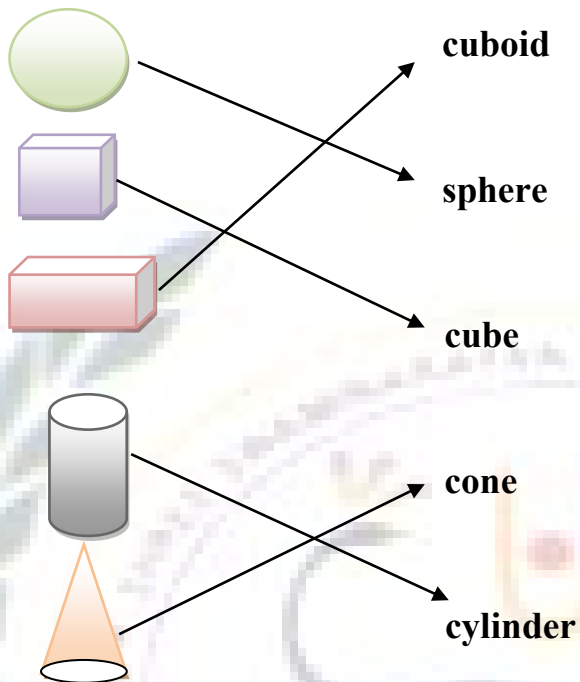
Ex. 3 Write the before and after number.

Ex. 4 Identify the shape and it's sides and corners.

	Name : Circle Sides: 0 Corners 0		Name : Oval Sides: 0 Corners 0
	Name : Rectangle Sides: 4 Corners 4		Name : Square Sides: 4 Corners 4
	Name : Triangle Sides: 3 Corners 3		

Ex.5 Match the following shapes with their names.



Ex .6 Write given numbers in words.

5 = Five

9 = Nine

12 = Twelve

20 = Twenty

55 = Fifty

62 = Sixty-two











79 = Seventy-two

31 = Thirty-one

Ex. 7 Write numbers 1 to 100.

1			4		6	7	8		10
	12	13		15		17		19	20
21		23	24		26		28		
31	32		34			37		39	40
		43			46		48		50
	52		54		56			59	60
61		63		65		67			70
	72		74		76		78	79	
81		83		85		87		89	90
91	92		94			97	98		100

EX. 8 Count the pictures and add.

	+		=	<input style="width: 50px; height: 30px;" type="text"/>
<input style="width: 50px; height: 30px;" type="text"/>		<input style="width: 50px; height: 30px;" type="text"/>		<input style="width: 50px; height: 30px;" type="text"/>
	+		=	<input style="width: 50px; height: 30px;" type="text"/>
<input style="width: 50px; height: 30px;" type="text"/>		<input style="width: 50px; height: 30px;" type="text"/>		<input style="width: 50px; height: 30px;" type="text"/>
	+		=	<input style="width: 50px; height: 30px;" type="text"/>
<input style="width: 50px; height: 30px;" type="text"/>		<input style="width: 50px; height: 30px;" type="text"/>		<input style="width: 50px; height: 30px;" type="text"/>
	+		=	<input style="width: 50px; height: 30px;" type="text"/>
<input style="width: 50px; height: 30px;" type="text"/>		<input style="width: 50px; height: 30px;" type="text"/>		<input style="width: 50px; height: 30px;" type="text"/>
	+		=	<input style="width: 50px; height: 30px;" type="text"/>
<input style="width: 50px; height: 30px;" type="text"/>		<input style="width: 50px; height: 30px;" type="text"/>		<input style="width: 50px; height: 30px;" type="text"/>