



Purnima International School

Shree Swaminarayan Gurukul, Zundal

Student Name				
Date	17/07/2020	Grade	I -	Roll no-
Subject	MATHS	Marks	25	Teacher's Sign


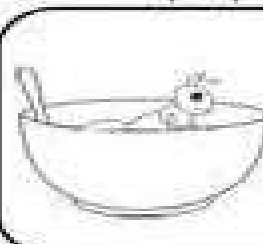

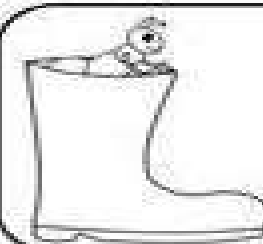
PERIODIC ASSESSMENT – I [2020-21]

GENERAL INSTRUCTION

1. All the Questions are Compulsory Questions.
2. All the Parts of Questions must be attempted at one Place

Q1. Find the position of “Ant” and tick (✓) the correct option .

[4marks]

 <input type="checkbox"/> in <input type="checkbox"/> on <input type="checkbox"/> under	 <input type="checkbox"/> in <input type="checkbox"/> on <input type="checkbox"/> under
 <input type="checkbox"/> in <input type="checkbox"/> on <input type="checkbox"/> under	 <input type="checkbox"/> in <input type="checkbox"/> on <input type="checkbox"/> under

Q2. Add the given numbers.

[8marks]

$\begin{array}{r} 5 \\ + 4 \\ \hline \end{array}$	$\begin{array}{r} 4 \\ + 3 \\ \hline \end{array}$	$\begin{array}{r} 2 \\ + 4 \\ \hline \end{array}$	$\begin{array}{r} 4 \\ + 4 \\ \hline \end{array}$
$\begin{array}{r} 8 \\ + 0 \\ \hline \end{array}$	$\begin{array}{r} 2 \\ + 2 \\ \hline \end{array}$	$\begin{array}{r} 5 \\ + 5 \\ \hline \end{array}$	$\begin{array}{r} 7 \\ + 2 \\ \hline \end{array}$

Q3. Find out the missing numbers.

[2marks]

a. . 25 , 26 , _____ , 28

b. . 9 , _____ , 11 , 12

c. . _____ , 40 , 41 , _____

Q4 . Write the before and after number.

[6marks]

7

45

64

57

36

74

Q5. Identify the shapes and write their names below.

[5marks]

