



पुर्ना International School

Shree Swaminarayan Gurukul, Zundal

SUMMATIVE ASSIGNMENT -2 2020-21

Grade – II

Subject- Math

Syllabus – Ch 8 , 9 , 11 , 12 , 13 , 14 , 15

Q1. Circle the even number.

- (a) 229, 546, 453, 357 (b) 462, 729, 519, 425
(c) 133, 533, 733, 350 (d) 626, 639, 647, 651
(e) 479, 658, 773, 695 (f) 343, 685, 157, 862
(g) 824, 655, 723, 855 (h) 501, 648, 553, 225
(i) 869, 862, 735, 509 (j) 890, 729, 541, 445

Q2. Circle the odd number.

- (a) 809, 702, 504, 404 (b) 992, 465, 544, 386
(c) 330, 339, 338, 306 (d) 266, 693, 484, 156
(e) 100, 480, 926, 605 (f) 501, 788, 854, 706
(g) 471, 624, 832, 998 (h) 786, 783, 114, 118
(i) 628, 830, 996, 207 (j) 806, 709, 506, 630

Q3. Fill in the blanks.

- a) The first day of the week is Monday.
- b) The fourth day of the week is Thursday.
- c) If yesterday was Friday then tomorrow will be Sunday.
- d) If today is Monday then tomorrow will be Tuesday.
- e) There are 12 months in a year.
- f) March is the third (3rd) month of a year.
- g) The 8th month of a year is August.
- h) October is the tenth (10th) month of the year.

- i) In leap year February has 29 days.
- j) How many months have 31 days? 7 months.
- k) The month which comes before December is November.
- l) The smallest month of a year is February.
- m) How many months have 30 days? 4 months.

Q4. Add the following numbers .

1)	$\begin{array}{r} \overset{1}{257} \\ + 136 \\ \hline 393 \end{array}$	2)	$\begin{array}{r} \overset{1}{409} \\ + 78 \\ \hline 487 \end{array}$	3)	$\begin{array}{r} \overset{1}{346} \\ + 225 \\ \hline 571 \end{array}$	4)	$\begin{array}{r} \overset{1}{326} \\ + 358 \\ \hline 684 \end{array}$
5)	$\begin{array}{r} \overset{1}{462} \\ + 153 \\ \hline 615 \end{array}$	6)	$\begin{array}{r} \overset{1}{371} \\ + 134 \\ \hline 505 \end{array}$	7)	$\begin{array}{r} \overset{1}{285} \\ + 143 \\ \hline 428 \end{array}$	8)	$\begin{array}{r} \overset{1}{470} \\ + 165 \\ \hline 635 \end{array}$
9)	$\begin{array}{r} \overset{1}{374} \\ + 243 \\ \hline 617 \end{array}$	10)	$\begin{array}{r} \overset{1}{583} \\ + 324 \\ \hline 907 \end{array}$	11)	$\begin{array}{r} \overset{1}{452} \\ + 186 \\ \hline 638 \end{array}$	12)	$\begin{array}{r} \overset{1}{376} \\ + 253 \\ \hline 629 \end{array}$
13)	$\begin{array}{r} \overset{1}{158} \\ + 135 \\ \hline 293 \end{array}$	14)	$\begin{array}{r} \overset{1}{326} \\ + 147 \\ \hline 473 \end{array}$	15)	$\begin{array}{r} 426 \\ + 132 \\ \hline 558 \end{array}$	16)	$\begin{array}{r} \overset{1}{463} \\ + 259 \\ \hline 722 \end{array}$
17)	$\begin{array}{r} \overset{1}{254} \\ + 163 \\ \hline 417 \end{array}$	18)	$\begin{array}{r} \overset{1}{367} \\ + 129 \\ \hline 496 \end{array}$	19)	$\begin{array}{r} \overset{1}{482} \\ + 356 \\ \hline 838 \end{array}$	20)	$\begin{array}{r} \overset{1}{277} \\ + 432 \\ \hline 709 \end{array}$

Q5. Subtraction with borrowing.

1)	$\begin{array}{r l l} & 7 & 12 \\ 4 & 8 & 2 \\ - & 2 & 4 & 8 \\ \hline & 2 & 3 & 4 \end{array}$	2)	$\begin{array}{r l l} & 5 & 12 \\ 2 & 6 & 2 \\ - & 1 & 1 & 7 \\ \hline & 1 & 4 & 5 \end{array}$	3)	$\begin{array}{r l l} & 4 & 13 \\ 4 & 5 & 3 \\ - & 2 & 3 & 4 \\ \hline & 2 & 1 & 9 \end{array}$
4)	$\begin{array}{r l l} & 3 & 15 \\ 5 & 4 & 5 \\ - & 1 & 3 & 8 \\ \hline & 4 & 0 & 7 \end{array}$	5)	$\begin{array}{r l l} & 8 & 12 \\ 8 & 9 & 2 \\ - & 1 & 5 & 7 \\ \hline & 7 & 3 & 5 \end{array}$	6)	$\begin{array}{r l l} & 0 & 13 \\ 5 & 1 & 3 \\ - & 4 & 0 & 9 \\ \hline & 1 & 0 & 4 \end{array}$
7)	$\begin{array}{r l l} & 5 & 13 \\ 2 & 6 & 3 \\ - & 1 & 2 & 6 \\ \hline & 1 & 3 & 7 \end{array}$	8)	$\begin{array}{r l l} & 7 & 13 \\ 7 & 8 & 3 \\ - & 3 & 5 & 9 \\ \hline & 4 & 2 & 4 \end{array}$	9)	$\begin{array}{r l l} & 6 & 12 \\ 5 & 7 & 2 \\ - & 2 & 5 & 5 \\ \hline & 3 & 1 & 7 \end{array}$

$$\begin{array}{r} 1) \quad 372 \\ - 155 \\ \hline 217 \end{array}$$

$$\begin{array}{r} 2) \quad 550 \\ - 235 \\ \hline 315 \end{array}$$

$$\begin{array}{r} 3) \quad 674 \\ - 556 \\ \hline 118 \end{array}$$

$$\begin{array}{r} 4) \quad 720 \\ - 106 \\ \hline 614 \end{array}$$

$$\begin{array}{r} 5) \quad 526 \\ - 118 \\ \hline 408 \end{array}$$

$$\begin{array}{r} 6) \quad 682 \\ - 436 \\ \hline 246 \end{array}$$

$$\begin{array}{r} 7) \quad 546 \\ - 329 \\ \hline 217 \end{array}$$

$$\begin{array}{r} 8) \quad 953 \\ - 615 \\ \hline 338 \end{array}$$

Q6. Write the expanded forms of the following numbers.

a) $221 = \underline{200 + 20 + 1}$

b) $962 = \underline{900 + 60 + 2}$

c) $849 = \underline{\hspace{2cm}}$

d) $686 = \underline{\hspace{2cm}}$

e) $395 = \underline{\hspace{2cm}}$

f) $321 = \underline{\hspace{2cm}}$

g) $284 = \underline{\hspace{2cm}}$

h) $473 = \underline{\hspace{2cm}}$







i) $789 = \underline{\hspace{2cm}}$

j) $435 = \underline{\hspace{2cm}}$

k) $137 = \underline{\hspace{2cm}}$

l) $227 = \underline{\hspace{2cm}}$

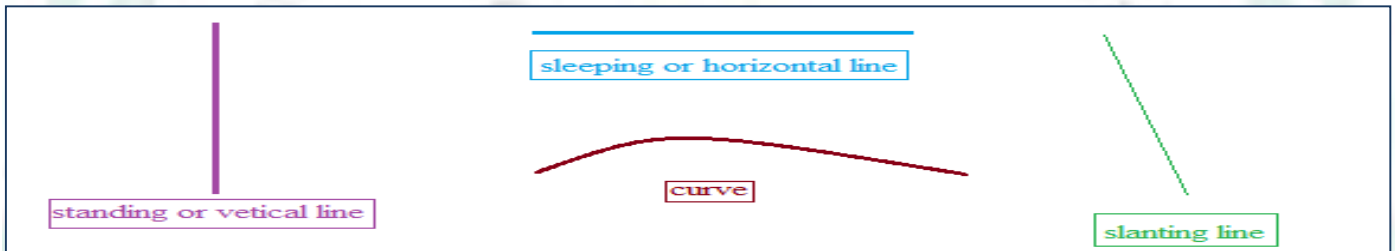
Q7. Circle the correct answer in each section.

	$\frac{2}{4}$	$\frac{1}{5}$	$\frac{1}{4}$
	$\frac{2}{5}$	$\frac{3}{4}$	$\frac{3}{5}$
	$\frac{2}{6}$	$\frac{3}{6}$	$\frac{4}{5}$
	$\frac{3}{4}$	$\frac{4}{5}$	$\frac{3}{5}$
	$\frac{5}{6}$	$\frac{6}{8}$	$\frac{5}{8}$
	$\frac{2}{6}$	$\frac{2}{5}$	$\frac{3}{6}$

Q8. Learn & Write the months of the year?

1	January	31 days
2	February	28 days (common year) 29 days (leap year*)
3	March	31 days
4	April	30 days
5	May	31 days
6	June	30 days
7	July	31 days
8	August	31 days
9	September	30 days
10	October	31 days
11	November	30 days
12	December	31 days






Q9. Draw different types of lines and name them.



Q10

Six children went to a zoo with their parents. There are 5 kinds of shows available in the zoo. Each child has a different choice and they choose the shows according to their choice. Help them identify their total expenditure.

 Lion show ₹ 350	 Crocodile show ₹ 450	 Dolphin show ₹ 190
 Bird show ₹ 210	 Elephant show ₹ 490	

 Samar	Lion show = ₹ 350 Bird show = ₹ 210 <hr/> Total = ₹ 560	a)  Rani	Crocodile show = _____ Dolphin show = _____ Total = _____
	b)  Amit		Dolphin show = _____ Elephant show = _____ Total = _____
 Rahul	d) Lion show = _____ Dolphin show = _____ Total = _____	e)  Mohit	Elephant show = _____ Bird show = _____ Total = _____

Q11 . Conversions.

a) $61 \text{ m} = \underline{6100} \text{ cm.}$

$1 \text{ m} = 100 \text{ cm.}$

$61 = 61 \times 100$

Ans = 6100 cm

b) $23 \text{ m} = \underline{2300} \text{ cm.}$

$1 \text{ m} = 100 \text{ cm.}$

$23 = 23 \times 100$

Ans = 2300 cm.

c) $48 \text{ m} = \underline{4800} \text{ cm.}$

$1 \text{ m} = 100 \text{ cm.}$

$48 = 48 \times 100$

Ans = 4800 cm.

d) $59 \text{ m} = \underline{5900} \text{ cm.}$

$1 \text{ m} = 100 \text{ cm.}$

$59 = 59 \times 100$

Ans = 5900 cm.

e) $44 \text{ m} = \underline{\hspace{2cm}} \text{ cm.}$

f) $14 \text{ m} = \underline{\hspace{2cm}} \text{ cm.}$

g) $36 \text{ m} = \underline{\hspace{2cm}} \text{ cm.}$

h) $53 \text{ m} = \underline{\hspace{2cm}} \text{ cm.}$

i) $92 \text{ m} = \underline{\hspace{2cm}} \text{ cm.}$

j) $77 \text{ m} = \underline{\hspace{2cm}} \text{ cm.}$

Q12. One digit multiplication.

a) $8 \times 6 = \underline{48}$

h) $7 \times 6 = \underline{42}$

b) $2 \times 6 = \underline{12}$

i) $6 \times 6 = \underline{36}$

c) $8 \times 4 = \underline{\hspace{2cm}}$

j) $9 \times 5 = \underline{\hspace{2cm}}$

d) $5 \times 2 = \underline{\quad}$

k) $7 \times 4 = \underline{\quad}$

e) $9 \times 6 = \underline{\quad}$

l) $9 \times 4 = \underline{\quad}$

f) $4 \times 4 = \underline{\quad}$

m) $8 \times 6 = \underline{\quad}$

Q13. Two digit multiplication.

$\begin{array}{r} 6 \\ 27 \\ \times 9 \\ \hline 243 \end{array}$	$\begin{array}{r} 20 \\ \times 8 \\ \hline 160 \end{array}$	$\begin{array}{r} 1 \\ 48 \\ \times 2 \\ \hline 96 \end{array}$	$\begin{array}{r} 1 \\ 23 \\ \times 4 \\ \hline 92 \end{array}$	$\begin{array}{r} 1 \\ 72 \\ \times 8 \\ \hline 576 \end{array}$
$\begin{array}{r} 2 \\ 58 \\ \times 3 \\ \hline 174 \end{array}$	$\begin{array}{r} 1 \\ 54 \\ \times 4 \\ \hline 216 \end{array}$	$\begin{array}{r} 6 \\ 48 \\ \times 8 \\ \hline 384 \end{array}$	$\begin{array}{r} 1 \\ 95 \\ \times 2 \\ \hline 190 \end{array}$	$\begin{array}{r} 1 \\ 28 \\ \times 2 \\ \hline 56 \end{array}$
$\begin{array}{r} 61 \\ \times 5 \\ \hline 305 \end{array}$	$\begin{array}{r} 1 \\ 93 \\ \times 6 \\ \hline 558 \end{array}$	$\begin{array}{r} 2 \\ 29 \\ \times 3 \\ \hline 87 \end{array}$	$\begin{array}{r} 1 \\ 44 \\ \times 2 \\ \hline 88 \end{array}$	$\begin{array}{r} 2 \\ 79 \\ \times 3 \\ \hline 237 \end{array}$

Q14. Answer the following questions.

a) A baker bakes 545 cupcakes in the morning and 384 cupcakes in the evening. How many cupcakes does the baker bake in all?

In the morning	545
In the evening	+ 384
Total number of cake baked	= 929

b) At a fair, Sonu sells balloons of Rs 237 on first day and balloons of Rs 121 on second day. How many balloons did he sell on both the days?

First day	Rs 237
Second day	+ Rs 121
Total balloons sold	= Rs 358

c) Vanu brought kurta for 344 rupees and his a pair of shoes for 425 rupees . How much money will he pay ?

Cost of kurta	Rs	344
Cost of shoes	+ Rs	425
Total money will pay	= Rs	769


d) Megha is 30 years old . Her mother is 57 year old. How many years older is Megha's mother ?


Mother's age		57
Megha's age	-	30
Difference of age	=	27

e) Madhu bought a table for Rs 85 . She gave Rs 100 note to shopkeeper. How much money did she get back ?


Money given to shopkeeper		100
Cost of table	-	85
Money she get back	=	15

Q15 Check and write whether these actions happen in the am. or pm.


AM
Mummy makes my tiffin.





I reach school.




My papa leaves for office.




I take dinner.



I brush my teeth before I sleep.



I play football in evening.








I exercise in the morning.

Q16. Identify different features of clock and fill in the blanks . (hour's hand , minute's hand , second's hand , minute lines , hour numbers)



Q17. This tally chart shows how many pair of shoes sold by Mindi on Sunday . Use the information from the tally chart and answer the question.

Items	Tally Marks
 Wedges	/ / /
 Sneakers	
 Flip Flops	/
 Boots	
 Dress Shoes	/ /

- 1) How many wedges were sold by Mindy? 21
- 2) Which was the most popular shoe type? Wedges
- 3) How many pairs of dress shoes did Mindy sell on Sunday? 17
- 4) How many pairs of shoes did she manage to sell in total? 59
- 5) Which type of foot wear was sold the least? Boots (3)