



Purnima International School

Shree Swaminarayan Gurukul, Zundal

SUMMATIVE ASSIGNMENT ASSIGNMENT – 2 [2021-22]

Grade – III

Sub- Computer

Syllabus – Ch- 5, 6,7,8

Q.1 Tick the correct answers: -

i. This tool is used to make freehand drawings.

- a. Paint tool b. Stamp tool c. Magic tool

ii. This tool is used to place stickers.

- a. Save tool b. Stamp tool c. Shapes tool

iii. This tool is used to give special effects to a drawing.

- a. Shape's tool b. Open tool c. Magic tool

iv. The shape of the turtle is a.

- a. square b. rectangle c. triangle

v. This tool is used to place stickers.

- a. Save tool b. Stamp tool Shapes tool

vi. The initial position of the turtle on the screen is called the

- a. Home position Centre position c. School position

vii. The FD command helps the turtle to move

- a. backward b. right c. forward

viii. We use the PRINT command to

- a. write text b. move the turtle c. hide the turtle

ix. We use this command to add numbers.

- a. PRODUCT b. QUOTIENT c. SUM

x. We multiply numbers using the PRODUCT command or this operator.

- a. / b. * c. +

xi. FD 20+ 40 moves the turtle forward by

- a. 40 steps b. 20 steps c. 60 steps

xii. BK 80 - 20 moves the turtle back by

- a. 40 steps b. 20 steps c. 60 steps

xiii. Which tool is used to draw a curved line?

- a. Magnifier tool b. Polygon tool c. Curve tool

xiv. Which action of the mouse is used to go back to the normal size of the zoomed in picture?

- a. Double- Click b. Click ✓ c. Right –click

xv. Which tool is used to type text?






- a. Curve tool b. Brush tool c. Text tool ✓

Q2. Fill in the blanks Choose the words in box.

Shapes, computer, drawing, triangle, open, stickers, paint, stamp, main screen, command window

- i. Tux Paint is a drawing program.
- ii. The paint tool is used to make free hand drawings.
- iii. The shapes tool is used to draw different shapes.
- iv. The stamp tool is used to place ready-made pictures on the drawing canvas.
- v. The language a computer understands is a computer language.
- vi. The turtle is a small triangle with a head and tail
- vii Main screen is the area where the area where the turtle moves.
- viii. Command window is the area where we type commands.
- ix. Ready-made pictures available under the Stamp tool are called stickers.
- x. The stamp tool is used to place ready-made pictures on the drawing canvas.
- v. The language a computer understands is a computer language.

Q.3 Match the columns: -

1. 	a. used to place stickers on the drawing canvas (3.)
2. 	b. used to draw different shapes. (4.)
3. 	c. used to open a saved drawing. (5.)
4. 	d. used to make freehand drawing. (2.)
5. 	e. used to close Tux paint. (1.)

Q.4 Write T for true or F for false: -

- i. The result of calculations in logo is displayed in Commander window. _____
- ii. PRINT "Hello will show the output as Hello. _____
- iii. PRINT FIRST [How are you?] will show the output as How. _____
- iv. FD 40 + 60 will move the turtle back by 100 steps. _____

v. LT QUOTIENT 30 3 will turn the turtle to _____
the left by 60 degrees.

Q.5 Write commands to: -

i. print the number 108.

PR 108

ii. print the first letter of the word
COMPUTER

PR 'C'

iii. print the first letter of the sentence
I AM FINE.

PR FIRST LETTER 'I'

iv. add two numbers using both the SUM
command and the + operator.

2+2= 4

vii. to make the turtle turn 90 degree to the
left using the / operator.

180 by 2

viii. to make the turtul turns 45 degrees to
right using the * operator.

5 * 8

ool. Q.6 Fill in the blanks to complete the steps to use Brushes t

- i. Click on the down arrow of the brushes tool.
- ii. Select a brush style.
- iii. Click on colour 1 to select a color.
- iv. Click in the drawing area and drag the mouse to make your drawing.

Q.7 Answer the following questions.

i. What is the Curve tool used to draw?

Ans: - **We use Curve tool to draw a curved line.**

ii. Write the steps to use the Colour picker tool?

Ans: - **a. Click on the Color picker tool.**

b. Click on the color in the picture that you want to use.

c. Click on the part of the picture that you want to color.

iii. What is a text box?

Ans: - **A text box is to write in the drawing area.**

iv. Name any three tools used in MS paint .

Ans:- **i. Brush tool ii. Polygon tool iii. Curve tool**

v. Name some tools used in Tux paint.

Ans:- **Paint tool, Open tool, Save tool , Stamp tool, Magic tool, Quit tool.**

Q.8 Draw the picture of parts of computer and colour it.

i. Monitor ii. Keyboard iii. Mouse

iv. CPU v. Microphone vi. Printer



