



PUNJ International School

Shree Swaminarayan Gurukul, Zundal

SUMMATIVE ASSIGNMENT 2 (2022-23)

Grade – 6

Subject-SCIENCE

Syllabus – CH-9,10,11,12,13,14,15,16

TOTAL -60 MARKS PAPER

Q 1. M.C.Q -5 MARKS

Q-2 FILL IN THE BLANKS -5 MARKS

Q-3 TRUE AND FALSE – 5 MARKS

Q-4 MATCH THE FOLLOWING -5 MARKS

Q-5 ANSWER FOLLOWING QUESTION IN SHORT 18 MARKS

Q-6 ANSWER FOLLOWING QUESTION IN BRIEF 12 MARKS

Q-7 ANSWER FOLLOWING QUESTION IN DETAIL 10 MARKS

MULTIPLE CHOICE QUESTIONS :-

- Animals and plants have certain features which make them to survive in a particular habitat. This is called
(a) **adaptation** (b) speciation (c) specialisation (d) evolution
- Which is a biotic component of environment?
(a) Plants (b) Animals (c) Microorganisms (d) **All of these**
- What is the SI unit of length?
(a) **Meter** (b) Centimetre (c) Kilometre (d) All of these
- An example of rectilinear motion is
(a) apple falling from a tree (b) motion of a car on road
(c) a spinning top (d) **both (a) and (b)**
- What kind of motion is executed by a pendulum of a wall clock?
(a) **Oscillatory motion** (b) Vibratory motion (c) Circular motion (d) Linear motion
- Light travels in
(a) **straight line** (b) curved line (c) zig-zag line (d) randomly
- Which is an example of a translucent object?
(a) **A thin sheet of paper** (b) A thin glass slab (c) A thin iron sheet (d) All of these
- Filament of a bulb is made up of
(a) aluminium (b) chromium (c) platinum (d) **tungsten**
- To prevent electric shocks, the metallic electrical wires are covered with
(a) paper (b) cotton (c) aluminium (d) **plastic**
- Which is a natural magnet?
(a) **Magnetite** (b) Haemetite (c) Bakelite (d) Copper
- The magnetic properties of a magnet cannot be destroyed by
(a) hammering (b) heating (c) dropping on a hard surface (d) **boiling**
- Which is a result of condensation of water vapours?
(a) Rain (b) Snowfall (c) Hail (d) **Tiny water droplets**
- Boiling point of water is
(a) **100°C** (b) 101°C (c) 99°C (d) 102°C
- Major part of the air is constituted by
(a) **nitrogen** (b) oxygen (c) carbon dioxide (d) inert gases
- Envelope of air that surrounds the earth is known as
(a) biosphere (b) **atmosphere** (c) environment (d) ecosystem

16. Which of the following can be recycled?
 (a) **Waste paper** (b) Leather shoes (c) Animal waste (d) Kitchen waste
17. Out of these, which one is a non-biodegradable waste?
 (a) Paper (b) Faecal matter (c) **Aluminium foil** (d) Cotton
18. Rotting is carried out by
 (a) **microbes** (b) insects (c) ants (d) amoeba
19. Closed and continuous path of electric current is called
 (a) Resistance (b) **Circuit** (c) Connector (d) Insulator
20. Which of the following will not form circular shadow
 (a) A circular disk (b) **Shoe box** (c) Ice-cream cone (d) A ball
21. Shadow is formed by
 (a) Transparent object (b) Translucent object (c) **Opaque object** (d). All of these.
22. Which of the following is a biotic components
 (a) Water (b) Air (c) **Decomposer** (d) Soil
23. Xerophytes are plants which are found in
 (a) **Deserts** (b) Sea (c) Ponds (d) Marshes
24. Plants release large amount of water vapour into the atmosphere by the process called
 (a) evaporation (b) condensation (c) precipitation (d) **transpiration**
25. Which is not a property of air?
 (a) It occupies space. (b) It is transparent (c) It is a solution. (d) **It is a compound.**

□ **Fill in the blanks.**

1. Saline water, hot air and sand are **Abiotic** components of a habitat.
2. The habitat of plants and animals that live in **Water** is called the aquatic habitat.
3. **Adaptations** enable a plant or an animal to live in its surroundings.
4. Plants and animals that live on land are said to live in **Terrestrial** habitats.
5. The presence of specific features, which enable a plant or animal to live in a particular habitat, is called **adaptation**.
6. The habitats of the plants or animals that live on land are called **terrestrial** habitat.
7. The habitats of plants and animals that live in water are called **aquatic** habitat
8. Soil, water and air are the **abiotic** factors of a habitat.
9. Changes in our surrounding that make us responds to them are called **stimuli**.
10. Motion of an object or a part of it around a fixed point is known as **circular** motion.
11. A body repeating its motion after certain interval of time is in **periodic** motion.
12. In rectilinear motion, object moves **along a straight** line.
13. SI unit of length is **metre**.
14. **Transparent** object do not caste any shadow.
15. Shadows give us information about the **Shape** of the object.
16. A device that is used to break an electric circuit is called **switch**.
17. An electric cell has **two** terminals.
18. When a bar magnet is broken; each of the broken part will have **two** pole/poles.
19. In a bar magnet, magnetic attraction is **more** near its ends.
20. The materials which are attracted towards a magnet are called **magnetic materials**.
21. Paper is not a **magnetic** material.
22. In olden days, sailors used to find direction by suspending a piece of **magnet**.

23. A magnet always has **two** poles.
 24. The oxygen helps in breaking down the digested food in the body to release the **energy**.
 25. **Water** is the basis of life.

Mark 'True' or 'False' for following statements:

1. The process of condensation is opposite to evaporation. [T]
2. Condensation near the surface of earth results in fog. [T]
3. Air is an opaque material. [F]
4. Electric current can flow through metals.[T]
5. Instead of metal wires, a jute string can be used to make a circuit.[F]
6. Electric current can pass through a sheet of thermocol.[F]
7. A cylindrical magnet has only one pole. [F]
8. Artificial magnets were discovered in Greece. [F]
9. Similar poles of a magnet repel each other. [T]
10. Maximum iron filings stick in the middle of a bar magnet when it is brought near them. [F]
11. Bar magnets always point towards North-South direction.[T]
12. A compass can be used to find East-West direction at any place.[F]
13. Rubber is a magnetic material. [F]
14. Air becomes thinner and thinner as we go higher and higher from the surface of earth. [T]
15. Plants produce oxygen through photosynthesis. [T]

Match the following

1.

Column A	Column B
a. Octopus	i. Polar regions
b. Hydrilla	ii. Forest
c. Cactus	iii. Sea
d. Tiger	iv. Desert
e. Arctic fox	v. Ponds

Ans (a) (iii); (b) (v); (c) (iv); (d) (ii); (e) (i)

2.

Column A	Column B
a. Length of a rod	i. Vernier calipers
b. Mass of an object	ii. Litre
c. Small thickness	iii. Kilogram
d. Area of surface is measured in	iv. Square metre
e. Amount of liquids is measured in	v. metre

Ans (a) – (v), (b) – (iii), (c) – (i), (d) – (iv), (e) – (ii).

3.

Column A	Column B
a. Moon	i. Translucent
b. Sun	ii. Opaque
c. Brick	iii. Reflecting surface
d. Mirror	iv. Luminous
e. Tracing paper	v. Non-luminous

Ans (a) – (v), (b) – (iv), (c) – (ii), (d) – (iii), (e) – (i).

4.

Column A	Column B
(a) Magnet attracts	(i) rests along a particular direction
(b) Magnet can be repelled	(ii) iron
(c) Magnet if suspended freely	(iii) by another magnet
(d) Poles of the magnet can be identified by	(iv) iron fillings

Ans. (a) ii, (b) iii, (c) i, (d) iii and iv

5.

Column A	Column B
a. Respiration	i. feeds nearly all others water sources
b. Nitrogen	ii. Thin layer of air surrounding our earth.
c. Atmosphere	iii. Interconversion of water in various forms
d. Water cycle	iv. Makes three fourth part of total air
e. Drought	v. Is process of burning of food to get energy

Ans (a) – (v), (b) – (iv), (c) – (ii), (d) – (iii), (e) – (i).

SHORT QUESTION:-

1. **Classify the following habitats into terrestrial and aquatic types. Grassland, Pond, Ocean, Rice field**

Ans. Terrestrial habitats - grassland, rice field. Aquatic habitats - pond, ocean.

2. **Why is reproduction important for organisms?**

Ans. Reproduction is necessary for organisms because it is the mode of producing offspring of their own kind to maintain the continuity of species carrying hereditary characters to next generation.

3. **Why do desert snakes burrow deep into the sand during the day?**

Ans. The upper layers of the sand become hot during the daytime. So, it becomes hard for those animals to survive. They bury deep inside the sand because deeper layers of sand are cooler than the upper layers that saves them from heat of the desert during the day.

4. **While travelling in a train, it appears that the trees near the track are moving whereas co-passengers appear to be stationary. Explain the reason.**

Ans. When we see the trees from a moving train they appear to move because their position is changing with respect to us. Whereas the position of co-passengers is not changing with respect to us and hence appears to be stationary.

5. **How are the motions of a wheel of a moving bicycle and a mark on the blade of a moving electric fan different? Explain.**

Ans. The wheel of a moving bicycle represents a circular as well as a rectilinear motion whereas a mark on the blade of a moving electric fan represents a circular motion only.

6. **Why can a pace or footstep not be used as a standard unit of length?**

Answer: We cannot use pace or a footstep as standard unit of length as the size of foot and the footstep will not be the same for every individual. Thus, the measurement will not be same for different people.

7. **How do the areas covered with concrete affect the availability of ground water?**

Ans. Areas covered with concrete reduce the seepage of rain water into the ground. As water from concrete area flows into the drains thereby reducing the availability of ground water.

8. When does a drought occur?

Ans: If it does not rain for one or two years, the soil continues to lose water by evaporation and transpiration. Since, it is not being brought back by rain, the soil becomes dry. The level of water in ponds and wells of the region goes down and some of them may even dry up. The ground water may also become scarce. This may lead to drought.

9. How will you show that air is dissolved in water?

Ans : When a tumbler containing water is heated, tiny bubbles appear on the inner side. These bubbles appear before the water starts boiling. So, these must be air bubbles. This shows that water contains air.

10. Why does a lump of cotton wool shrink in water?

Ans: A lump of cotton wool shrinks in water because the air inside wool cotton is driven out by water. The layers stick together and hence lump shrinks.

11. In which of the following circuits A, B and C given in Fig. 12.4, the cell will be used up very rapidly?




Fig. 12.4

Ans. In arrangement A, the cell will be used up very rapidly.

12. Fig. 12.5 shows a bulb with its different parts marked as 1, 2, 3, 4 and 5. Which of them



Fig. 12.5

label the terminals of the bulb?

Ans. Labels 3 and 4 mark the terminals of the bulb.

13. Why should an electrician use rubber gloves while repairing an electric switch at your home?

Answer: The rubber gloves are insulators. This saves the electrician from getting an electric shock. That is why an electrician uses rubber gloves, while repairing an electric switch.

14. The handles of the tools like screwdrivers and pliers used by electrician for repair work usually have plastic or rubber covers on them. Can you explain why?

Answer: Plastic and rubber, both are bad conductors of electricity. Hence they protect against electric shock.

15. How would you test whether 'tea dust' is adulterated with iron powder or not.

Ans. This can be detected using a magnet. Iron being a magnetic material will get attracted to the magnet and hence will prove the adulteration of the tea dust.

16. Boojho dipped a bar magnet in a heap of iron filings and pulled it out. He found that iron filings got stuck to the magnet as shown in Fig. 13.4.



Fig. 13.4

- (i) Which regions of the magnet have more iron filings sticking to it?
(ii) What are these regions called?**

Ans. (i) Both the ends of the magnet has more iron fillings attached to it.
(ii) These regions are called poles of the magnet.

17. Write any two properties of a magnet.

Answer: Properties of magnet:

- (a) Attracts object made of iron, nickel or cobalt.
(b) freely suspended magnet always directs north-south direction. Where are poles of a bar magnet located? Answer: Poles of a bar magnet located at its two ends.

18. A bar magnet has no markings to indicate its poles. How would you find out near which end is its north pole located?

Answer: To locate its north pole, we would do the following steps:

- (i) A bar is taken and suspended freely from the middle with the help of thread.
(ii) Allow the magnet to come into rest.
(iii) The North pole of the magnet will face the north direction and South pole will face the south direction.
(iv) Mark the north pole of the magnet with the marker.

19. Write the similarities and differences between the motion of a bicycle and ceiling fan that has been switched on.

Answer: Similarities: - Wheel of a bicycle and ceiling fan both shows circular motion.

Differences: - Cycle moves in rectilinear motion but ceiling fan does not move in rectilinear motion.

20. Give two examples of periodic motion.

Answer: Example of periodic motion-

- (i) Pendulum
(ii) Child on the swing.

LONG ANSWER QUESTIONS

1. What are the adaptive features of a lion that helps it in hunting?

Ans. Adaptations of lion which helps it to easily catch its prey are as follows:

The colour of its body and mane is brown which helps it to hide amongst bushes and open area thereby avoid detection by its prey.

Eyes placed in front allow it to know the exact location and movements of its prey.

Powerful paws and long claws enable it to catch and kill the prey.

Its active approach to catch its prey through neck and inserting its front canine teeth on it.

2. Explain, why speed is important for survival in the grasslands for animals that live there. (Hint: There are few trees or places for animals to hide in grasslands habitats)

Answer: In grasslands, mainly grasses are found. Trees are very few in number. Predators such as lion, tiger, etc. that feed upon other animals are commonly found in these regions. It is very easy for these predators to locate their prey in the grass. Therefore, to protect themselves from these predators, animals adapt themselves by increasing their speed. The increased speed of the animal helps the weaker animals to escape their predator, thereby protecting themselves and increasing the chances of their survival.

3. **Like many animals although a car also moves it is not considered as a living organism. Give 2-3 reasons.**

Ans. Both living organisms and car move but the difference is that living organisms move on their own as they have life. But car is a non-living thing which is operated by an individual. It requires fossil fuel to move. Another reason that proves that car is not a living thing is the absence of life processes like respiration, reproduction, excretion, ingestion, growth etc which are the characteristics of living things.

4. **What are the adaptive features of a lion that help it in hunting?**

Ans. Adaptations of lion which help it to easily catch its prey are as follows:

- The colour of its body and mane is brown which helps it to hide amongst bushes and open areas thereby avoid detection by its prey.
- Eyes placed in front allow it to know the exact location and movements of its prey.
- Powerful paws and long claws enable it to catch and kill the prey.
- Its active approach to catch its prey through neck and inserting its front canine teeth on it.

5. **A football match is being played at night in a stadium with flood lights ON. You can see the shadow of a football kept at the ground but cannot see its shadow when it is kicked high in the air. Explain.**

Ans. We can see the shadow of football lying on the ground because the ground acts as a screen or it. But when the football is kicked high, the ground which is acting as a screen gets away from the football hence no shadow of the football will be formed on the ground.

6. **A student had a ball, a screen and a torch in working condition. He tried to form a shadow of the ball on the screen by placing them at different positions. Sometimes the shadow was not obtained. Explain.**

Ans. (i) Maybe the screen where the image will be formed is away from the ball.
(ii) The beam of light from the torch is falling parallel to the screen on the ball.
(iii) Maybe the torch is kept away from the ball.

7. **A sheet of plywood, a piece of muslin cloth and that of a transparent glass, all of the same size and shape were placed at A one by one in the arrangement shown in Fig. 11.12. Will the shadow be formed in each case. If yes, how will the shadow on the screen be different in each case? Give reasons for your answer.**



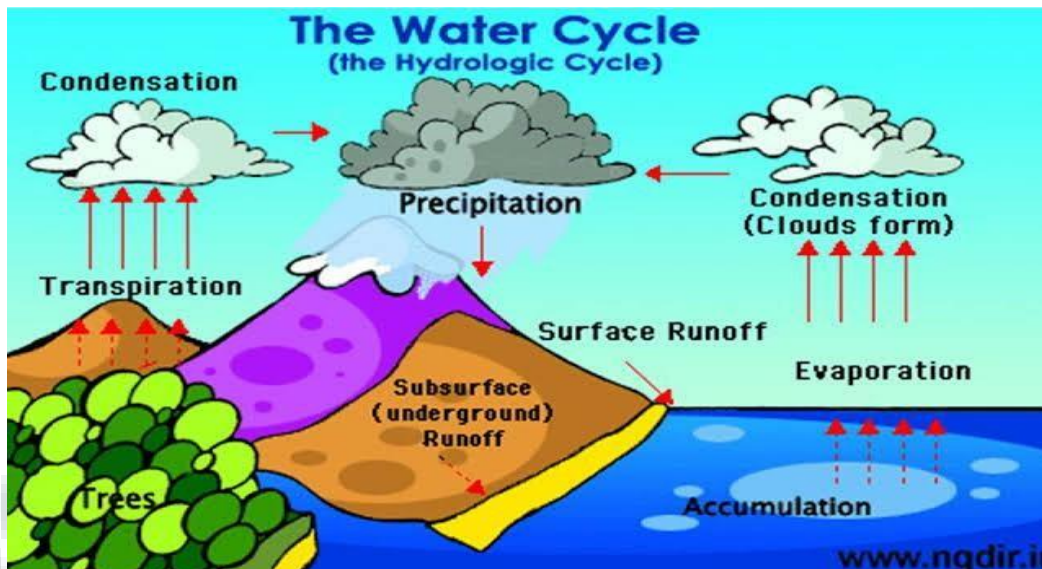
Fig. 11.12

Ans. The sheet of plywood is an opaque object and will form a dark patched shadow on the screen because it completely obstructs the path of light.

Whereas the piece of muslin cloth is a translucent object and will form a lighter shadow because it allows light to pass through it partially.

The transparent glass will allow the ray of light to pass through it and hence does not form any shadow.

8. Draw a diagram to show how sea water reaches a lake or pond.



9. Three students measured the length of a corridor and reported their measurements. The values of their measurements were different. What could be the reason for difference in their measurements? (Mention any three)

Ans. Difference in their measurements could be due to following reasons:

They may have used different measuring devices.


The device used by three of them may have different least measurable length.

It is possible that the end of the corridor may not be accessible to measure.

The devices used for measuring may be faulty or not properly standardized.

10. Boojho has a cell and a single piece of connecting wire. Without cutting the wire in two, will he be able to make the bulb glow? Explain with the help of a circuit diagram.

Ans. As shown in the diagram, the base of the light bulb connects to the positive terminal of the cell and the wire extends from the ribbed sides of the light bulb down to the negative terminal of the cell. A complete conducting loop is made with the light bulb being part of the loop. A circuit exists and



charge flows along the complete conducting path and the bulb starts lighting.

11. Fig. 12.10 A and B, show a bulb connected to a cell in two different ways.

i. What will be the direction of the current through the bulb in both the cases. (Q to P or P to Q)

ii. Will the bulb glow in both the cases?

iii. Does the brightness of the glowing bulb depend on the direction of current through it?

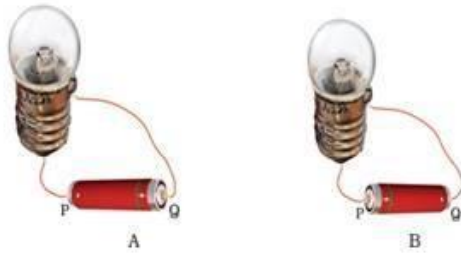


Fig. 12.10

Ans. (i) In case of Fig. 1 current flowing will be from Q to P, whereas in case of Fig 2 current flowing will be from P to Q , as current always flow from positive to the negative terminal of the electric cell.

(ii) Yes , because circuit is completed in both the cases.

(iii) No.

12. A bar magnet is cut into two pieces A and B, from the middle, as shown in Fig. 13.8.



Fig. 13.8

Will the two pieces act as individual magnets? Mark the poles of these two pieces.

Suggest an activity to verify your answer.

Ans. Yes, The two pieces behave as separate magnets.



Fig. 13.8

This can be proved by doing the test for repulsion. If we bring the north pole of the left magnet towards the red end of the right magnet then they will repel. Which proves that the red end of the right magnet is north pole and hence getting repelled by the north pole of another magnet.

Therefore, the two pieces act as individual magnets.

13. How do plants and animals help each other in exchange of gases in the atmosphere?

Ans: In photosynthesis, plants take carbon dioxide and give out oxygen. The animals breath in oxygen in respiration and carbon dioxide is given out which is again used by plants for photosynthesis, that is, preparation of food by plants. This is how plants and animals help each other in the exchange of gases in the atmosphere.

14. Write 3 sentences on what comes to your mind when you chance to see the following.

(a) A rag picker.

(b) A cow eating a polythene bag.

(c) Foul odour emanating from garbage at the entrance of your house.

Ans. (a) He must be very poor and facing poverty hence needs to remove the garbage generated by others. This job is quite risky for him because he is getting exposed to harmful substances and most likely to infect by many diseases caused by germs and harmful microorganisms.

(b) Plastic is non-biodegradable and hence very harmful for animals. If cow ingest a plastic it will

chock their digestive system which lead to slow and painful death.

(c) Large quantity of garbage is generated which start rotting and cause air pollution . it will soon removed from entrance of the home and disposed carefully .

15. Beautiful hand crafted articles like boxes and toys are made of paper pulp in our country. Canyou explain how paper pulp which is made from paper can be used to make hard boxes and otherarticles?

Ans. The paper pulp can be solidified by using plaster of Paris or a layer of clay over the layer of paper pulp. The structure of paper pulp can also be covered by a layer of cement to solidify it.This is also known as papier-mâché ,its a paste of paper pulp and clay to form toys and boxes.

16. Recently, a ban on plastic bags has been imposed in many places? Is the ban justified? Givereasons in three sentences.

Ans. I strongly believe plastic bags must be banned as, They are often used to fill garbage in them and are thrown away in the open. It proves fatal for the stray animals which consume this.

Plastic bags thrown carelessly end up in the drains and finally choking them.

They give out harmful gases on heating or burning which causes respiratory problems and also result in air pollution. Therefore, it must be banned. Instead of using plastic bags, people can use cotton, paper or jute bags.

17. Why should we not burn plastic items?

Ans. Burning of plastic releases harmful gases into the atmosphere leading to air pollution and causing diseases. The burning process is not that easy and the burnt particles may be eaten up by the animals which may choke their system and cause their death. The burnt particles are toxic and may lead to soil pollution.

18. What happens when

(a) Cooking medium is made to flow down a drain.

(b) Insecticides, motor oil, paints are poured down the drain.

(c) Tea leaves, cotton swabs and old soft toys are thrown into the drain.

Ans. (a) It clogs the pores in the soil and leads to blockage of pipes.

(b) Kill useful microbes required to purify water.

(c) Choke the drains.

19. Answer the following questions in one or two words or sentences:

(a) Why should we prefer to use paper bags rather than polythene bags?

(b) Who, out of the following should properly dispose of the garbage - father, mother, elder brother, younger sister?

(c) Which one out of beetles, roundworm and earthworm are used for vermicomposting and why?

Ans. (a) Paper can be recycled and reused while polythene bags are non-biodegradable.

(b) Every member should do it.

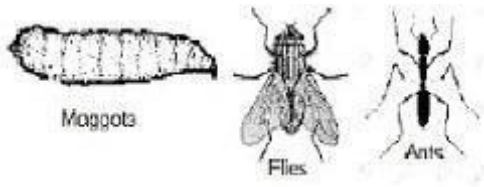
(c) Earthworms. They convert waste from plants and animals or their product into compost and therefore known as farmers friend.

20. Discuss:

(a) Is garbage disposal the responsibility only of the government?

(b) Is it possible to reduce the problems relating to disposal of garbage?

Answer: (a) No, garbage disposal is not only the responsibility of the government. It is sole responsibility of both government and the people. People should not litter at public places. They



should also take care for the effective disposal of the waste produced at home, schools, hospitals etc.

(b) Yes, it is possible to reduce the problems relating to disposal of garbage by taking following measures:

People should concern about generating less waste products and creating awareness among them.

Each and every product should be used efficiently.

Biodegradable and nonbiodegradable wastes should be separated.

Waste products or garbage must be recycled and setting up center for the treatment of them.

