



# पुर्णा International School

Shree Swaminarayan Gurukul, Zundal

PERIODIC ASESMENT - 1 2023- 24				
STUDENT NAME				
SUBJECT	ENGLISH	GRADE	1	ROLL NO.

## 1 Trace the dots of given number

a) 8 =

EIGHT

b) 12 =

twelve

c) 7 =

SEVEN

d) 9 =

NINE

e) 11 =

eleven

f) 2 =

TWO

g) 3 =

THREE

h) 16 =

sixteen

## 2 Look at the Picture and Trace the Words

a)



bird

b)



boy

c)




hand

d)



door



fish



cake

### Grammar.

#### 1. Fill in the blanks with I/he/she/it.

- a) Tania loves animals. \_\_\_\_\_ has a pet cat.
- b) My name is Mandeep. \_\_\_\_\_ am a girl.
- c) This boy is Akram. \_\_\_\_\_ is my friend.
- d) The giraffe has is very tall. \_\_\_\_\_ has a long neck.
- e) Sneha loves animals \_\_\_\_\_ has a pet cat.
- f) My sister and \_\_\_\_\_ went to the park.
- g) The bird is singing. \_\_\_\_\_ is sitting on the tree.
- h) \_\_\_\_\_ is an owl.
- i) \_\_\_\_\_ is my sister.
- j) \_\_\_\_\_ is my uncle.
- k) \_\_\_\_\_ is a table.

### Language in use.

#### 2. Rewrite the sentences by adding full stops and capital letters.

a) rex was born in july

---

---

---

b) my mother and i like to run

---

---

---

C) I play in the park

---

---

---

d) my mother and i like to run

---

---

---

e) I play everyday

---

---

---

f) the sun is bright today

---

---

---

g) he has new book

---

---

---

h) my father and i like to run

---

---

---

**Section-B**

**Literature and Writing**

**Literature Comprehension. Circle the correct answers.**

**5a.** When does Rex go for walks?

(A) in the evenings

(B) in the afternoons

(C) at night

(D) in the morning

**5b.** What does Rex do all the time?

(A) plays

(B) wags his tail

(C) chews on his bone

(D) goes on walks

**5c.** What does child do whole long day?

(A) cry and plays

(B) sit and play

(C) laugh and play

(D) sit and sleep

**5d.** What does Rex everyday?

(A) he plays with his red ball

(B) he eats rice and milk

(C) he chews his bone

(D) he goes on long walks

**5e.** What does Rex do all the time?

(A) plays

(B) wags his tail

(C) chews on his bone

(D) goes on walks

**5f.** What colour is Rex?

(A) red

(B) black

(C) brown

(D) golden

**6. Tick the Correct one**

a) We should take care / not take care of our pets.

b) We should be try be a happy/sad.

c) We should respect / not our elders.

7. Look at the picture. Fill in the blanks with the words given in the box. Add a full stop when you complete a sentence.



hats

gifts

candles

three

a) The girl is blowing out the \_\_\_\_\_ on the cake.

b) All the children are wearing party \_\_\_\_\_

c) Her friends have given her many \_\_\_\_\_

d) There are \_\_\_\_\_ candles on the cake.

**B Look at the picture. Fill in the blanks with the words given in the box. Add a full stop when you complete a sentence.**



Happy Reading Park Playing jumping Pulling

- a) This is a scene of \_\_\_\_\_.
- b) All the children are \_\_\_\_\_.
- c) The girl is \_\_\_\_\_ a book.
- d) One boy is \_\_\_\_\_ happily.

A. Look at the picture and answer the questions given below.



6. There is a \_\_\_\_\_ and a girl in the picture. ( )

(A) woman (B) man

(C) dog (D) boy

7. We can see the \_\_\_\_\_ in the sky. ( )

(A) star (B) Sun

(C) bird (D) Moon

8. They have \_\_\_\_\_ on their backs. ( )

(A) books (B) chairs

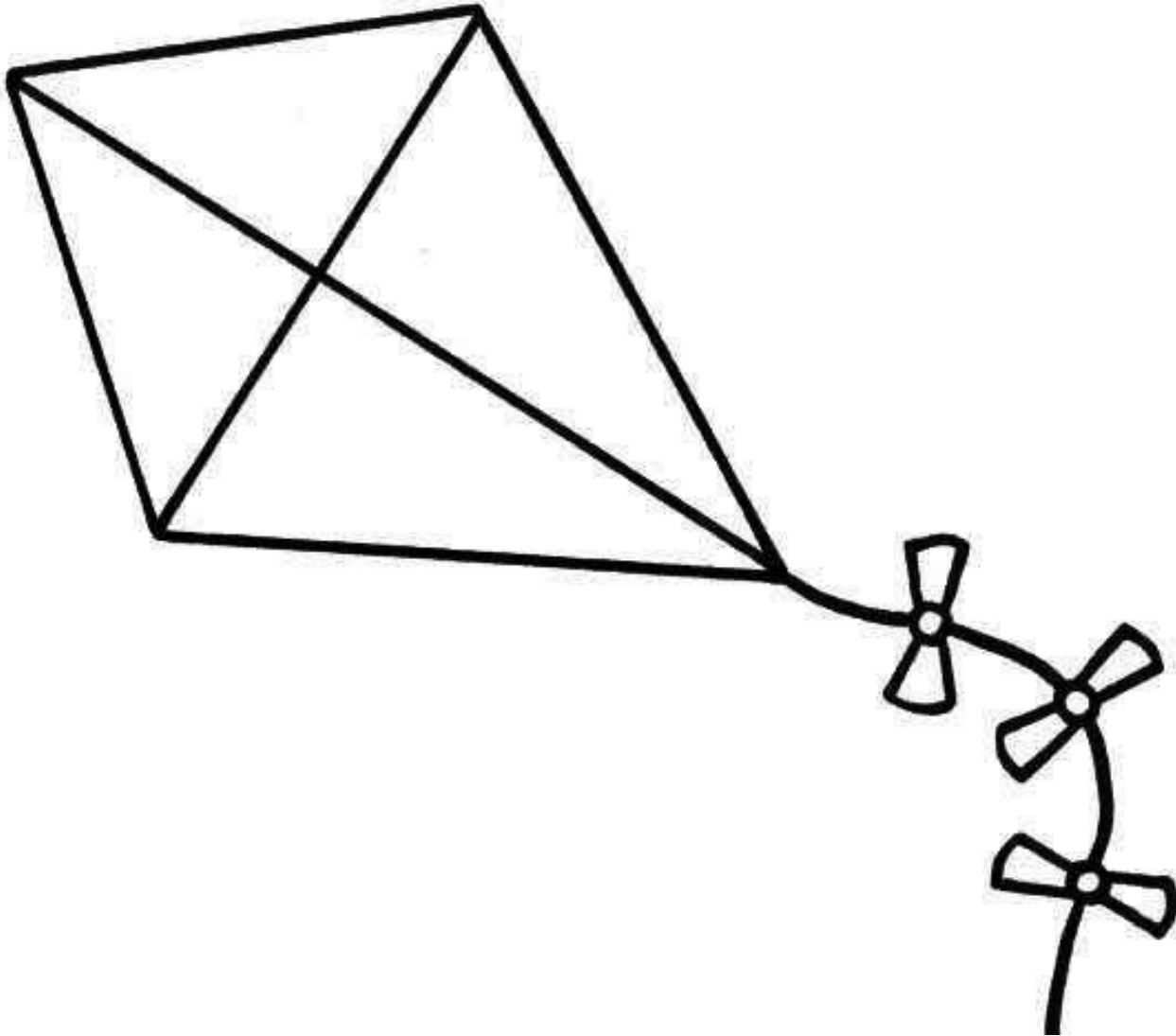
B(C) bags (D) hats





Try and answer this for fun. This is not counted in the total marks.

6. Colour the picture in bright colours.



This is k \_\_\_\_\_

7. Colour the picture in bright colours.



This is U \_\_\_\_\_ r \_\_\_\_\_



# पुर्णा International School

Shree Swaminarayan Gurukul, Zundal

PERIODIC ASSESSMENT – 1 QUESTION BANK - 2023– 24				
STUDENT NAME				
SUBJECT	HINDI	GRADE	1	Roll NO.

1. स्वर लिखिए ।

अ आ इ ई उ ऊ  
ऋ ए ऐ ओ औ अं अः

2. व्यंजन लिखिए ।

क ख ग घ ङ च छ ज झ ञ ट ठ

ड ढ ण त थ द ध न प फ ब भ

म य र ल व श ष स ह क्ष त्र ज

3. सही मिलान कीजिए ।

- |          |   |      |
|----------|---|------|
| 1. माला  | → | गिन  |
| 2. सिर   | → | बाजा |
| 3. लिख   | → | खीर  |
| 4. चील   | → | गिर  |
| 5. पुल   | → | धूल  |
| 6. फूल   | → | कुल  |
| 7. गृह   | → | खेल  |
| 8. रेल   | → | मृग  |
| 9. तोता  | → | पैसा |
| 10. थैला | → | मोर  |

4. अंकों को शब्दों से जोड़े ।

- |        |   |      |
|--------|---|------|
| 1. १   | → | दो   |
| 2. २   | → | एक   |
| 3. ३   | → | चार  |
| 4. ४   | → | तीन  |
| 5. ५   | → | छ    |
| 6. ६   | → | पाँच |
| 7. ७   | → | आठ   |
| 8. ८   | → | सात  |
| 9. ९   | → | दस   |
| 10. १० | → | नौ   |

5. खाली जगह भरिए ।

1. कौवा मधुमक्खी के छते से टकरा गया ।
2. आम कौवे के घोंसले में गिरा ।
3. गिलहरी को देख कौवे के बच्चे चिल्लाने लगे ।
4. बच्ची की उम्र छह साल है ।
5. टोकरी में आम रखे हैं ।
6. बच्ची सबको आम दिखा दिखाकर दे रही है ।
7. गिलहरी से छु कर आम पेड़ पर गिर ।
8. लड़का अपने साथ गुलेल लाया था ।
9. टूटने के बाद आम को गिलहरी ने पकड़ा ।
10. पगड़ी वाला व्यक्ति पेड़ के नीचे आराम कर रहा था

6. शब्दार्थ लिखिए ।

1. अम्मा - माँ
2. आसमान - आकाश
3. मजा - आनंद
4. चोंच - पक्षीओ के मुँह
5. घोंसला - पक्षी का घर

6. गुलेल - छोटा उपकरण
7. टोकरी - डलिया
8. दाम - कीमत
9. साल - वर्ष
10. छोकरी - लड़की

7. शब्द रचना ।

1. आ + म = आम
2. क + हा + नी = कहानी
3. प + ग + डी = पगड़ी
4. गु + ले + ल = गुलेल
5. चि + डि + या = चिड़िया
6. नि + शा + न = निशान
7. ख + र + गो + श = खरगोश
8. त + र + बू + ज = तरबूज
9. च + ढ + क + र = चढ़कर
10. आ + स + मा + न = आसमान

8. शुद्ध शब्दों पर (✓) निशान लगाइए ।

1. अम्माँ - अम्मा (✓)
2. उपर - ऊपर (✓)
3. दिल्ली(✓) - दिललि
4. पत्ता(✓) - पतता
5. धरती(✓) - धरति
6. बुलाती(✓) - बूलाती
7. दीखाकर - दिखाकर(✓)
8. गिलहरी(✓) - गीलहरी
9. पगडि - पगड़ी(✓)
10. किसान(✓) - कीसान

9. समान लय वाले शब्द लिखिए ।

1. झूला - भूला
2. राज - आज

3. दिल्ली - बिल्ली
4. चढ़कर - बढ़कर
5. धरती - भरती
6. चल - कल
7. दाम - काम
8. मजा - सजा
9. बुलाती - रुलाती
10. छोकरी - टोकरी

10. प्रश्नों के उत्तर लिखिए ।

1. बादल कैसे बरस रहे हैं ?

उत्तर : रिमझिम रिमझिम

2. बालक झूले पर चढ़कर किसे छू लेना चाहता है ?

उत्तर : आसमान को

3. लड़के ने आम कैसे तोड़ा ?

उत्तर : गुलेल से

4. घोंसले में किस पक्षी के अंडे थे ?

उत्तर : कौवे के

5. अंत में आम किसके हाथ में आया ?

उत्तर : लड़की के

6. आम को सबसे पहले किसने देखा ?

उत्तर : लड़की ने

7. बच्ची सबको किस प्रकार बुला रही है ?

उत्तर : टोकरी दिखाकर

8. कविता में बच्ची क्या नहीं बात रही है ?

उत्तर : दाम

9. बच्ची क्या नहीं बुलाती है ?

उत्तर : नाम

10. आम कौन सी चीज में रखे है ?

उत्तर : टोकरी में



## PERIODIC ASSIGNMENT 1 2023-24

STUDENT NAME

SUBJECT

Maths

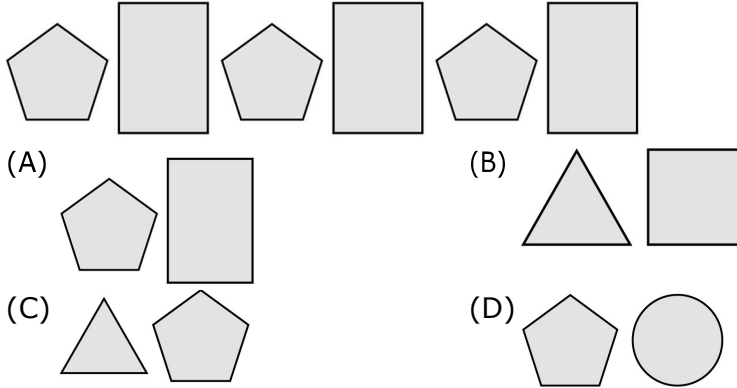
GRADE

1

ROLL NO.

Choose the correct answer:

- 1) What are the next two shapes in the given pattern? [ ]




- 2) Which of the following solid shapes has the same base shape as a cup? [ ]



- (A) sphere (B) cuboid  
(C) cone (D) cube

Read the following case and answer the questions given below.


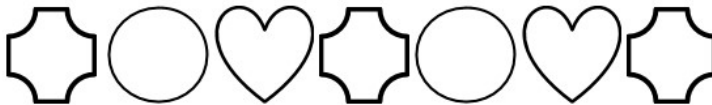
- 3) One sunny day, 6 friends went on a trip. They took a ride on a toy train. The toy train was made up of different shapes such as squares, triangles, rectangles and circles. They clicked a picture, which is given below. \_\_\_\_\_




- 1) Which part of the train has 3 triangles? [   ]  
 (A) A (B) B  
 (C) C (D) D
- 2) How many circles can you see in the picture? [   ]  
 (A) 10 (B) 9  
 (C) 8 (D) 11
- 3) How many rectangles in picture ? [   ]  
 (A) 4 (B) 5  
 (C) 8 (D) 2
- 4) How many childrens in the train ? [   ]  
 (A) 4 (B) 2  
 (C) 6 (D) 8

**Fill in the blanks:**

- 4) The next shape in the given pattern is shape\_\_\_\_\_.




Shape 1




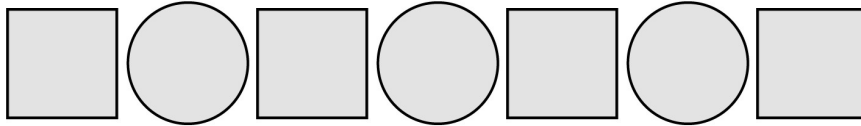
Shape 2

- 5) There are \_\_\_\_\_circles in the given figure.





6) Which shape comes next in the following pattern?



Shape 1



Shape 2

7) Which shape can you see in the given alphabet?



8)a;- Which shape comes next in the given pattern?



Shape 1



Shape 2



Shape 3

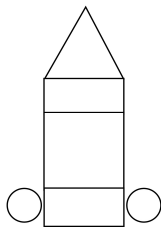


b;- which shape comes next in the given pattern ?



**Answer the following:**



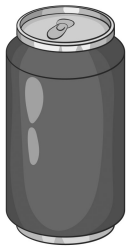
8) Count the number of circles and rectangles.



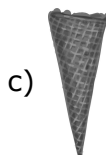

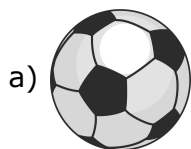
Number of circles = \_\_\_\_\_

Number of rectangles = \_\_\_\_\_

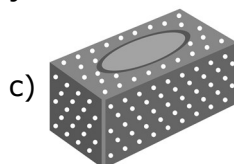
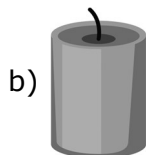
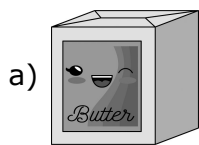
9) Identify the shape of each object.



10) Ramu collected the following objects. Identify the shape of each object.



11) Draw the base shape of the given objects.



**12)** Write numbers name of following

A;- 16-\_\_\_\_\_

B;- 23-\_\_\_\_\_

C;-30-\_\_\_\_\_ - \_

D;-28-\_\_\_\_\_





PERIODIC ASSESSMENT – 1 QUESTION BANK - 2023– 24					
STUDENT NAME					
SUBJECT	EVS	GRADE	1	Roll NO.	

**Q.1 Choose the correct answer:**

1) What is the full form of ID card?

- (A) Name card (B) Address card  
(C) Birthday card (D) Identity card

2) Ronit should drink X to take care of his body. What is X?

- (A) milk (B) cold drink  
(C) coffee (D) tea

3), Male and female are two different \_\_\_\_\_.

- (A) ends (B) age (C) address

4) ID card of short form for ?

- A) Date of birthday B) Identity card C) age

5) Which of the following tells the place we live ?

- A) Name B) address C) genders

6) What we call our uncles and aunts children?

- A) Cousins B) sibling C) parents

7) Our mother and father are our \_\_\_\_\_.

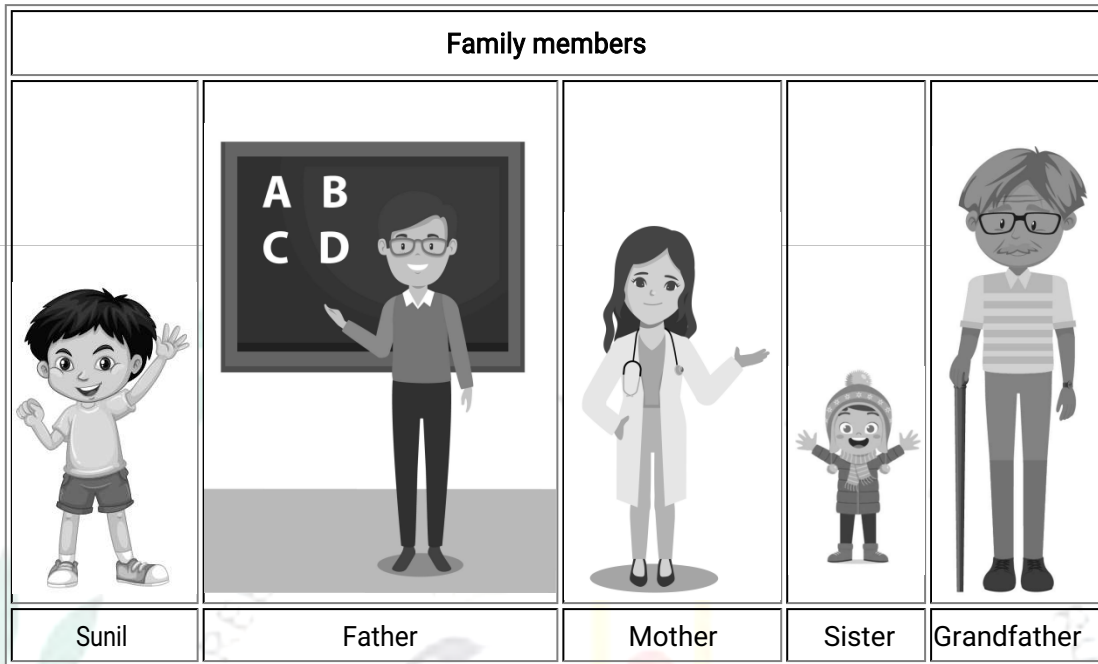
- A) Parents B) sons C) aunts

8) What we call our mother's sister.

- A) Aunts B) Grandmother C) Sibling

**Q.2 Read the given case and answer the following questions.**

It was Sunil's first day at school. He made a new friend, Rishi. Rishi wanted to know about Sunil's family. So, Sunil showed Rishi the following pictures of his family members. Look at the below pictures and answer the following questions.



- Which of the following members of Sunil's family is a doctor?
  - Sunil
  - Sunil's mother
  - Sunil's father
  - Sunil's grandfather
- Which of the following members of Sunil's family is the shortest?
  - Sunil's sister
  - Sunil
  - Sunil's mother
  - Sunil's father
- From the picture, guess which of the following is the job of Sunil's father.
  - doctor
  - artist
  - teacher
  - homemaker

**Q.3 Read the given statement and the reason. Then, choose the best option.**

Statement (S): Our sisters and brothers are a part of our family.

Reason (R): We are related to each other.

- Both S and R are true, but R is not the correct explanation of S.
- S is false, R is true.
- S is true, R is false.
- Both S and R are true, and R is the correct explanation of S.

**Q.4 Match the following.**

Column A	Column B	
1) Eyes	a) Write	b)
2) Skin	b) See	
3) Eyes	c) Feel	
4) Ears	d) Taste	
5) Hand	e) Hear	

**Q.5 Match the following.**

- |             |       |                   |
|-------------|-------|-------------------|
| 1. Skin     | _____ | Hear              |
| 2. Ears     | _____ | Feel              |
| 3. Mouth    | _____ | See               |
| 4. Eyes     | _____ | Speak             |
| 5. Hand     | _____ | Smell             |
| 6. Nose     | _____ | Write             |
| 7. Doctor   | _____ | Builds house      |
| 8. Engineer | _____ | A treat people    |
| 9. Teacher  | _____ | Protect a fingers |
| 10. Nails   | _____ | Lern new things   |

**Q.6 Fill in the blanks using the correct words from the brackets:**


1. Our arms and legs are together known as our \_\_\_\_\_. (neck/limbs)
2. People find out about the place we live in with the help of our \_\_\_\_\_. (address/surname)
3. \_\_\_\_\_ is the middle part of body . (Trunk, leg)
4. \_\_\_\_\_ are oue arms and legs. (brain,limbs)
5. \_\_\_\_\_ delivers the letters to the correct place. (postman, guard)

**Q.7 Write Yes(Y) or No(N):**

- 1 You can call for help using your age \_\_\_\_\_
2. People who paint, dance or sing are called artists. \_\_\_\_\_
- 3 Our father's parents are our grandparents., \_\_\_\_\_
4. We eat every day junk food. \_\_\_\_\_
5. The head is the upper most part of the body. \_\_\_\_\_
6. The hands help us to hold and eat. \_\_\_\_\_
7. We should brush our teeth weekly. \_\_\_\_\_
8. Our hair is protect our nails. \_\_\_\_\_


**Q.8 Name the following:**

1. The body part that is protected by our nails.  
A. \_\_\_\_\_
2. The sign shown in the picture below.



A. \_\_\_\_\_

3. What the boy and the girl in the picture below ?



A. \_\_\_\_\_

Q.9 Choose the correct words from the brackets and complete the following table.  
(brush/cut/comb/hair/teeth)

Ways to keep our body parts clean	
	We should _____ our _____ .
	We should _____ our _____ .

Q.10 Answer the following question(s) in one to two sentences:

1. Who is help to you learn new things?

A. \_\_\_\_\_

2. Who is the upper most part of our body?

A. \_\_\_\_\_

3. Which sense organ help to feel ?

A. \_\_\_\_\_

4. Who is treat people by giving them medicines?

A. \_\_\_\_\_



5. Who is protect the tips of our fingers?

A. \_\_\_\_\_

6. Give Reasons: We go to a doctor when we are sick.

A. \_\_\_\_\_

7. Rima has a little brother, Ribhu. He has high fever. They are alone in their house. How can Rima help her brother?

A. \_\_\_\_\_

8. Write the names of any two parts of the head.

A. \_\_\_\_\_



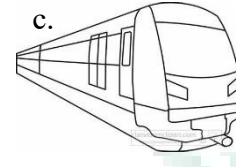


### SUMMATIVE ASSESSMENT – 1 QUESTION BANK - 2023– 24

STUDENT NAME				
SUBJECT	Computer	GRADE	1	Roll NO.

#### Q. 1 Choose the correct option.

1. Which of the following machines you see at your home?



2. Machines save our \_\_\_\_\_.

a. Time

b. efforts

c. both a and b

3. Machines run on .

a. Fuel

b. coal

c. electricity

4.



It is a \_\_\_\_\_ thing.

a. Number

b. natural

c. man-made

5. Computer never gets.

a. Tired

b. tag

c. water

6. Which of the following tasks you can do on a computer?

a. Eating

b. playing

c. dancing

7. Man-made things are made by \_\_\_\_\_.

(a) man

(b) nature

(c) animals

8. Machines save our \_\_\_\_\_.

(a) time

(b) effort

(c) Both (a) and (b)

9. \_\_\_\_\_ are natural things.

(a) Sharpeners

(b) Trees

(c) Bulbs

10. Which of the following you can't do on a computer?

(a) Play games

(b) Jump

(c) Type stories

11. \_\_\_\_\_ is small enough to be kept on our lap to work.

(a) Laptop

(b) Desktop

(c) Smartphone

**Q. 2 Fill in the blanks.**

1. Laptops and smartphones are examples of \_\_\_\_\_ computers.
2. Things not created by man are called \_\_\_\_\_.
3. \_\_\_\_\_ machines work on either electricity or fuel.
4. \_\_\_\_\_ is known as the 'Father of Computer'.
5. A \_\_\_\_\_ has many functions of a computer.
6. A computer works on \_\_\_\_\_.
7. You can \_\_\_\_\_ games on a computer.
8. Charles Babbage is known as 'the \_\_\_\_\_ of computer'.
9. A computer is a \_\_\_\_\_ machine.
10. A manual juicer needs \_\_\_\_\_ effort to squeeze out the juice.

**Q. 3 Missing Letters.**

1. N\_TUR\_L TH\_N\_S
2. R\_FR\_G RAT\_R
3. AE\_O LA\_E
4. S\_AR\_P\_ON\_
5. DE\_KT\_PC\_MP\_T\_R
6. L\_P\_O P
7. C\_M\_UT\_R
8. M A\_H\_N\_
9. O\_T P\_T
10. D\_S K\_O\_

**Q. 4 Write true or false.**

1. A computer requires less human effort. \_\_\_\_\_
2. Machines make our work easier. \_\_\_\_\_
3. A train is a natural thing. \_\_\_\_\_
4. Pencil is a natural thing. \_\_\_\_\_
5. A machine saves time and effort. \_\_\_\_\_
6. Manual machines need physical strength to work. \_\_\_\_\_
7. Computers get tired and bored. \_\_\_\_\_

**Q. 5 Answer the following questions.**

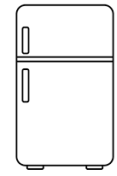

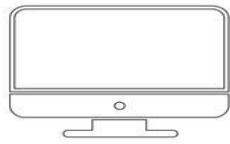
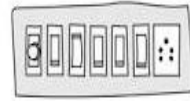


1. Write any two man made things which are not machines .  
\_\_\_\_\_  
\_\_\_\_\_

2. Give name of any portable computer.

---

---

**Q6. Find and circle all the machines.**



**Q. 7 Draw a picture of a desktop computer and colour it.**

